

Get better at Math.  
Get better at  
everything.



Come experience the Cuemath methodology and ensure your child stays ahead at math this summer.



**Adaptive  
Platform**



**Interactive Visual  
Simulations**



**Personalized  
Attention**

For Grades 1 - 10



LIVE online classes  
by trained and  
certified experts.

Get the Cuemath advantage

**Book a FREE trial class**

## Tracing Triangles Worksheet - 1

Q.1. Trace the word - triangle.

triangle

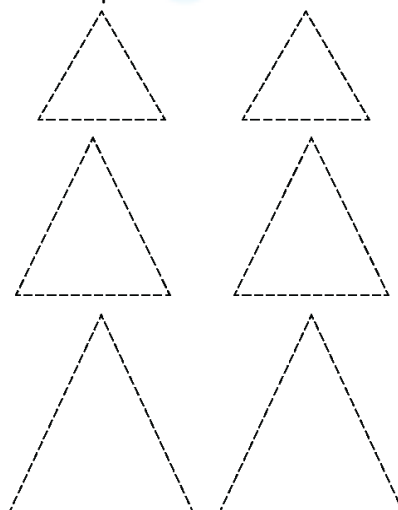
triangle

triangle

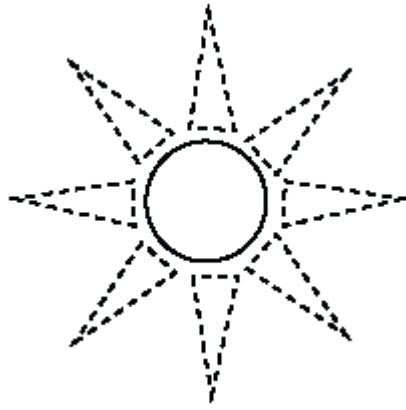
triangle

triangle

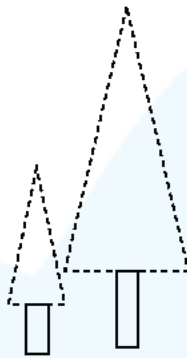
Q.2. Trace the triangle Shapes and color them.



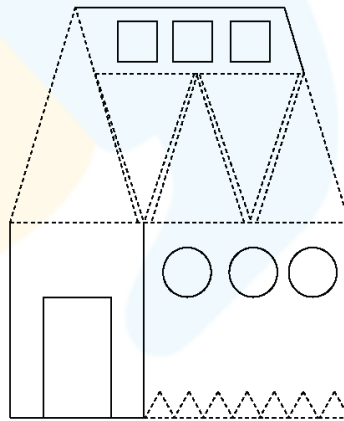
Q.3. Trace the triangles and color them orange.



Q.4. Trace the triangles.




Q.5. Trace the triangles.



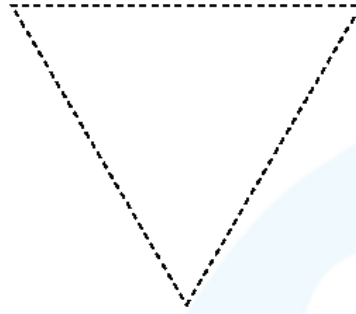
Q.6. Trace the triangles.



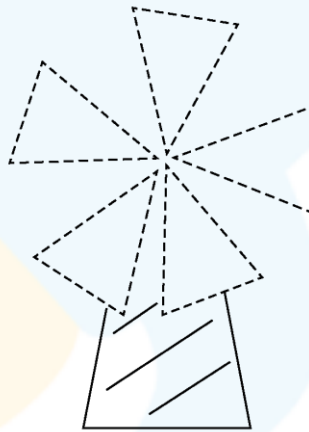
Q.7. Trace the triangles and color them.



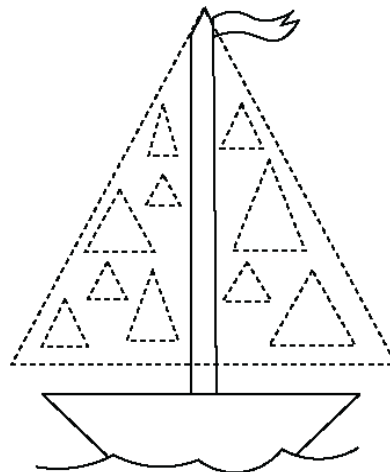
Q.8. Trace the triangles and color them.



Q.9. Trace the triangles and color them.



Q.10. Trace the triangles and see the boat sail.



**When you learn math  
in an interesting way,  
you never forget.**



**25 Million**

Math classes &  
counting

**100K+**

Students learning  
Math the right way

**20+ Countries**

Present across USA, UK,  
Singapore, India, UAE & more.

## Why choose Cuemath?

"Cuemath is a valuable addition to our family. We love solving puzzle cards. My daughter is now visualizing maths and solving problems effectively!"

- Gary Schwartz

"Cuemath is great because my son has a one-on-one interaction with the teacher. The instructor has developed his confidence and I can see progress in his work. One-on-one interaction is perfect and a great bonus."

- Kirk Riley

"I appreciate the effort that miss Nitya puts in to help my daughter understand the best methods and to explain why she got a problem incorrect. She is extremely patient and generous with Miranda."

- Barbara Cabrera

Get the Cuemath advantage

**Book a FREE trial class**

## FUN FACT

1. Triangles are the polygons which have least number of sides that is 3.
2. Triangle is a two-dimensional shape.
3. A triangle having three sides of equal length, is known as an equilateral triangle.

