

Get better at Math.
Get better at
everything.



Come experience the Cuemath methodology and ensure your child stays ahead at math this summer.



**Adaptive
Platform**



**Interactive Visual
Simulations**



**Personalized
Attention**

For Grades 1 - 10





LIVE online classes
by trained and
certified experts.

Get the Cuemath advantage


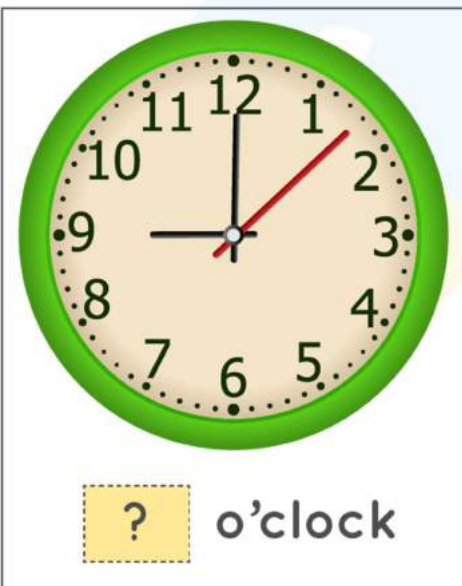
Book a FREE trial class

Time Worksheets Grade 2


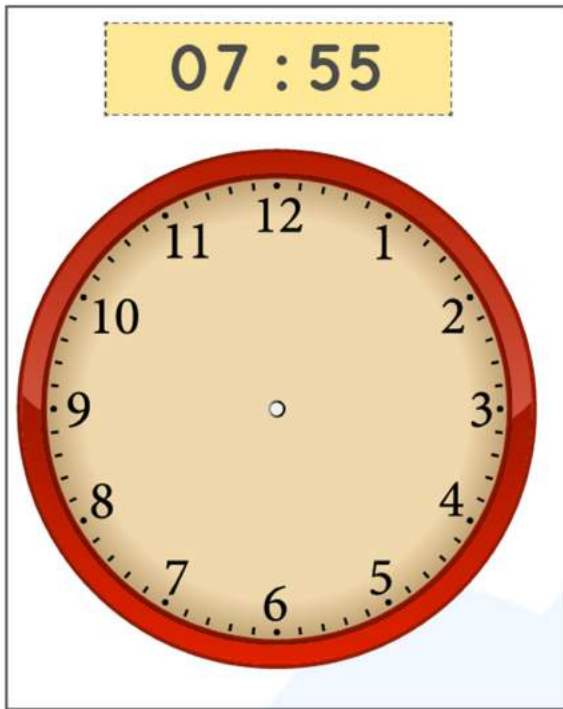
1) Write the time shown in the clocks below.



2) Write the times shown in the clocks below.



3) Draw the hour hand and minute hand to show the times mentioned in each of the clocks.



4) What time does the clock represent?



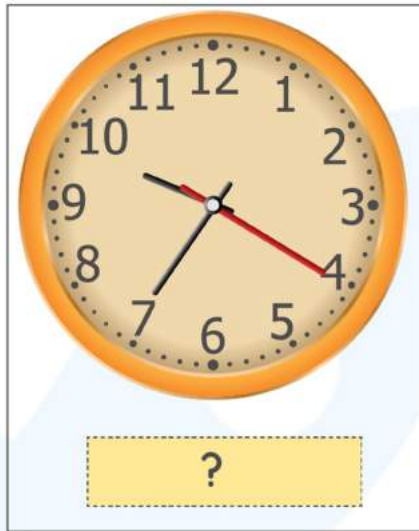
5) Select the correct option.

The hour that comes after 5:00 is 6:00 - Yes / No

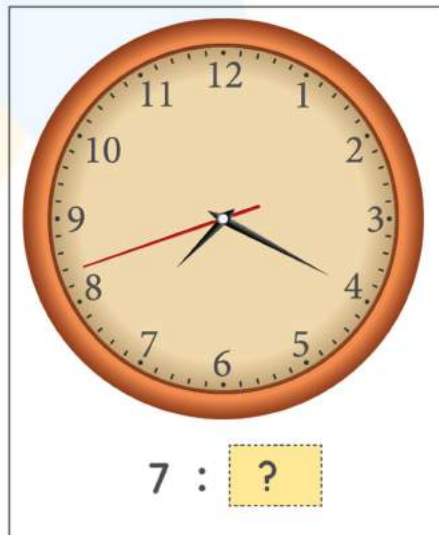
The hour that comes just before 12 o' clock is 11 o' clock. -

Yes / No

6) Write the time as shown in the clock.



7) Write the times as shown in the figure below.



8) 12:30 lies between:

a) 12:00 and 1:00

b) 1:30 and 2:30

c) 10:30 and 11:30

9) Maria decided to play video game. She started off at 5:00 in the evening and finished at 6:15. How much time did she spend playing video game?

10) How many hours and minutes have passed from 12:15 to 3:20?



**When you learn math
in an interesting way,
you never forget.**



25 Million

Math classes &
counting

100K+

Students learning
Math the right way

20+ Countries

Present across USA, UK,
Singapore, India, UAE & more.

Why choose Cuemath?

"Cuemath is a valuable addition to our family. We love solving puzzle cards. My daughter is now visualizing maths and solving problems effectively!"

- Gary Schwartz

"Cuemath is great because my son has a one-on-one interaction with the teacher. The instructor has developed his confidence and I can see progress in his work. One-on-one interaction is perfect and a great bonus."

- Kirk Riley

"I appreciate the effort that miss Nitya puts in to help my daughter understand the best methods and to explain why she got a problem incorrect. She is extremely patient and generous with Miranda."

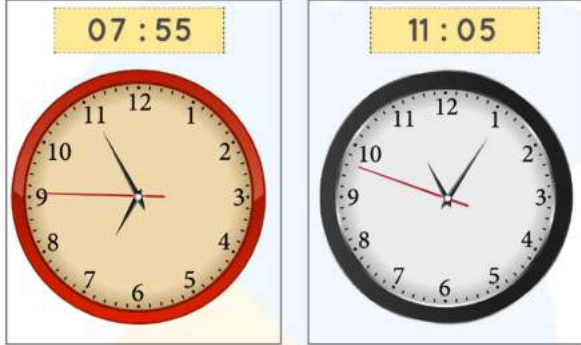
- Barbara Cabrera

Get the Cuemath advantage

Book a FREE trial class



ANSWERS

1)	2 o' clock 10 o' clock
2)	9 o'clock 3 o' clock
3)	
4)	6 o' clock
5)	Yes Yes
6)	7:15 9:35

7)	11:50 7:20
8)	12:00 and 1:00
9)	1 hour and 15 minutes
10)	3 hours and 5 minutes

FUN FACT

1. Before clocks came into existence people knew time by looking at the position of the Sun.
2. One of the oldest devices to find time was the sundial.
3. Sand clock was one other device used to measure time by the movement of sand particles from one bulb to another.

