

Get better at Math.
Get better at
everything.



Come experience the Cuemath methodology and ensure your child stays ahead at math this summer.



**Adaptive
Platform**



**Interactive Visual
Simulations**



**Personalized
Attention**

For Grades 1 - 10




LIVE online classes
by trained and
certified experts.

Get the Cuemath advantage

Book a FREE trial class

Tens and Ones Worksheets

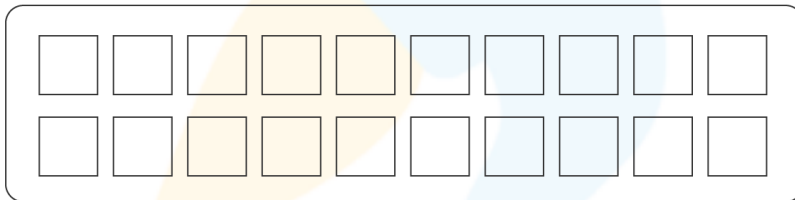
- 1) Circle the following objects into groups of tens write the remaining number of objects as ones.



_____ ten and _____ ones.

- 2) Write the number of tens and ones for the given number and shade the tens in red colour and ones in blue colour.

17 = _____ ten and _____ ones.

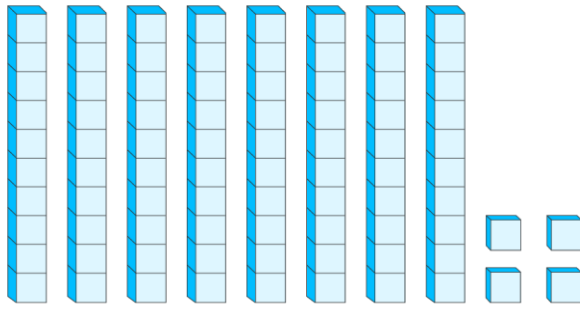


- 3) Write down the number of tens and ones.

a) 48 = _____ tens and _____ ones

b) 86 = _____ tens and _____ ones.

4) Choose the number from the picture.



a) 24 b) 32 c) 54 d) 84

5) Write the expanded form for the tens and ones given below.

a) 6 tens and 7 ones = _____ + _____

b) 5 tens and 9 ones = _____ + _____

6) Write the total number for the tens and ones given.

a) 11 tens and 9 ones = _____

b) 16 tens and 3 ones = _____

7) Express the following numbers as tens and ones.

a) 876 = _____ tens and _____ ones


b) 785 = _____ tens and _____ ones

8) Find the number of tens and ones in the following numbers.

a) 6534 = _____ tens and _____ ones

b) 8947 = _____ tens and _____ ones

9) Circle the following objects into groups of tens write the remaining number of objects as ones.



_____ ten and _____ ones.

10) 15 groups of 10 dolls and 3 groups of 1 doll make up how many dolls?

**When you learn math
in an interesting way,
you never forget.**



25 Million

Math classes &
counting

100K+

Students learning
Math the right way

20+ Countries

Present across USA, UK,
Singapore, India, UAE & more.

Why choose Cuemath?

"Cuemath is a valuable addition to our family. We love solving puzzle cards. My daughter is now visualizing maths and solving problems effectively!"

- Gary Schwartz

"Cuemath is great because my son has a one-on-one interaction with the teacher. The instructor has developed his confidence and I can see progress in his work. One-on-one interaction is perfect and a great bonus."


- Kirk Riley

"I appreciate the effort that miss Nitya puts in to help my daughter understand the best methods and to explain why she got a problem incorrect. She is extremely patient and generous with Miranda."

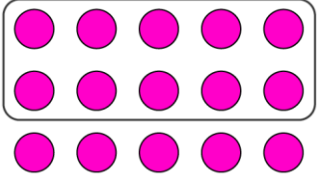
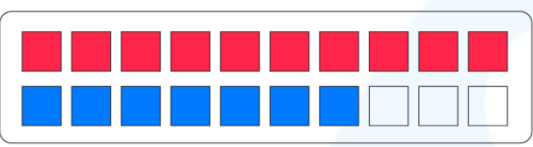
- Barbara Cabrera

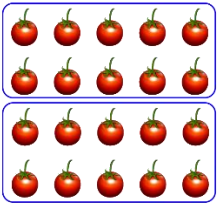
Get the Cuemath advantage

Book a FREE trial class



ANSWERS

1)	 <p>1 ten and 5 ones</p>
2)	 <p>1 ten and 7 ones</p>
3)	a) 4 tens and 8 ones b) 8 tens and 6 ones
4)	84
5)	a) $60 + 7$ b) $50 + 9$
6)	a) 119 b) 163

7)	a) 87 tens and 6 ones b) 78 tens and 5 ones
8)	a) 653 tens and 4 ones b) 894 tens and 7 ones
9)	 2 tens.
10)	153 dolls

FUN FACT

1. The number 12 is made up of 1 ten and 2 ones.
2. The number 20 refers to 2 tens and no ones.
3. The numbers 20 to 29 can be represented as 2 tens and a specific number of tens based on the number.

