

Get better at Math.
Get better at
everything.



Come experience the Cuemath methodology and ensure your child stays ahead at math this summer.



**Adaptive
Platform**



**Interactive Visual
Simulations**



**Personalized
Attention**

For Grades 1 - 10




LIVE online classes
by trained and
certified experts.

Get the Cuemath advantage

Book a FREE trial class

Tens and Ones Worksheets

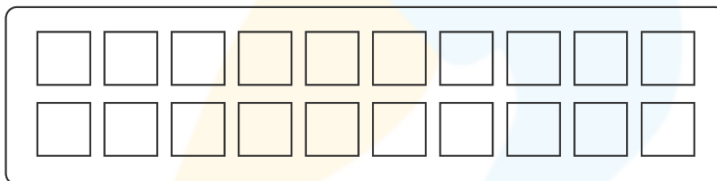
- 1) Circle the following objects into groups of tens write the remaining number of objects as ones.



_____ ten and _____ ones.

- 2) Write the number of tens and ones for the given number and shade the tens in red colour and ones in blue colour.

12 = _____ ten and _____ Ones.

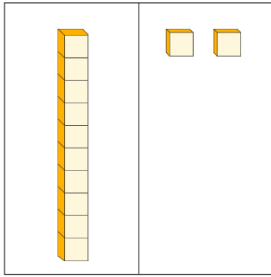


- 3) Write down the number of tens and ones.

a) 75 = _____ tens and _____ ones

b) 93 = _____ tens and _____ ones.

4) Choose the number from the picture.



a) 12 b) 22 c) 32 d) 42

5) Write the expanded form for the tens and ones given below.

a) 2 tens and 4 ones = _____ + _____

b) 9 tens and 6 ones = _____ + _____

6) Write the total number for the tens and ones given.

a) 8 tens and 9 ones = _____

b) 6 tens and 3 ones = _____

7) Express the following numbers as tens and ones.

a) 456 = _____ tens and _____ ones


b) 987 = _____ tens and _____ ones

8) Find the number of tens and ones in the following numbers.

a) 2341 = _____ tens and _____ ones

b) 9876 = _____ tens and _____ ones

9) Circle the following objects into groups of tens write the remaining number of objects as ones.



____ ten and ____ ones.

10) Rachel went to a shopping mall and purchased some items. She found that she was left with 12 ten-dollar bills and 15 one-dollar bills. Find out the total amount she was left with after the shopping.

**When you learn math
in an interesting way,
you never forget.**



25 Million

Math classes &
counting

100K+

Students learning
Math the right way

20+ Countries

Present across USA, UK,
Singapore, India, UAE & more.

Why choose Cuemath?

"Cuemath is a valuable addition to our family. We love solving puzzle cards. My daughter is now visualizing maths and solving problems effectively!"

- Gary Schwartz

"Cuemath is great because my son has a one-on-one interaction with the teacher. The instructor has developed his confidence and I can see progress in his work. One-on-one interaction is perfect and a great bonus."

- Kirk Riley

"I appreciate the effort that miss Nitya puts in to help my daughter understand the best methods and to explain why she got a problem incorrect. She is extremely patient and generous with Miranda."


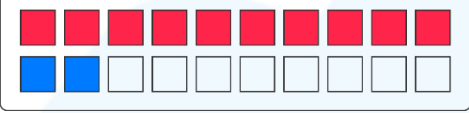
- Barbara Cabrera

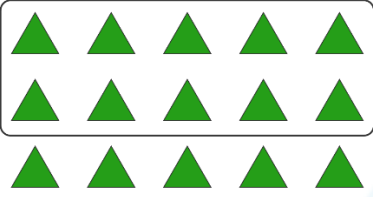
Get the Cuemath advantage

Book a FREE trial class



ANSWERS

1)	 <p>1 tens and 7 ones</p>
2)	<p>1 tens and 2 ones</p> 
3)	<p>a) 7 tens and 5 ones b) 9 tens and 3 ones</p>
4)	<p>12</p>
5)	<p>a) $20 + 4$ b) $90 + 6$</p>
6)	<p>a) 89 b) 63</p>

7)	a) 45 tens and 6 ones b) 98 tens and 6 ones
8)	a) 234 tens and 1 ones b) 987 tens and 6 ones
9)	 1 tens and 5 ones
10)	135 dollars

FUN FACT

1. Any number can be represented as a certain number of ones.
2. The number 10 is the first and smallest 2-digit number.
3. Ten ones, make one ten.

