

Get better at Math.
Get better at
everything.



Come experience the Cuemath methodology and ensure your child stays ahead at math this summer.



**Adaptive
Platform**



**Interactive Visual
Simulations**



**Personalized
Attention**

For Grades 1 - 10




LIVE online classes
by trained and
certified experts.

Get the Cuemath advantage

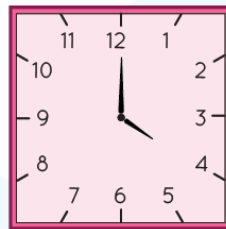
Book a FREE trial class

Telling Time Worksheets Grade 1

1) Select the clock on the right that shows the same time as the clock given on the left.

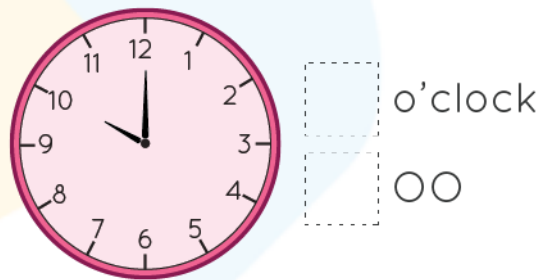


2) Look at the clock and answer.



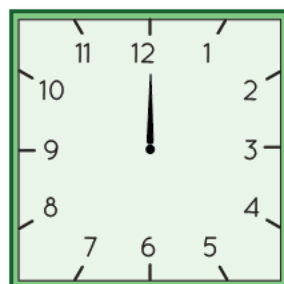
- a) Which number is the hour hand pointing at?
- b) Which number is the minute hand pointing at?

3) Look at the clock and write the time.




4) Represent the given time on the clock by drawing the hour hand.

a) 1:00



5) Write time.



6) The hour that comes just after 11:00 is _____.

7) The hour that comes just after 5:00 is 6:00. True or false.

8) Eight o'clock comes between 7 o'clock and ____ o'clock.

9) Which day comes just after Monday?

10) Which day is the first day of the week?

**When you learn math
in an interesting way,
you never forget.**



25 Million

Math classes &
counting

100K+

Students learning
Math the right way

20+ Countries

Present across USA, UK,
Singapore, India, UAE & more.

Why choose Cuemath?

"Cuemath is a valuable addition to our family. We love solving puzzle cards. My daughter is now visualizing maths and solving problems effectively!"

- Gary Schwartz

"Cuemath is great because my son has a one-on-one interaction with the teacher. The instructor has developed his confidence and I can see progress in his work. One-on-one interaction is perfect and a great bonus."


- Kirk Riley

"I appreciate the effort that miss Nitya puts in to help my daughter understand the best methods and to explain why she got a problem incorrect. She is extremely patient and generous with Miranda."


- Barbara Cabrera

Get the Cuemath advantage

Book a FREE trial class



ANSWERS

1)	Third clock
2)	a) Hour hand is pointing at 4 b) Minute hand is pointing at 12
3)	10 o' clock 10:00
4)	
5)	5:00
6)	10:00

7)	True
8)	9 o' clock
9)	Tuesday
10)	Sunday

FUN FACT

1. Time from 12:00 in the midnight to 11:59 in the morning is referred to as 'a.m'.
2. Time from 12:00 in the afternoon to late night 11:59 is referred to as 'p.m'.
3. There are two formats to represent time 12-hour and 24-hour clock.

