

Get better at Math.  
Get better at  
everything.



Come experience the Cuemath methodology and ensure your child stays ahead at math this summer.



**Adaptive Platform**



**Interactive Visual Simulations**



**Personalized Attention**

For Grades 1 - 10



LIVE online classes  
by trained and  
certified experts.

Get the Cuemath advantage

**Book a FREE trial class**

## Telling Time Worksheets

1) Select the odd one out.

**January, October, July, June, Summer**

2) Observe the given pattern. Tick the next term in the pattern.

January → March → May → July → ?

December     September     August

---

Sunday → Tuesday → Thursday → ?

Friday     Monday     Saturday

3) Answer the question.

If Friday is called the first day of the week, then which day of the week is the:

- a) Last day \_\_\_\_\_
- b) Seventh day \_\_\_\_\_
- c) Third day \_\_\_\_\_
- d) Fifth day \_\_\_\_\_

4) If June is called the first month of the year, then which month of the year is the:

- a) Third month \_\_\_\_\_
- b) Eleventh month \_\_\_\_\_
- c) Last Month \_\_\_\_\_
- d) Sixth day \_\_\_\_\_

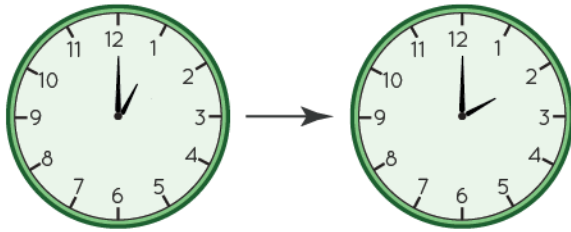
5) Which day comes before Tuesday?

6) Tick the correct option.

7:40 lies between

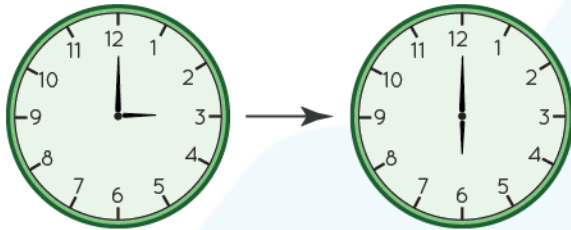
a) 7:00 and 8:00    b) 8:00 and 9:00    c) 6:00 and 7:00

7) Calculate the time that has passed.



Time that has passed

hour



Time that has passed

hours

8) How many minutes need to pass for 3:15 to become 3:45?

9) Jamie started for market at 3:15 in the afternoon and reached at 4:30 in the evening. Jeff started for market at 6:15 in the evening and reached at 10:20 in the night. Who took longer to reach market?

10) One week has 7 days. If a summer camp runs for four weeks, how many days does it run for?

**When you learn math  
in an interesting way,  
you never forget.**



**25 Million**

Math classes &  
counting

**100K+**

Students learning  
Math the right way

**20+ Countries**

Present across USA, UK,  
Singapore, India, UAE & more.

## Why choose Cuemath?

"Cuemath is a valuable addition to our family. We love solving puzzle cards. My daughter is now visualizing maths and solving problems effectively!"

- Gary Schwartz

"Cuemath is great because my son has a one-on-one interaction with the teacher. The instructor has developed his confidence and I can see progress in his work. One-on-one interaction is perfect and a great bonus."


- Kirk Riley

"I appreciate the effort that miss Nitya puts in to help my daughter understand the best methods and to explain why she got a problem incorrect. She is extremely patient and generous with Miranda."

- Barbara Cabrera

Get the Cuemath advantage

**Book a FREE trial class**

**ANSWERS**

|    |  |
|----|--|
| 1) | Summer   |
| 2) | September<br>Saturday  |
| 3) | a) Last day <b><u>Thursday</u></b><br>b) Seventh day <b><u>Thursday</u></b><br>c) Third day <b><u>Sunday</u></b><br>d) Fifth day <b><u>Tuesday</u></b> |
| 4) | a) Third month <b><u>August</u></b><br>b) Eleventh month <b><u>April</u></b><br>c) Last Month <b><u>May</u></b><br>d) Sixth day <b><u>November</u></b> |
| 5) | Monday   |
| 6) | a) 7:00 and 8:00   |

|     |  |
|-----|--|
| 7)  | 1:00 hour<br>3:00 hours                          |
| 8)  | 30 minutes need to pass for 3:15 to become 3:45. |
| 9)  | Jeff took longer to reach the market.            |
| 10) | 28 Days  |

## FUN FACT

1. Quarter past - This means 15 minutes have passed after the hour has started.
2. Quarter to - This means there are 15 minutes remaining to complete the given hour.
3. Half-past - This means 30 minutes have passed after the hour has started.

