

Get better at Math.  
Get better at  
everything.



Come experience the Cuemath methodology and ensure your child stays ahead at math this summer.



**Adaptive  
Platform**



**Interactive Visual  
Simulations**



**Personalized  
Attention**

For Grades 1 - 10



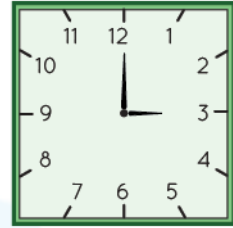
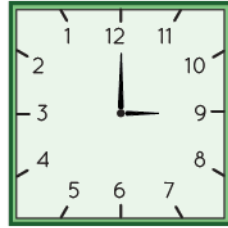
LIVE online classes  
by trained and  
certified experts.

Get the Cuemath advantage

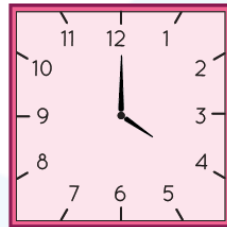
**Book a FREE trial class**

## Telling Time Worksheets

- 1) Select the clock on the right that shows the same time as the clock given on the left.

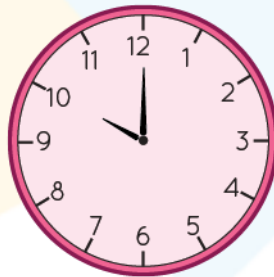


- 2) Look at the clock and answer.



- a) Which number is the hour hand pointing at?  
b) Which number is the minute hand pointing at?

- 3) Look at the clock and write the time.

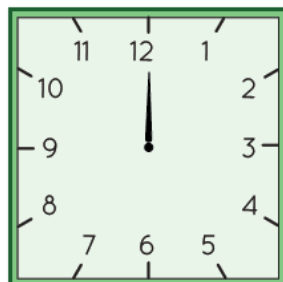


□ o'clock


□ □

- 4) Represent the given time on the clock by drawing the hour hand.

- a) 1:00



5) Write time.



- 6) The hour that comes just after 11:00 is \_\_\_\_\_.
- 7) The hour that comes just after 5:00 is 6:00. True or false.
- 8) Eight o'clock comes between 7 o'clock and \_\_\_\_ o'clock.
- 9) Which day comes just after Monday?
- 10) Which day is the first day of the week?

**When you learn math  
in an interesting way,  
you never forget.**



**25 Million**

Math classes &  
counting

**100K+**

Students learning  
Math the right way

**20+ Countries**

Present across USA, UK,  
Singapore, India, UAE & more.

## Why choose Cuemath?

"Cuemath is a valuable addition to our family. We love solving puzzle cards. My daughter is now visualizing maths and solving problems effectively!"

- Gary Schwartz

"Cuemath is great because my son has a one-on-one interaction with the teacher. The instructor has developed his confidence and I can see progress in his work. One-on-one interaction is perfect and a great bonus."


- Kirk Riley

"I appreciate the effort that miss Nitya puts in to help my daughter understand the best methods and to explain why she got a problem incorrect. She is extremely patient and generous with Miranda."


- Barbara Cabrera

Get the Cuemath advantage

**Book a FREE trial class**



**ANSWERS**

|    |   |
|----|---|
| 1) | Third clock   |
| 2) | a) Hour hand is pointing at 4<br>b) Minute hand is pointing at 12                   |
| 3) | 10 o' clock   10:00   |
| 4) |  |
| 5) | 5:00  |
| 6) | 10:00   |

|     |            |
|-----|------------|
| 7)  | True       |
| 8)  | 9 o' clock |
| 9)  | Tuesday    |
| 10) | Sunday     |

## FUN FACT

1. Time from 12:00 in the midnight to 11:59 in the morning is referred to as 'a.m'.
2. Time from 12:00 in the afternoon to late night 11:59 is referred to as 'p.m'.
3. There are two formats to represent time 12-hour and 24-hour clock.

