

Get better at Math.  
Get better at  
everything.



Come experience the Cuemath methodology and ensure your child stays ahead at math this summer.



**Adaptive  
Platform**



**Interactive Visual  
Simulations**



**Personalized  
Attention**

For Grades 1 - 10





LIVE online classes  
by trained and  
certified experts.

Get the Cuemath advantage

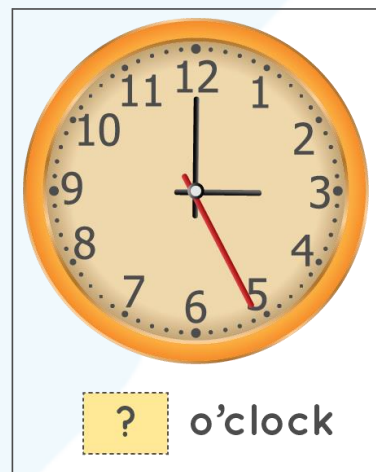

**Book a FREE trial class**

## Telling Time to Hour Worksheets


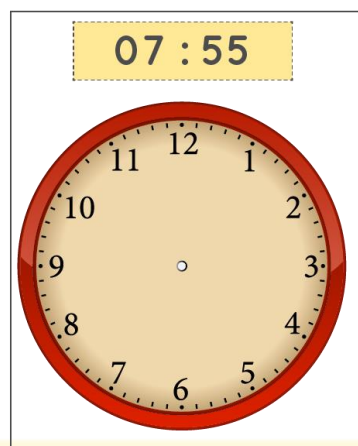
1. Write the time shown in the clocks below.



2. Write the times shown in the clocks below.



3. Draw the hour hand and minute hand to show the times mentioned in the picture.



4. What time does the clock represent?

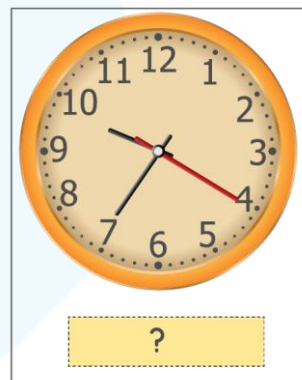
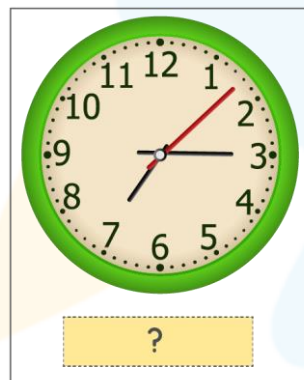


5. Select the correct option.



a) The hour that comes after 5:00 is 6:00 - Yes / No

b) The hour that comes just before 12 o' clock is 11 o' clock. -  
Yes / No

6. Write the time as shown in the clock.



7. Write the times as shown in the figure below.



8. Tick the correct option.

12:30 lies between

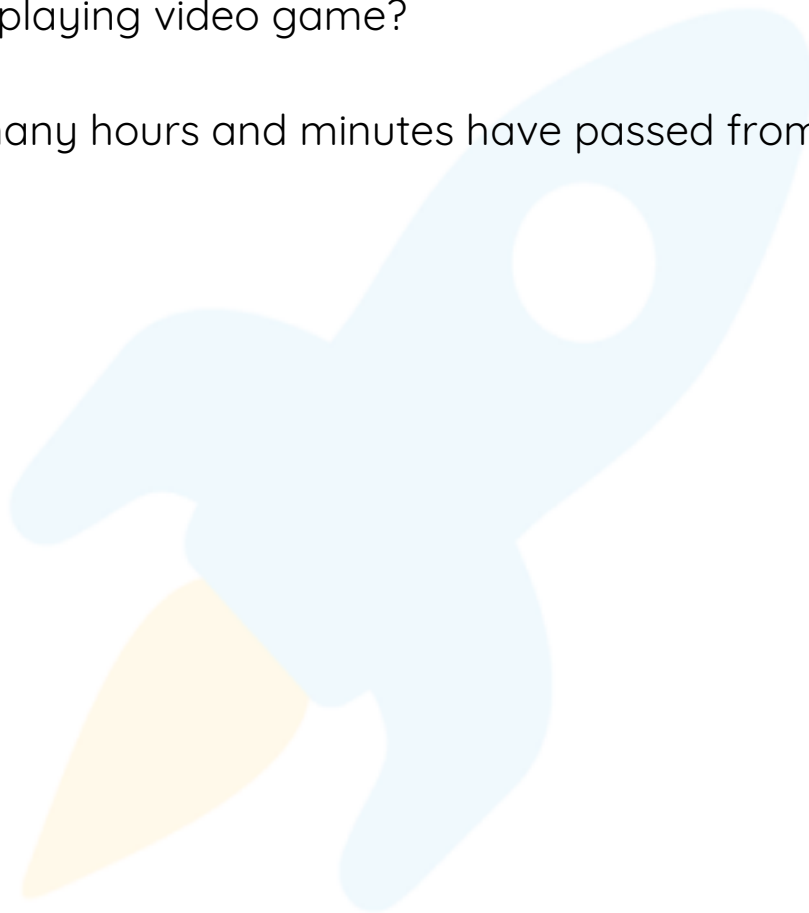
a) 12:00 and 1:00

b) 1:30 and 2:30

c) 10:30 and 11:30

9. Maria decided to play video game. She started off at 5 00 in the evening and finished at 6:15. How much time did she spend playing video game?

10. How many hours and minutes have passed from 12 15 to 3:20?





When you learn math  
in an interesting way,  
you never forget.



**25 Million**

Math classes &  
counting

**100K+**

Students learning  
Math the right way

**20+ Countries**

Present across USA, UK,  
Singapore, India, UAE & more.

## Why choose Cuemath?

"Cuemath is a valuable addition to our family. We love solving puzzle cards. My daughter is now visualizing maths and solving problems effectively!"

- Gary Schwartz

"Cuemath is great because my son has a one-on-one interaction with the teacher. The instructor has developed his confidence and I can see progress in his work. One-on-one interaction is perfect and a great bonus."

- Kirk Riley

"I appreciate the effort that miss Nitya puts in to help my daughter understand the best methods and to explain why she got a problem incorrect. She is extremely patient and generous with Miranda."



- Barbara Cabrera

Get the Cuemath advantage

**Book a FREE trial class**



## ANSWERS

1)	2 o' clock 10 o' clock
2)	9:00 3:00
3)	<div> <div>07 : 55</div>  </div> <div> <div>11 : 05</div>  </div>
4)	6 o' clock
5)	Yes Yes
6)	7:15 9:35

7)	11:50 7:20
8)	a) 12:00 and 1:00
9)	Maria spent 1 hour and 15 minutes.
10)	3 hours and 5 minutes.

**FUN FACT**

- a) A clock or watch that contains moving hands and hours with markings from 1 to 12 to show the time.
- b) A day has 24 hours. The 12-hour clock identifies all 24 hours of the day.
- c) One hour is equal to 60 minutes.

