

Get better at Math.
Get better at
everything.



Come experience the Cuemath methodology and ensure your child stays ahead at math this summer.



**Adaptive
Platform**



**Interactive Visual
Simulations**



**Personalized
Attention**

For Grades 1 - 10



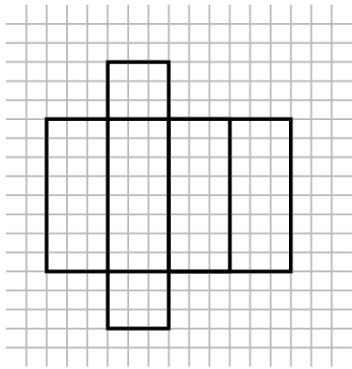
LIVE online classes
by trained and
certified experts.

Get the Cuemath advantage

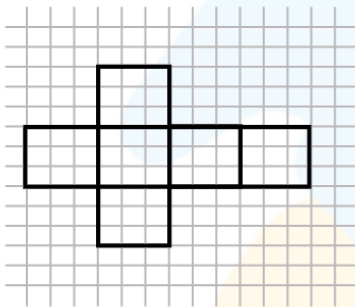
Book a FREE trial class

SURFACE AREA USING NETS, WORKSHEET I

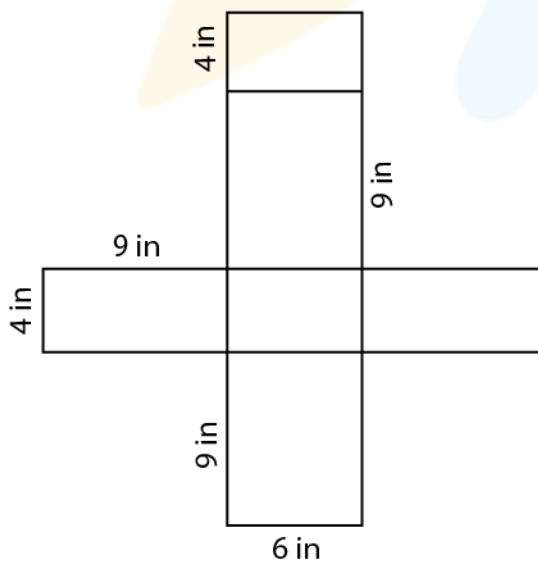
- 1) Find the area of the given rectangular prism, if the area of 1 square is 1 sq. m.



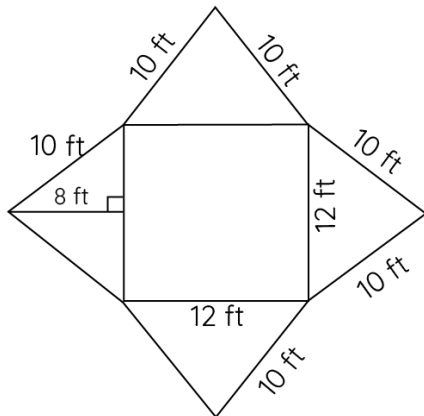
- 2) Find the area of the given cube, if the unit box has an area of 1 sq. ft.



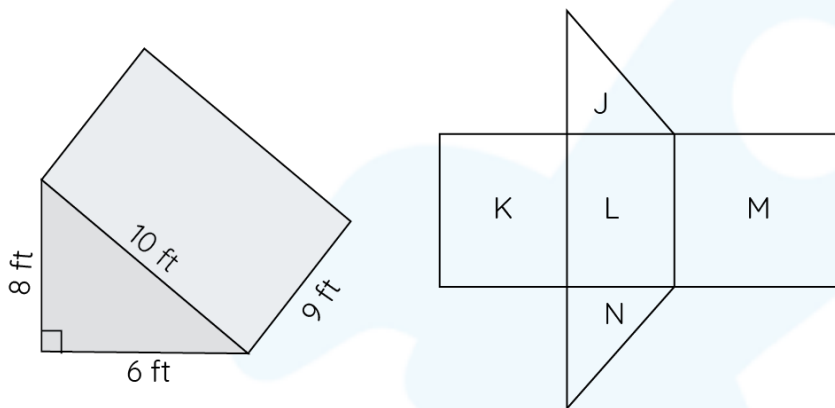
- 3) Find the area of the given cuboid:



4) Find the surface area of the given square pyramid:



Using the net given below, answer the following questions (5-8):



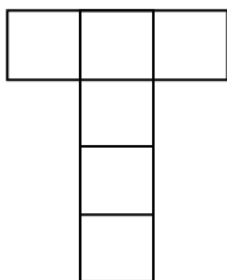
5) What is the area of the section J?

6) What is the area of section K?

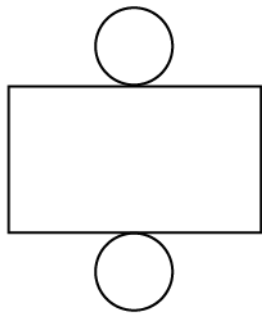
7) What is the sum of the area of section K, L, and M?

8) What is the surface area of the given shape?

9) Find the total area of the cube if length of each side is 4 in.



10) Find the total surface area of the given object if radius of the circle is 7 ft. and height of the object is 14 ft.



When you learn math
in an interesting way,
you never forget.



25 Million

Math classes &
counting

100K+

Students learning
Math the right way

20+ Countries

Present across USA, UK,
Singapore, India, UAE & more.

Why choose Cuemath?

"Cuemath is a valuable addition to our family. We love solving puzzle cards. My daughter is now visualizing maths and solving problems effectively!"

- Gary Schwartz

"Cuemath is great because my son has a one-on-one interaction with the teacher. The instructor has developed his confidence and I can see progress in his work. One-on-one interaction is perfect and a great bonus."


- Kirk Riley

"I appreciate the effort that miss Nitya puts in to help my daughter understand the best methods and to explain why she got a problem incorrect. She is extremely patient and generous with Miranda."

- Barbara Cabrera

Get the Cuemath advantage

Book a FREE trial class

**ANSWERS**

1)	102 sq. m
2)	54 sq. ft.
3)	204 sq. in.
4)	336 sq. ft.
5)	24 sq. ft.
6)	72 sq. ft.
7)	216 sq. ft.
8)	264 sq. ft.
9)	96 sq. in.
10)	406 sq. ft