

Get better at Math.  
Get better at  
everything.



Come experience the Cuemath methodology and ensure your child stays ahead at math this summer.



**Adaptive  
Platform**



**Interactive Visual  
Simulations**



**Personalized  
Attention**

For Grades 1 - 10



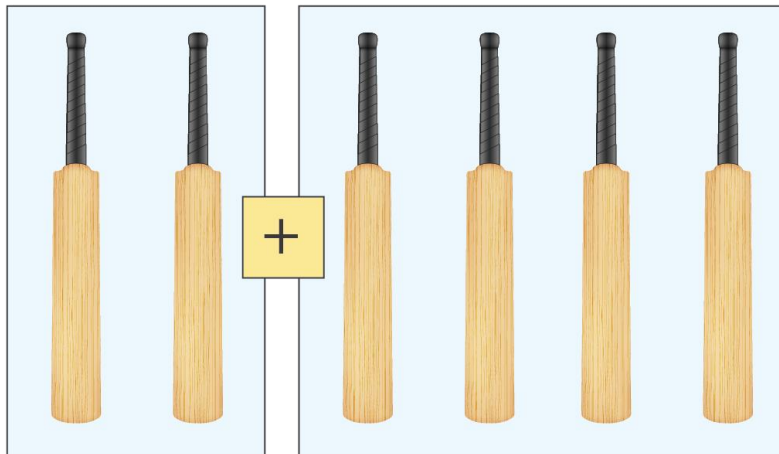
LIVE online classes  
by trained and  
certified experts.

Get the Cuemath advantage

**Book a FREE trial class**

## Single Digit Addition and Subtraction Worksheets

1) Solve the addition.



$$2 + 4 = \underline{\quad\quad}$$

2) Fill in the boxes to make 9. The first one is done for you.

2	+	7
3	+	
5	+	
7	+	

3) Add the numbers between 1 and 10.

a) 6

+ 2

-----

-----

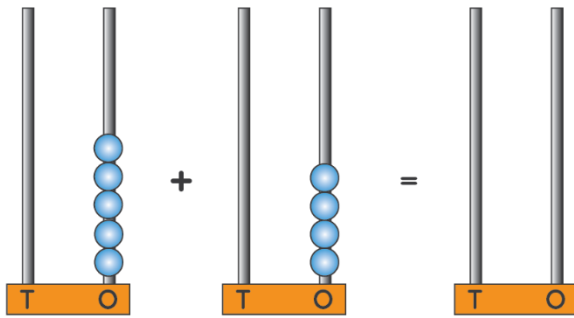
b) 5

+ 4

-----


-----

4) Draw beads in the third abacus and show the sum of the numbers.



5) Richard blew 5 balloons and his sister blew 3 balloons.  
How many balloons did they blow together?

6) Write the subtraction fact for the following picture.



7) Cross out and subtract **5 - 2**.



8) Subtract the following.

a)  $8$

$- 6$

-----

-----

b)  $10$

$- 4$

-----

-----

9) Subtract **8 - 4** using the number line.



10) There are 6 birds in a cage. 2 birds flew away. How many birds are there in the cage now?

When you learn math  
in an interesting way,  
you never forget.



**25 Million**

Math classes &  
counting

**100K+**

Students learning  
Math the right way

**20+ Countries**

Present across USA, UK,  
Singapore, India, UAE & more.

## Why choose Cuemath?

"Cuemath is a valuable addition to our family. We love solving puzzle cards. My daughter is now visualizing maths and solving problems effectively!"

- Gary Schwartz

"Cuemath is great because my son has a one-on-one interaction with the teacher. The instructor has developed his confidence and I can see progress in his work. One-on-one interaction is perfect and a great bonus."

- Kirk Riley

"I appreciate the effort that miss Nitya puts in to help my daughter understand the best methods and to explain why she got a problem incorrect. She is extremely patient and generous with Miranda."

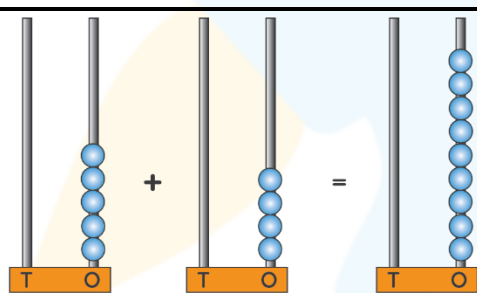
- Barbara Cabrera


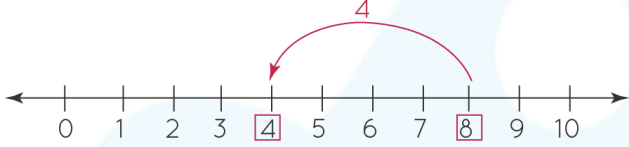
Get the Cuemath advantage

**Book a FREE trial class**



## ANSWERS

1)	$2 + 4 = 6$
2)	6 4 2
3)	a) 8 b) 9
4)	 <p><math>5 + 4 = 9</math></p>
5)	8 balloons
6)	$9 - 5 = 4$

7)	 $5 - 2 = 3$
8)	a) 2 b) 6
9)	 $8 - 4 = 4$
10)	4 birds

## FUN FACT

1. Addition is the process of joining two or more objects or adding two or more numbers.
2. The numbers that are added in an addition is called an '**addend**'.
3. Subtraction is the process of taking away some objects from a group.

