

Get better at Math.
Get better at
everything.



Come experience the Cuemath methodology and ensure your child stays ahead at math this summer.



**Adaptive
Platform**



**Interactive Visual
Simulations**



**Personalized
Attention**

For Grades 1 - 10




LIVE online classes
by trained and
certified experts.

Get the Cuemath advantage

Book a FREE trial class

PIE GRAPH WORKSHEET I

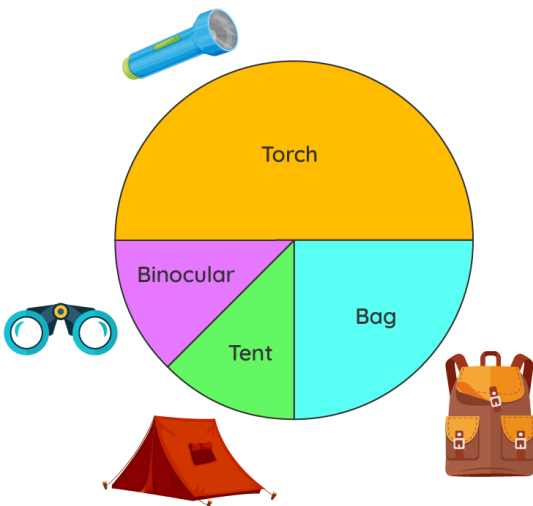
Tisha noted the sales in a restaurant on a single day in the following pie graph.



Answer the following questions based on the information given below:

- 1) Which was the most sold item that day?
- 2) How many customers bought pizza that day?
- 3) Find out the item which was sold the least that day.
- 4) How many total customers ordered that day?
- 5) How many customers ordered burgers that day?

A camping store made a pie graph on sales in the month of March.



Use the graph to answer the following questions:


6) Which of the item sold the maximum number of times?

7) Find the percentage of the tent sold that month.

8) Which of the item was sold 25% more than bags?

9) What is the percentage of binocular sold?

10) Did the store sell tents less than binoculars?



**When you learn math
in an interesting way,
you never forget.**



25 Million

Math classes &
counting

100K+

Students learning
Math the right way

20+ Countries

Present across USA, UK,
Singapore, India, UAE & more.

Why choose Cuemath?

"Cuemath is a valuable addition to our family. We love solving puzzle cards. My daughter is now visualizing maths and solving problems effectively!"

- Gary Schwartz

"Cuemath is great because my son has a one-on-one interaction with the teacher. The instructor has developed his confidence and I can see progress in his work. One-on-one interaction is perfect and a great bonus."


- Kirk Riley

"I appreciate the effort that miss Nitya puts in to help my daughter understand the best methods and to explain why she got a problem incorrect. She is extremely patient and generous with Miranda."

- Barbara Cabrera

Get the Cuemath advantage

Book a FREE trial class

**ANSWERS**

1)	Hotdog
2)	13
3)	Sandwich
4)	95
5)	25
6)	Torch
7)	25 %
8)	Torch
9)	25 %
10)	No

FUN FACT

1. The idea of this system was developed in 1637 in two works by Descartes.
2. The name **Cartesian** comes from the French mathematician and philosopher René Descartes , who worked to merge [algebra](#) and Euclidean geometry.
3. **Cartesian coordinate system** is a coordinate system used to place points on a [cartesian plane](#) using two numbers, usually called the *x-coordinate* and the *y-coordinate*.

