

Get better at Math.
Get better at
everything.



Come experience the Cuemath methodology and ensure your child stays ahead at math this summer.



**Adaptive
Platform**



**Interactive Visual
Simulations**



**Personalized
Attention**

For Grades 1 - 10



LIVE online classes
by trained and
certified experts.




Get the Cuemath advantage

Book a FREE trial class

PICTOGRAPH WORKSHEET IV

The following image shows the number of fishes caught by 5 friends who went on a fishing trip.






Number of Fish Caught

Ray	
Yasmin	
Paul	
Cathy	
Joey	

Answer the following questions based on the information given on the image shown above.

- 1) Who caught the maximum number of fishes?
- 2) Who got the least number of fishes?
- 3) How many fishes did Cathy get?
- 4) 5 fishes were caught by whom?
- 5) Find the number of fishes caught by Yasmin more than Ray.

The following image shows the number of trees planted on various week by Venessa.

Week	Number of Trees
Week 1	
Week 2	
Week 3	
Week 4	
Week 5	

Answer the following questions based on the information given in the image shown above.

- 6) On which week, 4 trees were planted?
- 7) On which week, 5 trees were planted?
- 8) How many trees were planted on week 5?
- 9) Find out the total number of trees planted in week 3 and week 5 combined.
- 10) On which day number of trees planted were 2 more than number of trees planted on week 1?

**When you learn math
in an interesting way,
you never forget.**



25 Million

Math classes &
counting

100K+

Students learning
Math the right way

20+ Countries

Present across USA, UK,
Singapore, India, UAE & more.

Why choose Cuemath?

"Cuemath is a valuable addition to our family. We love solving puzzle cards. My daughter is now visualizing maths and solving problems effectively!"

- Gary Schwartz

"Cuemath is great because my son has a one-on-one interaction with the teacher. The instructor has developed his confidence and I can see progress in his work. One-on-one interaction is perfect and a great bonus."


- Kirk Riley

"I appreciate the effort that miss Nitya puts in to help my daughter understand the best methods and to explain why she got a problem incorrect. She is extremely patient and generous with Miranda."

- Barbara Cabrera

Get the Cuemath advantage

Book a FREE trial class

**ANSWERS**

1)	Cathy
2)	Ray and Joey
3)	7
4)	Paul
5)	3
6)	Week 1
7)	Week 4
8)	6
9)	13
10)	Week 5

FUN FACT

1. The name **Cartesian** comes from the French mathematician and philosopher René Descartes , who worked to merge [algebra](#) and Euclidean geometry.
2. The idea of this system was developed in 1637 in two works by Descartes.
3. **Cartesian coordinate system** is a coordinate system used to place points on a [cartesian plane](#) using two numbers, usually called the *x-coordinate* and the *y-coordinate*.

