

Get better at Math.
Get better at
everything.



Come experience the Cuemath methodology and ensure your child stays ahead at math this summer.



**Adaptive
Platform**



**Interactive Visual
Simulations**



**Personalized
Attention**

For Grades 1 - 10



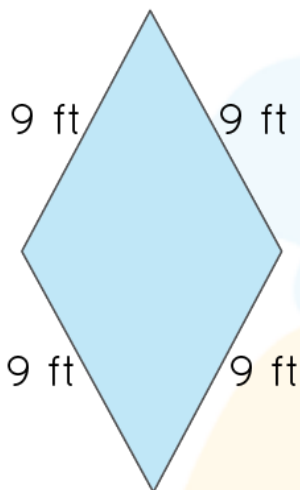
LIVE online classes
by trained and
certified experts.

Get the Cuemath advantage


Book a FREE trial class

Perimeter Worksheets 5th Grade

- 1) A rectangle having equal adjacent sides is also known as a _____
- 2) The fencing of a square garden is 68 inches. What is the length of one side of the garden?
- 3) The two sides of a triangle are 30 cm and 16 cm. The perimeter of the triangle is 80 cm. Determine its third side.
- 4) What is the perimeter of the figure shown below?



- 5) Find the cost of fencing a square field of length 50 m, if each meter of wire costs \$15.

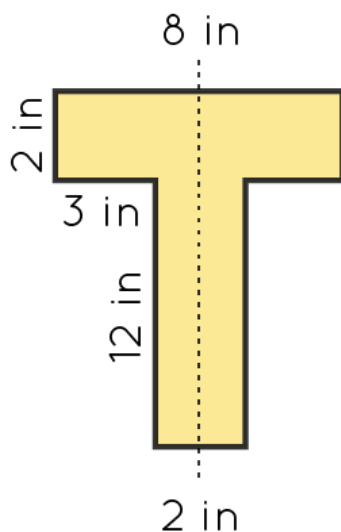


6) Match the following:

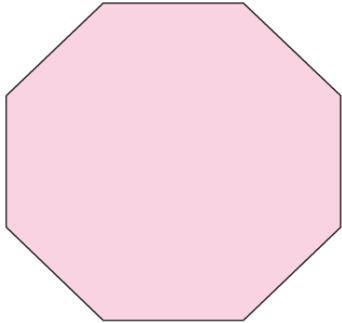
Shapes	Perimeter
a) Square with side length 7 m	i) 35m
b) Rectangle with length 8 m and breadth 4 m	ii) 28m
c) Triangle with side lengths 10m, 17m and 8m	iii) 24m
d) Regular pentagon with side 4.5m	iv) 22.5m

7) The perimeter of the given figure below is _____

Note: The dotted line shows that the figure is symmetric

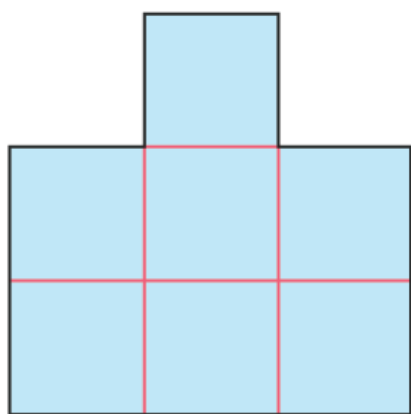


- 8) The perimeter of an octagon is 192cm. Each side of the octagon is the same length. What is the length of one side of the octagon?



- 9) Rocky digs a trench along the boundary of a square field of perimeter 300 m. If he charges \$5 for digging every meter of the trench's length, how much does he earn by digging the trench?

- 10) Calculate the perimeter of the given figure below if each square has a length of 5 units.



**When you learn math
in an interesting way,
you never forget.**



25 Million

Math classes &
counting

100K+

Students learning
Math the right way

20+ Countries

Present across USA, UK,
Singapore, India, UAE & more.

Why choose Cuemath?

"Cuemath is a valuable addition to our family. We love solving puzzle cards. My daughter is now visualizing maths and solving problems effectively!"

- Gary Schwartz

"Cuemath is great because my son has a one-on-one interaction with the teacher. The instructor has developed his confidence and I can see progress in his work. One-on-one interaction is perfect and a great bonus."


- Kirk Riley

"I appreciate the effort that miss Nitya puts in to help my daughter understand the best methods and to explain why she got a problem incorrect. She is extremely patient and generous with Miranda."

- Barbara Cabrera

Get the Cuemath advantage

Book a FREE trial class

**ANSWERS**

1. Square	6. a: ii), b: iii), c: i), d: iv)
2. 17 inches	7. 44 inches
3. 34 cm	8. 24cm
4. 36ft	9. \$1500
5. \$3000	10. 60 units

FUN FACT

1. We call the perimeter of a circle circumference.
2. We can find the perimeter of all geometrical shapes.
3. If you know the perimeter of a regular polygon, then we can find the length of each side.

