

Get better at Math.
Get better at
everything.



Come experience the Cuemath methodology and ensure your child stays ahead at math this summer.



**Adaptive
Platform**



**Interactive Visual
Simulations**



**Personalized
Attention**

For Grades 1 - 10



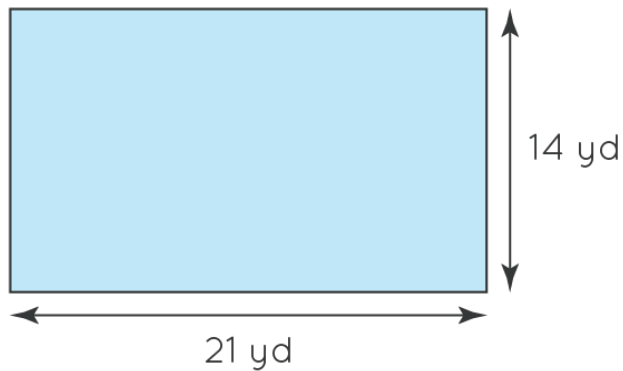
LIVE online classes
by trained and
certified experts.

Get the Cuemath advantage

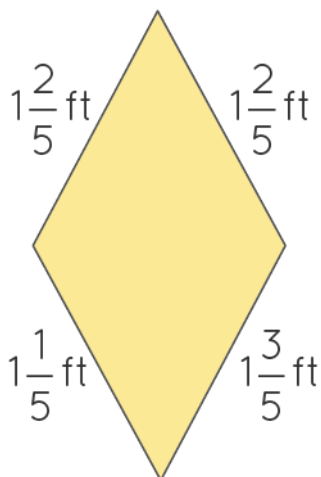
Book a FREE trial class

Perimeter Worksheets 5th Grade

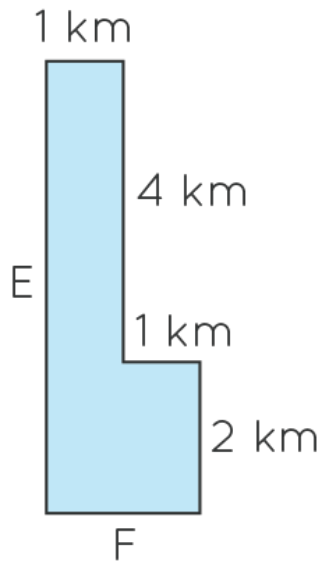
- 1) What is the perimeter of a square and rectangle given by?
- 2) Find the perimeter of the rectangle having dimensions 15m and 7m.
- 3) Find the perimeter of the given figure below.



- 4) The perimeter of a rectangle is the same as the perimeter of a square. If the side length of the square is 20 m and the length of the rectangle is 25 m, find the breadth of the rectangle.
- 5) The perimeter of the given polygon is _____



6) Look into the figure below and answer the following:

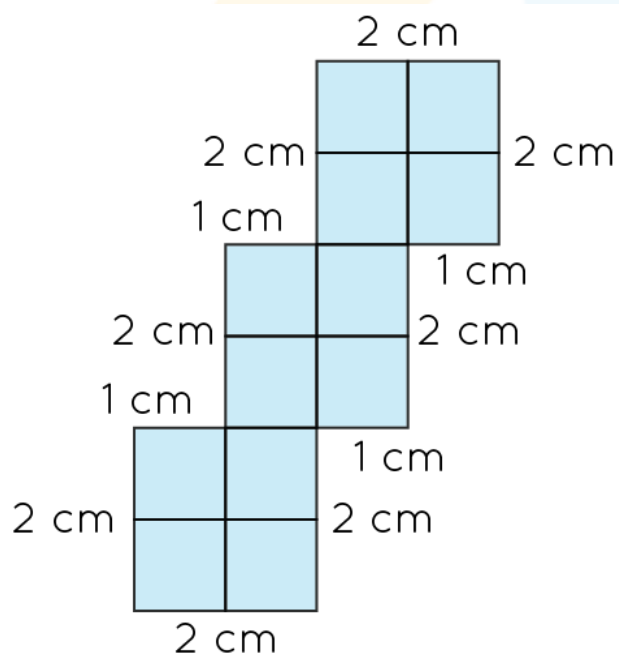


The value of E = _____

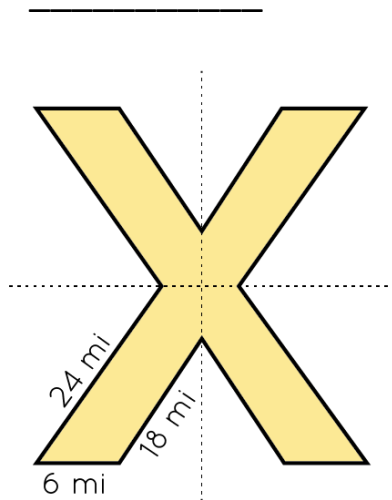
The value of F = _____

Total Perimeter = _____

7) Find the perimeter of the given figure below.



8) The perimeter of the symmetric figure shown below is



9) Jerry wants to run a string of lights along the edges of a wall. The height of the wall is 10m and the width is 8 m. If each meter of the string of lights costs \$45, how much must he pay for it?

10) Find the side length of a square having a perimeter of 760ft.

**When you learn math
in an interesting way,
you never forget.**



25 Million

Math classes &
counting

100K+

Students learning
Math the right way

20+ Countries

Present across USA, UK,
Singapore, India, UAE & more.

Why choose Cuemath?

"Cuemath is a valuable addition to our family. We love solving puzzle cards. My daughter is now visualizing maths and solving problems effectively!"

- Gary Schwartz

"Cuemath is great because my son has a one-on-one interaction with the teacher. The instructor has developed his confidence and I can see progress in his work. One-on-one interaction is perfect and a great bonus."


- Kirk Riley

"I appreciate the effort that miss Nitya puts in to help my daughter understand the best methods and to explain why she got a problem incorrect. She is extremely patient and generous with Miranda."

- Barbara Cabrera

Get the Cuemath advantage

Book a FREE trial class

**ANSWERS**

1. Square: $4 \times \text{Side}$ Rectangle: $2(\text{length} + \text{breadth})$	6. E: 6km, F: 2km, Perimeter: 16km
2. 44m	7. 20cm
3. 70 yd	8. 192 mi
4. 15m	9. \$1620
5. 535ft	10. 190ft

FUN FACT

1. Every geometrical shape has a perimeter.
2. The perimeter of a circle is called circumference.
3. We can find the perimeter of a regular polygon by finding the product of side length and number of sides.

