

Get better at Math.
Get better at
everything.



Come experience the Cuemath methodology and ensure your child stays ahead at math this summer.



**Adaptive
Platform**



**Interactive Visual
Simulations**



**Personalized
Attention**

For Grades 1 - 10



LIVE online classes
by trained and
certified experts.

Get the Cuemath advantage

Book a FREE trial class

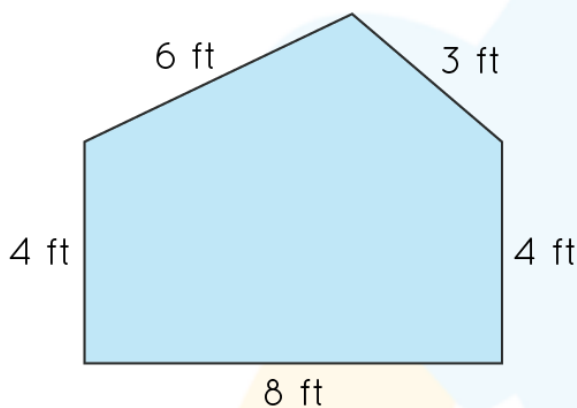
Perimeter Worksheets 5th Grade

1) Perimeter of a rectangle with length 'l' and width 'b' is given by _____

2) If the perimeter of a regular hexagon is 78 units, then how long would each side be?

3) Find the perimeter of a triangle with sides measuring 22m, 24m and 11m.

4) The perimeter of the given figure is:



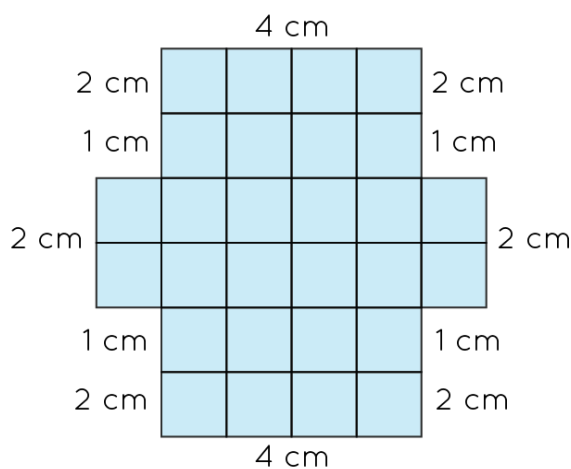
5) An athlete takes 5 rounds of a square park 30 feet long. The total distance covered by him is _____ ft.



6) Find the cost of fencing a rectangular park of length 70 units and breadth 46.5 units at the rate of \$5 per unit.

7) What is the side length of a square whose perimeter is 600 ft?

8) The perimeter of the given figure is _____



9) The perimeters of the given figures are equal. Calculate the side of the first figure.

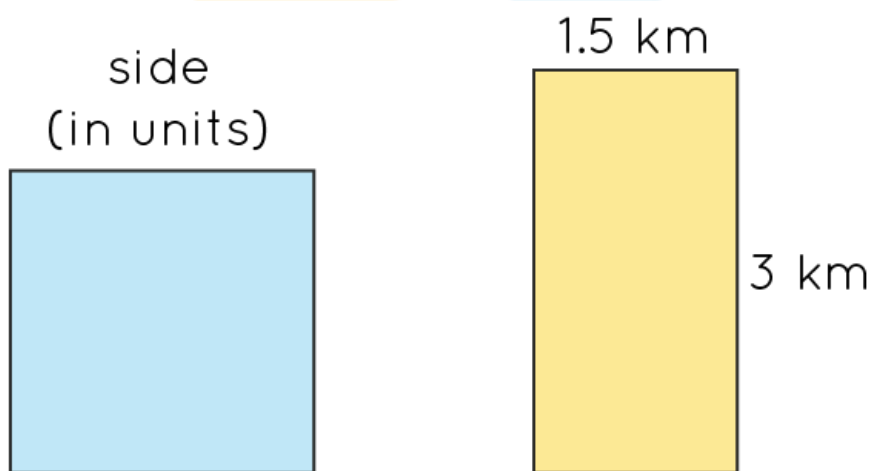


Figure 1

Figure 2

- 10) Michael has a rectangular wooden raft. He wants to put a rubber strip around the edge of the raft to make it safer. The length of the raft is 12 feet. The width is twice the length. How many feet of rubber strip does Michael need?



**When you learn math
in an interesting way,
you never forget.**



25 Million

Math classes &
counting

100K+

Students learning
Math the right way

20+ Countries

Present across USA, UK,
Singapore, India, UAE & more.

Why choose Cuemath?

"Cuemath is a valuable addition to our family. We love solving puzzle cards. My daughter is now visualizing maths and solving problems effectively!"

- Gary Schwartz

"Cuemath is great because my son has a one-on-one interaction with the teacher. The instructor has developed his confidence and I can see progress in his work. One-on-one interaction is perfect and a great bonus."


- Kirk Riley

"I appreciate the effort that miss Nitya puts in to help my daughter understand the best methods and to explain why she got a problem incorrect. She is extremely patient and generous with Miranda."

- Barbara Cabrera

Get the Cuemath advantage

Book a FREE trial class

**ANSWERS**

1. $2(l + b)$	6. \$1165
2. 13 units	7. 150 ft
3. 57m	8. 24cm
4. 25 ft	9. 2.25 km
5. 600ft	10. 72ft

FUN FACT

1. We can find the perimeter of a regular polygon by multiplying side length and number of sides.
2. The perimeter of a circle is called a circumference.
3. We can find the perimeter of any geometric figure.

