

Get better at Math.
Get better at
everything.



Come experience the Cuemath methodology and ensure your child stays ahead at math this summer.



**Adaptive
Platform**



**Interactive Visual
Simulations**



**Personalized
Attention**

For Grades 1 - 10



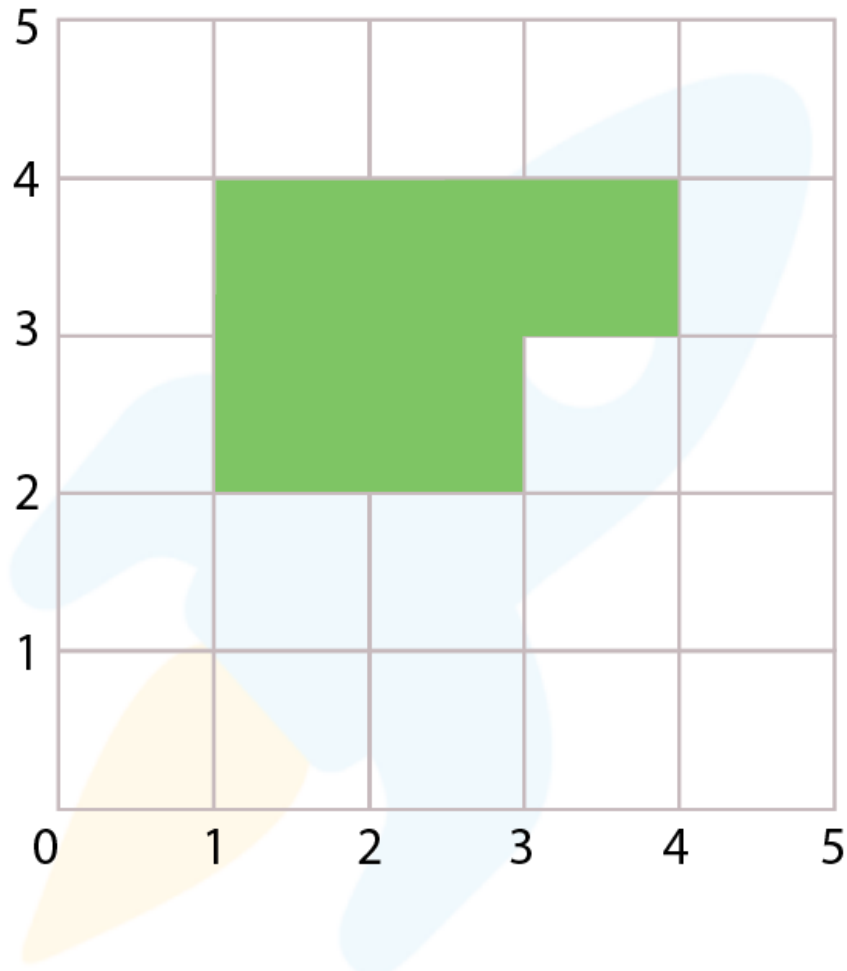
LIVE online classes
by trained and
certified experts.

Get the Cuemath advantage

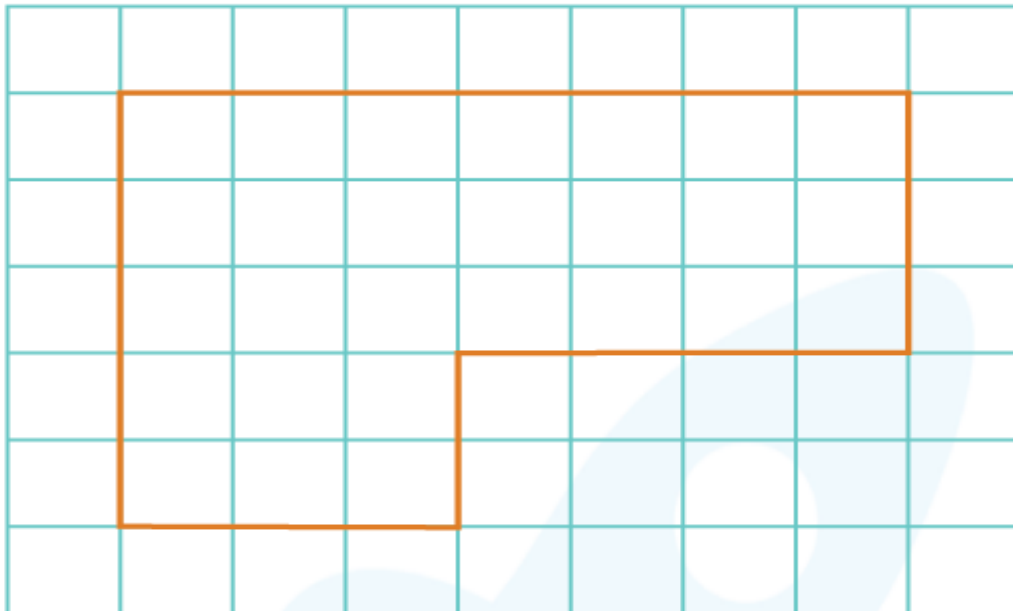
Book a FREE trial class

Perimeter 3rd grade worksheets

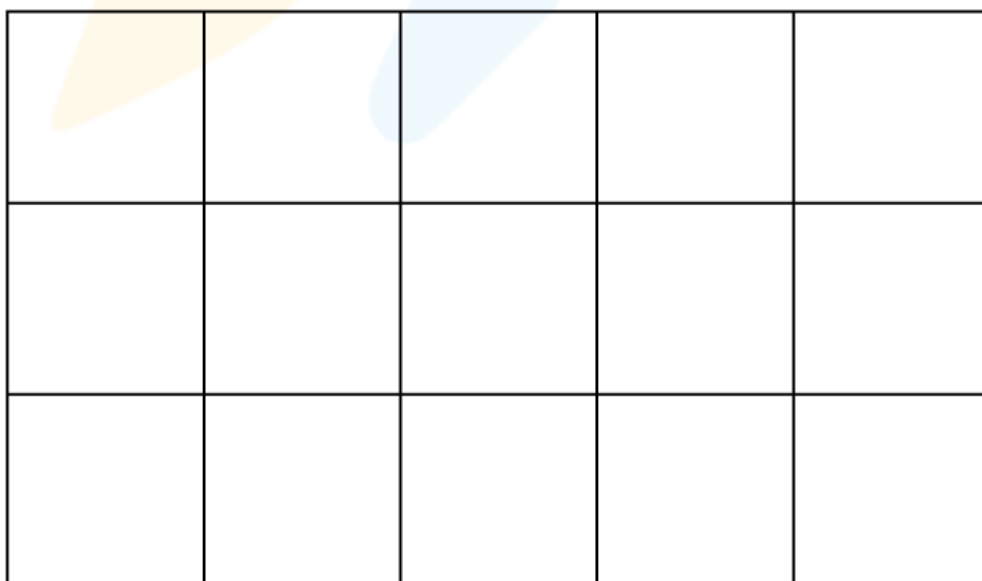
- 1) Find the perimeter of the shape if each side of the square measures 3 inches.



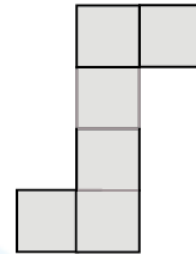
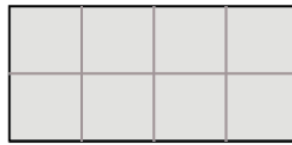
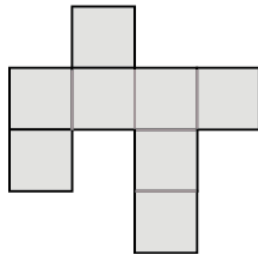
- 2) Find the perimeter of the shape if each square is 1 unit long.



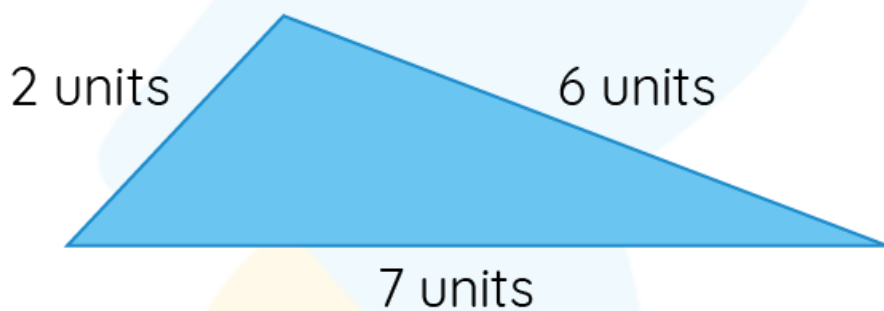
- 3) Find the perimeter of the rectangle below if each side of each square is 5 units.



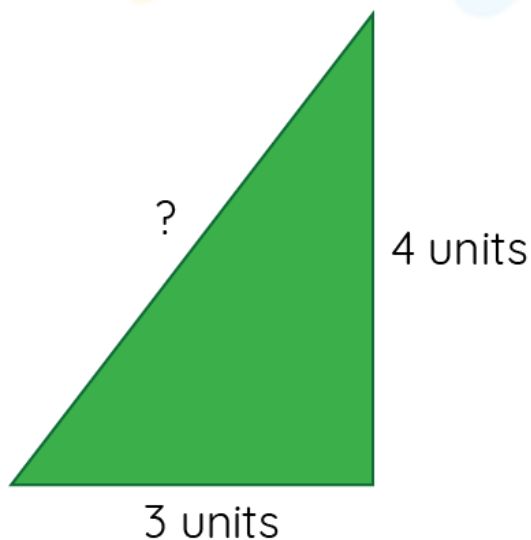
4) Find the perimeter of each shape if each side measures 2 units.



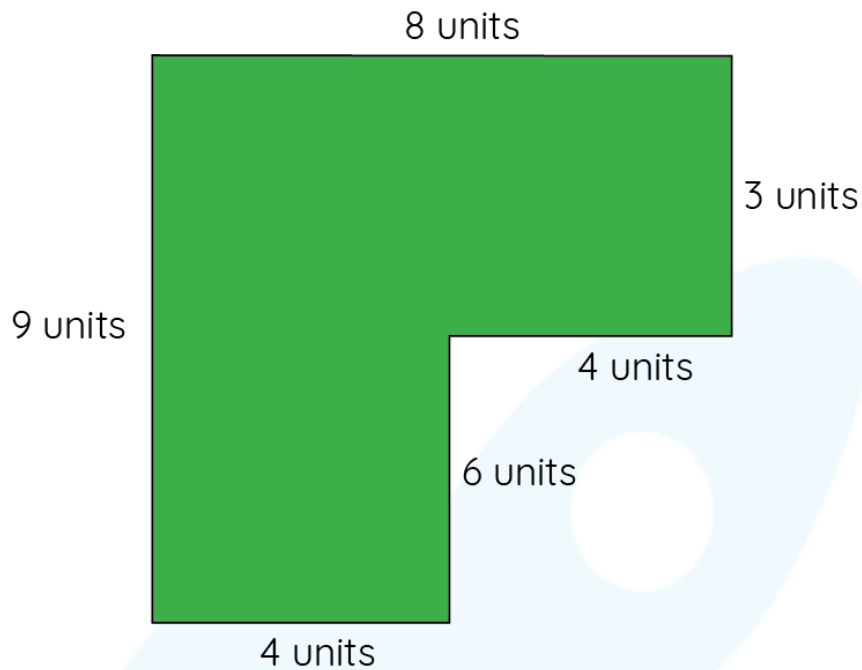
5) Find the perimeter of the triangle.



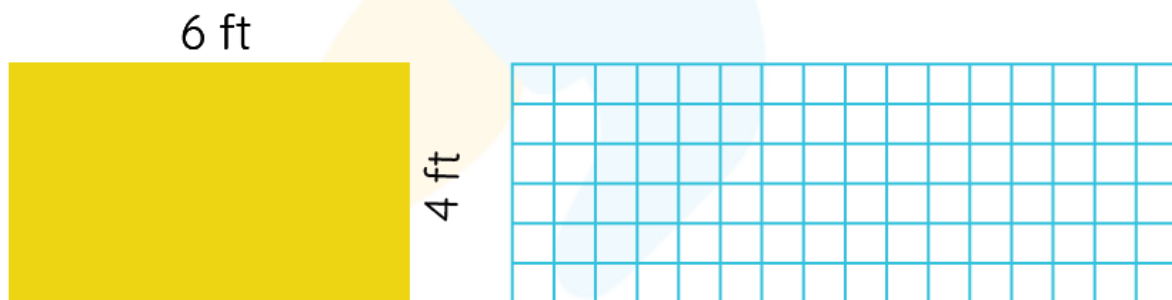
6) Find the third side if the perimeter of the triangle is 12 units.



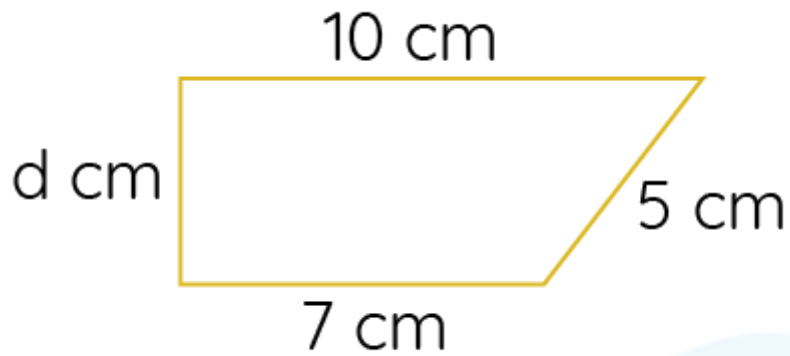
7) Find the perimeter of the compound shape.



8) Draw another rectangle besides the given rectangle of the same perimeter.



- 9) Find the value of d if the perimeter of the quadrilateral is 25 units.



- 10) A rectangular park is 15 yards long and 8 yards wide. What would be the distance Michael has to jog around the park twice?

When you learn math
in an interesting way,
you never forget.



25 Million

Math classes &
counting

100K+

Students learning
Math the right way

20+ Countries

Present across USA, UK,
Singapore, India, UAE & more.

Why choose Cuemath?

"Cuemath is a valuable addition to our family. We love solving puzzle cards. My daughter is now visualizing maths and solving problems effectively!"

- Gary Schwartz

"Cuemath is great because my son has a one-on-one interaction with the teacher. The instructor has developed his confidence and I can see progress in his work. One-on-one interaction is perfect and a great bonus."


- Kirk Riley

"I appreciate the effort that miss Nitya puts in to help my daughter understand the best methods and to explain why she got a problem incorrect. She is extremely patient and generous with Miranda."


- Barbara Cabrera

Get the Cuemath advantage

Book a FREE trial class

**ANSWERS**

1)	30 inches
2)	24 units
3)	80 units
4)	a) 36 units b) 24 units c) 28 units
5)	15 units
6)	d = 5 units

7)	34 units
8)	<p>answers may vary.</p> 
9)	3 units
10)	92 yards

FUN FACT

1. The length of the closed curve is the perimeter.
2. It is the boundary of a plane figure.
3. It is also the distance around the 2d shape
4. The perimeter of the circle is known as the circumference.

