

Get better at Math.
Get better at
everything.



Come experience the Cuemath methodology and ensure your child stays ahead at math this summer.



**Adaptive
Platform**



**Interactive Visual
Simulations**



**Personalized
Attention**

For Grades 1 - 10



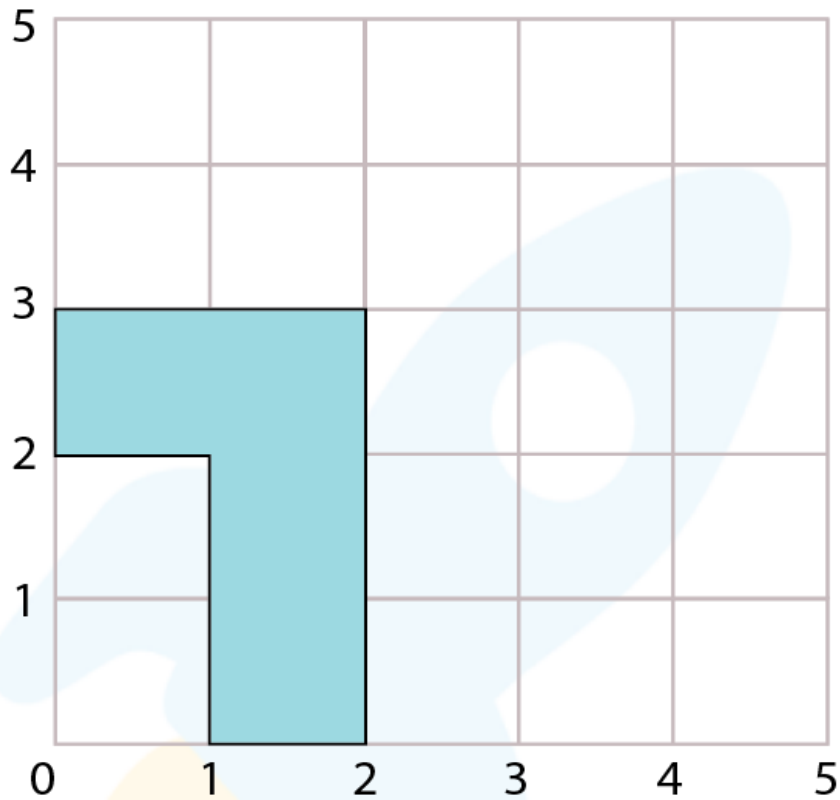
LIVE online classes
by trained and
certified experts.

Get the Cuemath advantage

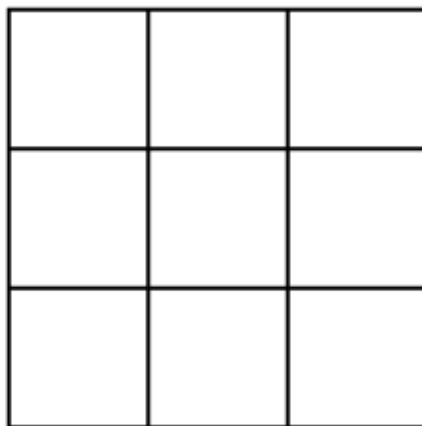
Book a FREE trial class

Perimeter 3rd grade worksheets

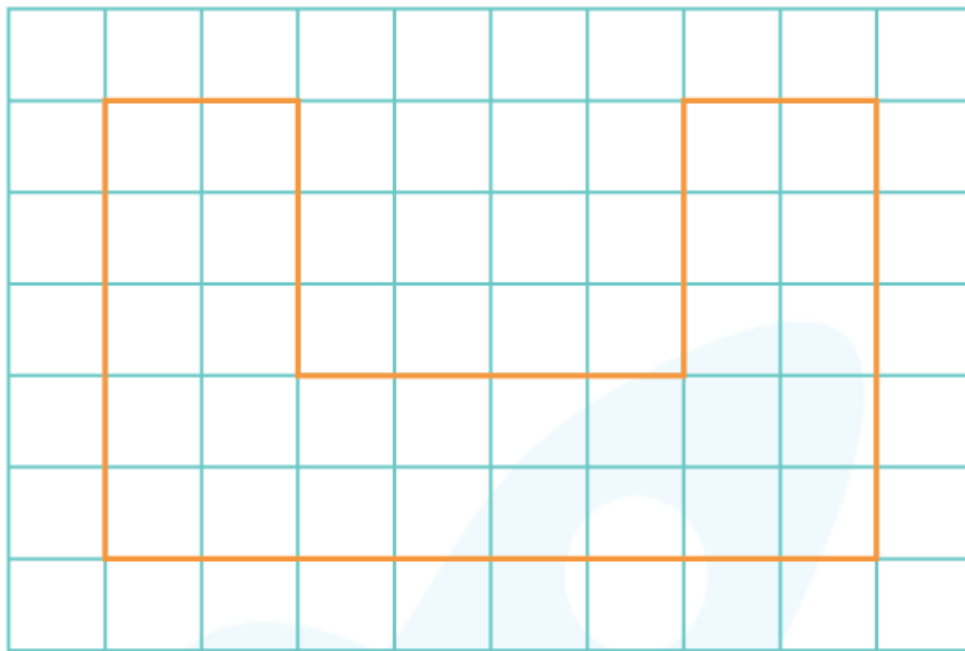
- 1) Find the perimeter of the shaded shape if each square is 5 units long.



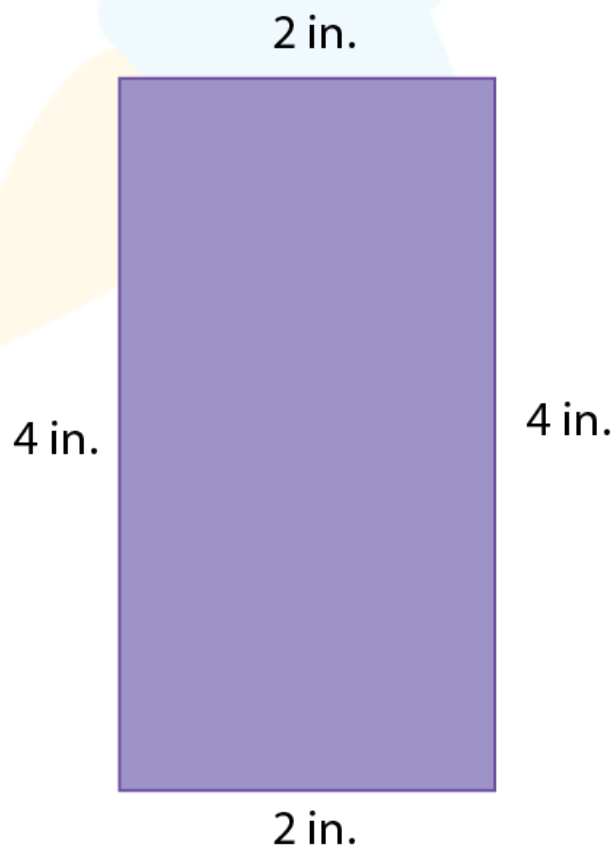
- 2) Find the perimeter of the shape if each block is 3 units long.




3) Find the perimeter of the following shape if each box is 1 inch long.



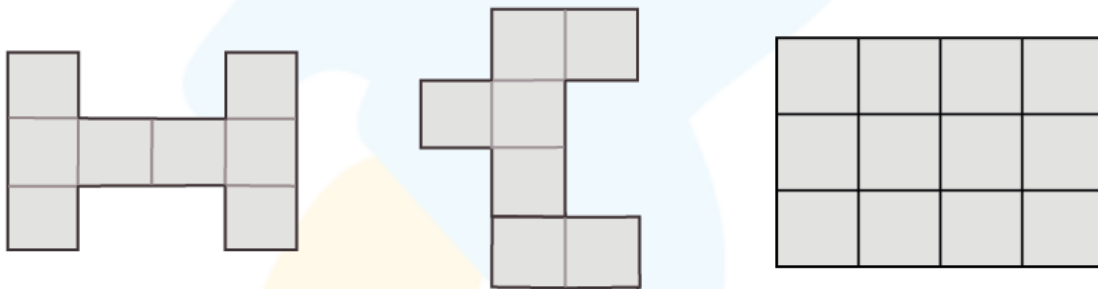
4) Find the perimeter of the rectangle.



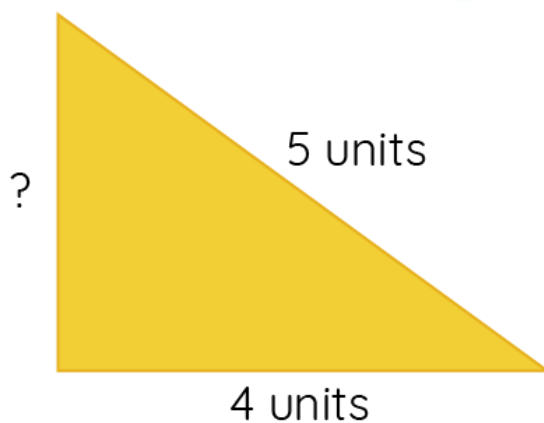
5) Find the perimeter of the compound shape.



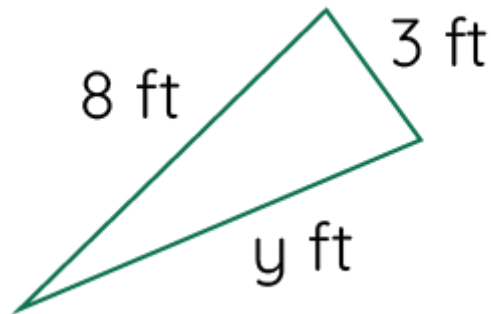
6) Find the perimeter of each shape if each box is 2 units long.



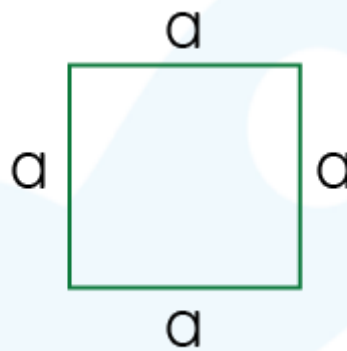
7) Find the third side of the triangle if the perimeter of the triangle is 12 units.



8) Find the value of y if the perimeter of the triangle is 18 feet.



9) Find the side ' a ' if the perimeter of the square is 36 units.



10) Steve's garden is 5 yards long and 3 yards wide. He decides to fence his garden. What would be the cost of fencing the garden at the rate of \$15?

When you learn math
in an interesting way,
you never forget.



25 Million

Math classes &
counting

100K+

Students learning
Math the right way

20+ Countries

Present across USA, UK,
Singapore, India, UAE & more.

Why choose Cuemath?

"Cuemath is a valuable addition to our family. We love solving puzzle cards. My daughter is now visualizing maths and solving problems effectively!"

- Gary Schwartz

"Cuemath is great because my son has a one-on-one interaction with the teacher. The instructor has developed his confidence and I can see progress in his work. One-on-one interaction is perfect and a great bonus."


- Kirk Riley

"I appreciate the effort that miss Nitya puts in to help my daughter understand the best methods and to explain why she got a problem incorrect. She is extremely patient and generous with Miranda."

- Barbara Cabrera

Get the Cuemath advantage

Book a FREE trial class

**ANSWERS**

1)	50 units
2)	36 units
3)	32 units
4)	12 inches
5)	32 units
6)	a) 72 inches b) 32 inches c) 32 inches

7)	3 units
8)	$y = 7$ feet
9)	9 inches
10)	\$240

FUN FACT

1. The length of the closed curve is the perimeter.
2. It is the boundary of a plane figure.
3. It is also the distance around the 2d shape
4. The perimeter of the circle is known as the circumference.

