

Get better at Math.
Get better at
everything.



Come experience the Cuemath methodology and ensure your child stays ahead at math this summer.



**Adaptive
Platform**



**Interactive Visual
Simulations**



**Personalized
Attention**

For Grades 1 - 10



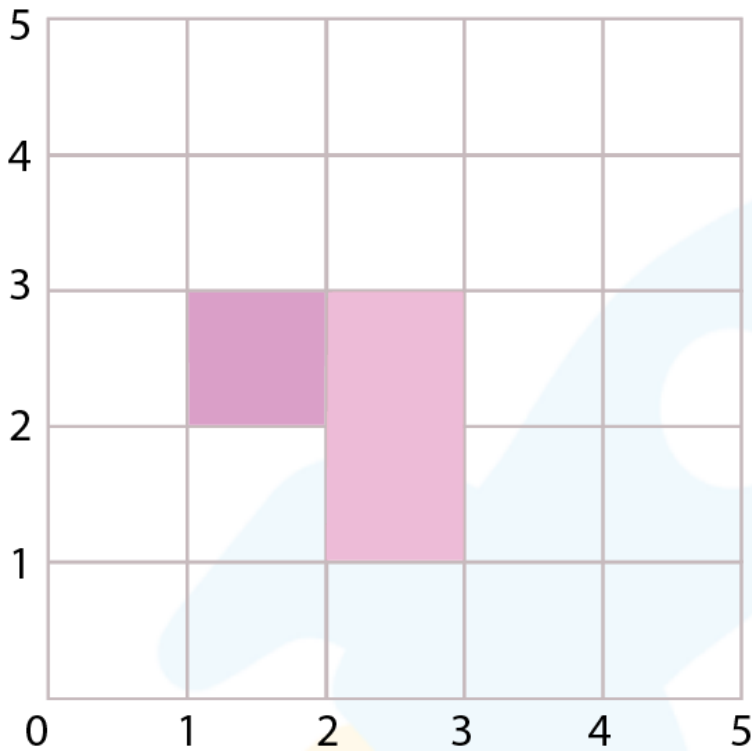
LIVE online classes
by trained and
certified experts.

Get the Cuemath advantage

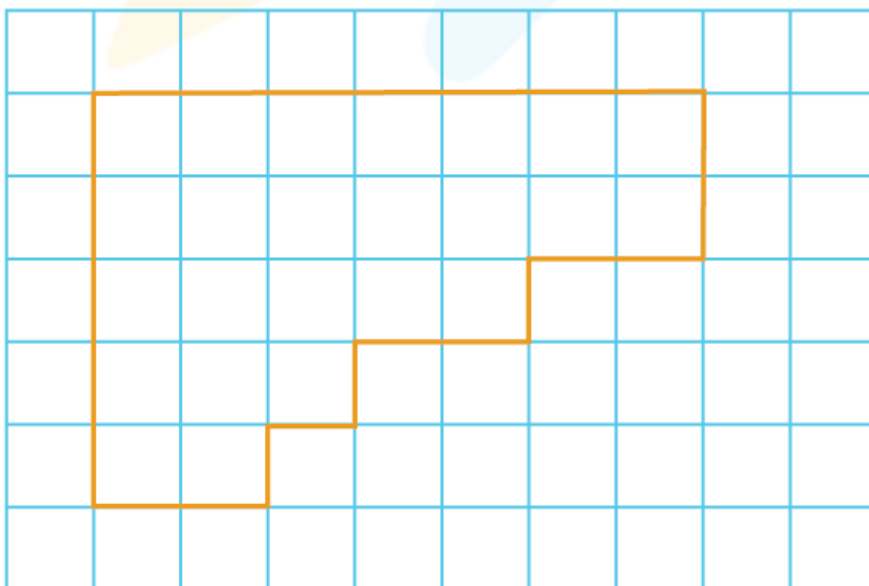
Book a FREE trial class

Perimeter 3rd grade worksheets

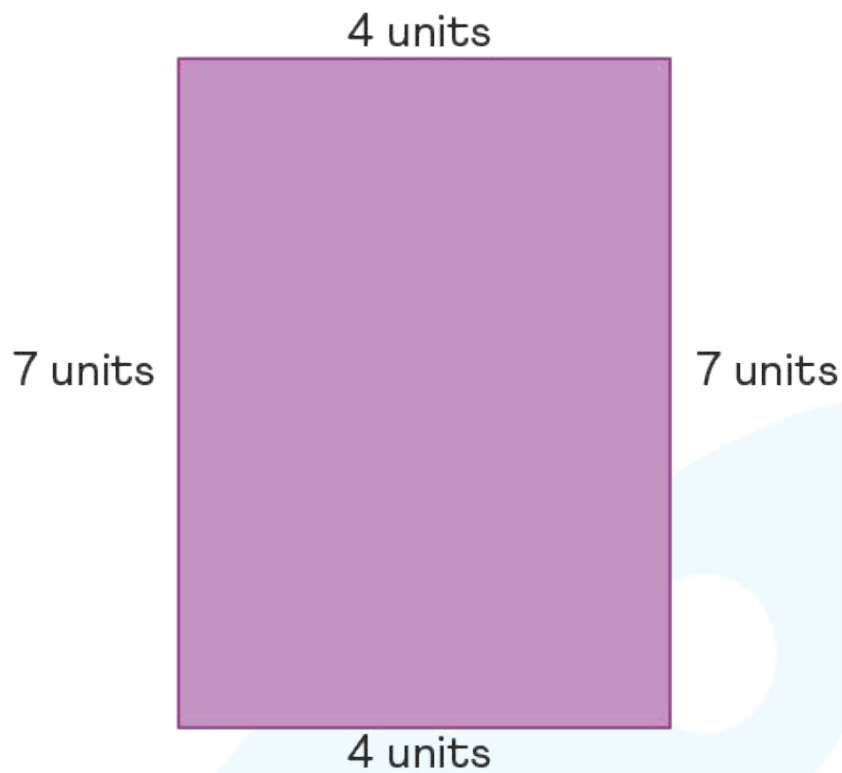
- 1) Find the perimeter of the colored shape if each box measures 1 inch.



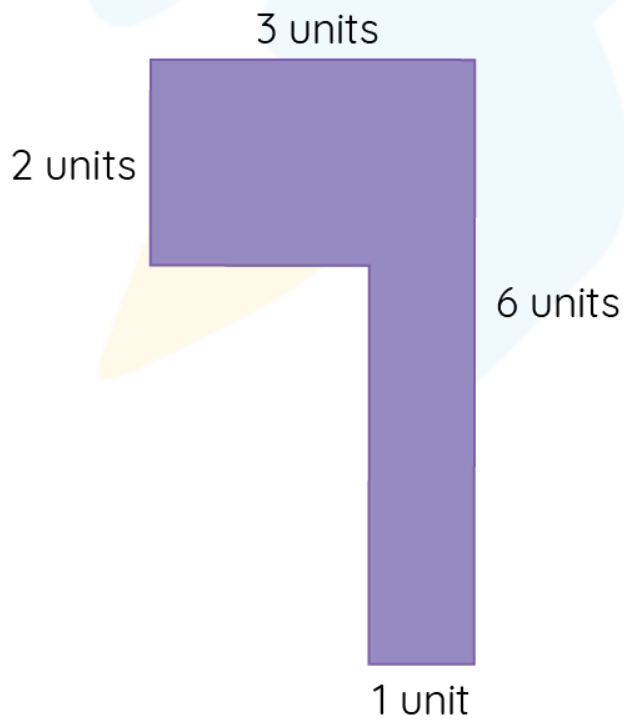
- 2) Find the perimeter if each box is 1 unit long.



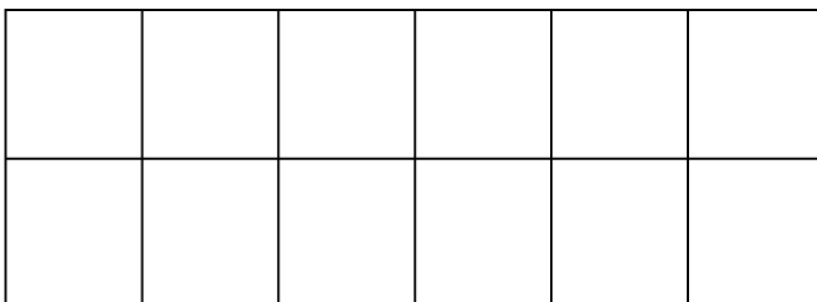
3) Find the perimeter of this rectangle with the sides given.



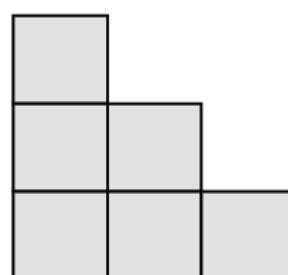
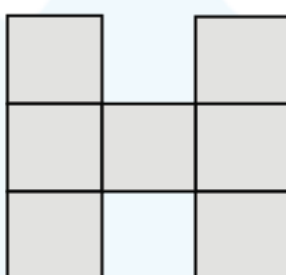
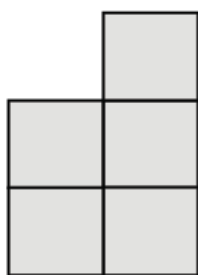
4) Find the perimeter of the compound shape.



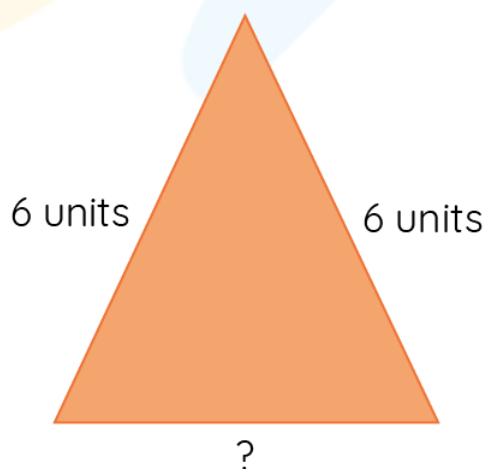
5) Find the perimeter of the shape if each block is 2 units long.



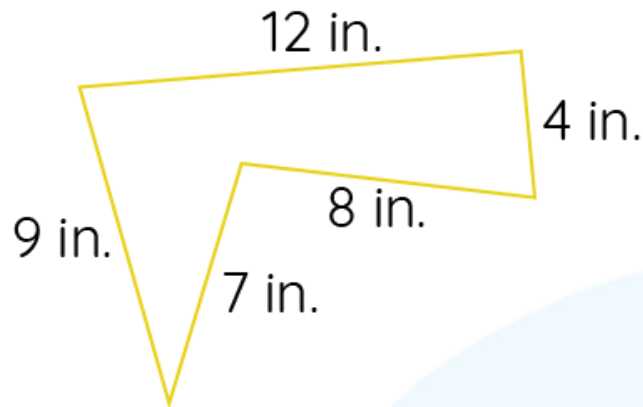
6) Find the perimeter of the shapes if each block is 5 units long.



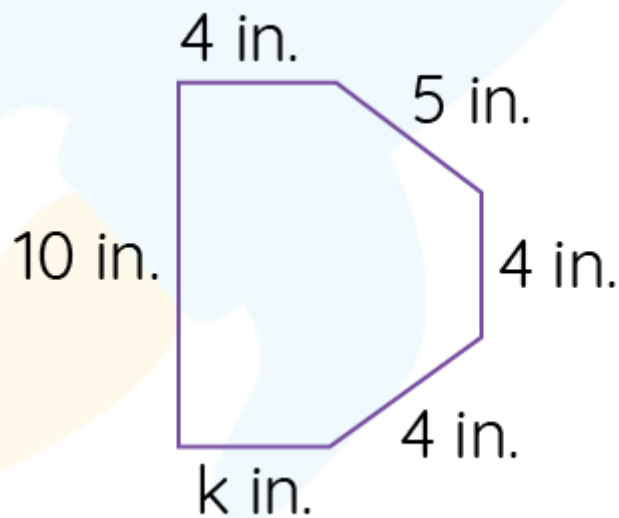
7) If the perimeter of the triangle is 18 units, find the missing side of the triangle.



8) Find the perimeter of the given shape.



9) If the perimeter of the shape is 32 inches, find the value of k .



10) A photo is 8 inches long and 4 inches wide. John wants to frame it. How much will he pay if it costs \$8 per inch to frame?

When you learn math
in an interesting way,
you never forget.



25 Million

Math classes &
counting

100K+

Students learning
Math the right way

20+ Countries

Present across USA, UK,
Singapore, India, UAE & more.

Why choose Cuemath?

"Cuemath is a valuable addition to our family. We love solving puzzle cards. My daughter is now visualizing maths and solving problems effectively!"

- Gary Schwartz

"Cuemath is great because my son has a one-on-one interaction with the teacher. The instructor has developed his confidence and I can see progress in his work. One-on-one interaction is perfect and a great bonus."


- Kirk Riley

"I appreciate the effort that miss Nitya puts in to help my daughter understand the best methods and to explain why she got a problem incorrect. She is extremely patient and generous with Miranda."

- Barbara Cabrera

Get the Cuemath advantage

Book a FREE trial class

**ANSWERS**

1)	8 inches
2)	24 units
3)	22 units
4)	18 units
5)	32 units
6)	a) 50 units b) 80 units c) 60 units

7)	6 units
8)	40 units
9)	$k = 4$ inches
10)	\$192

FUN FACT

1. The length of the closed curve is the perimeter.
2. It is the boundary of a plane figure.
3. It is also the distance around the 2d shape
4. The perimeter of the circle is known as the circumference.

