

Get better at Math.  
Get better at  
everything.



Come experience the Cuemath methodology and ensure your child stays ahead at math this summer.



**Adaptive  
Platform**



**Interactive Visual  
Simulations**



**Personalized  
Attention**

For Grades 1 - 10




LIVE online classes  
by trained and  
certified experts.

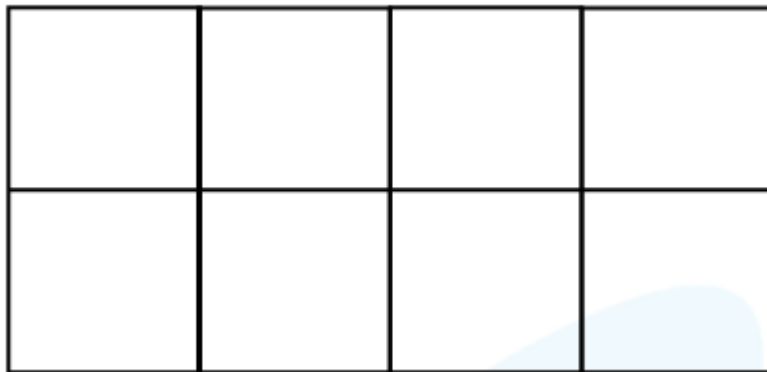
Get the Cuemath advantage

**Book a FREE trial class**

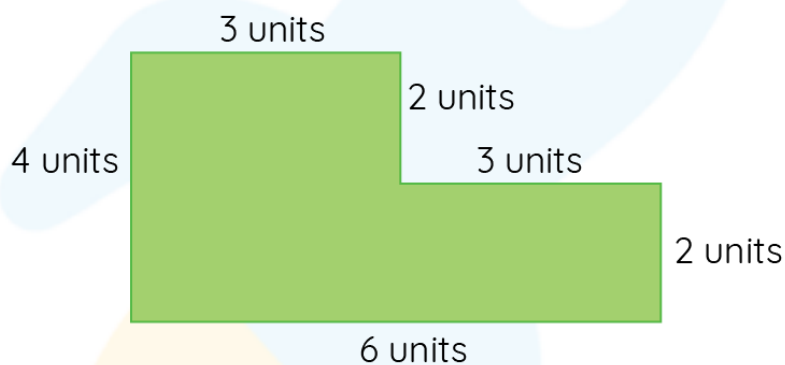
- 

- 
- A blue rectangle is shown with a width of 5 units and a height of 3 units. The dimensions are labeled on the top, bottom, left, and right sides.

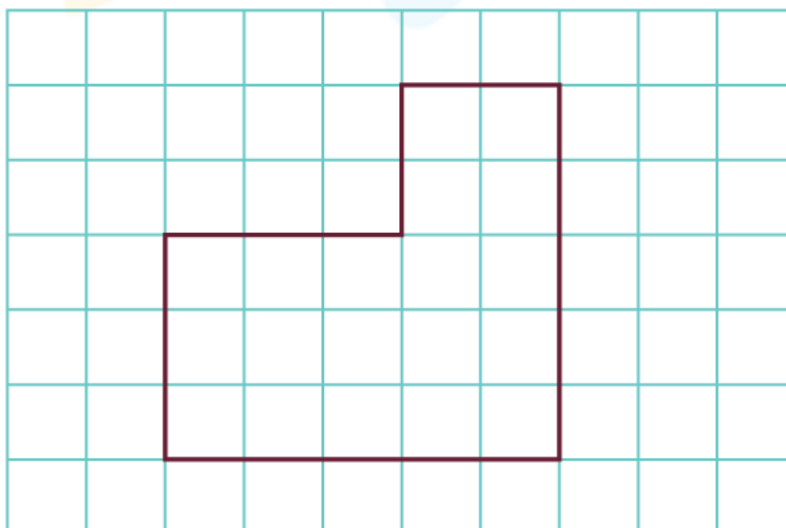
3. Find the perimeter of the shape if each block is 2 units long.



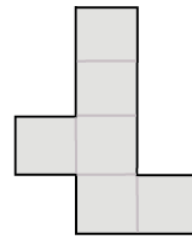

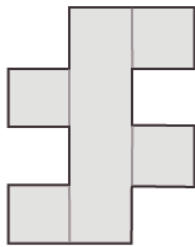
4. Find the perimeter of the compound shape.



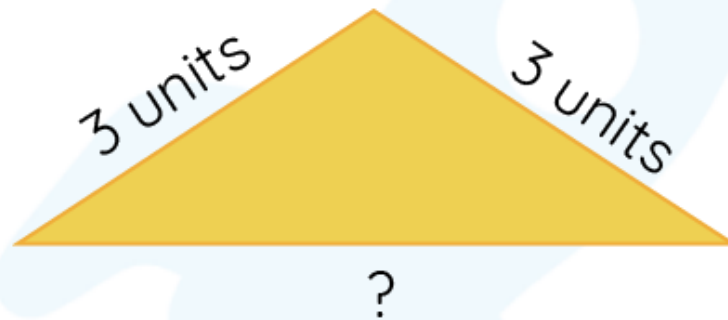
5. Find the perimeter of the shape if each cell is 1 unit long.



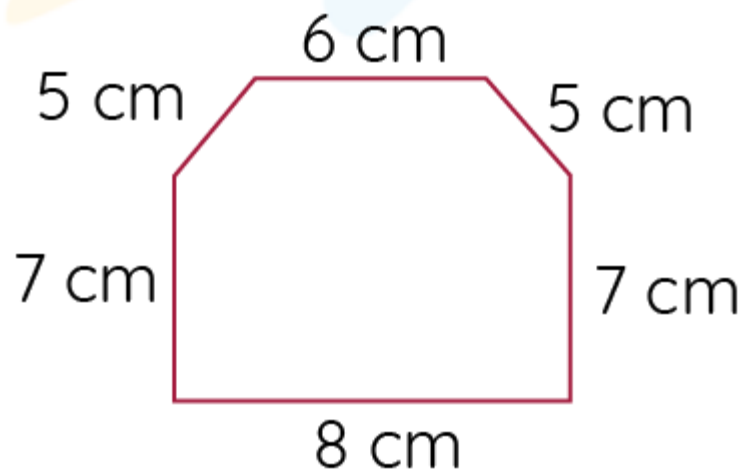
6. Find the perimeter of each shape given below if each block is 3 units long.



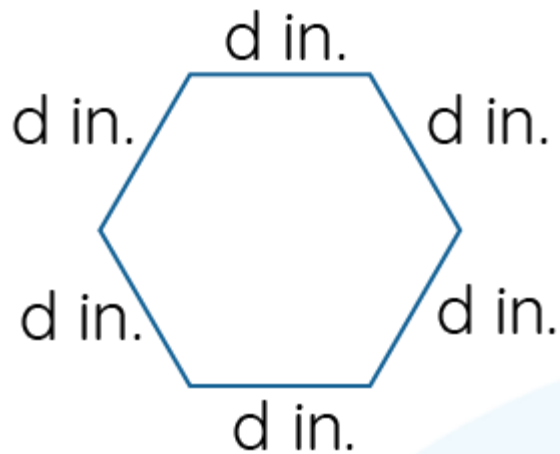
7. Find the third side if the perimeter of the triangle is 11 units.



8. Find the perimeter of the given shape.



9. Find the value of  $d$  if the perimeter of the regular hexagon is 24 inches.



10. Jack's dining room is 5 inches wide and 12 inches long. He wants to install wooden trim around the top of the room. The trim costs \$5 per inch. How much will it cost him to buy enough trim?

When you learn math  
in an interesting way,  
you never forget.



**25 Million**

Math classes &  
counting

**100K+**

Students learning  
Math the right way

**20+ Countries**

Present across USA, UK,  
Singapore, India, UAE & more.

## Why choose Cuemath?

"Cuemath is a valuable addition to our family. We love solving puzzle cards. My daughter is now visualizing maths and solving problems effectively!"

- Gary Schwartz

"Cuemath is great because my son has a one-on-one interaction with the teacher. The instructor has developed his confidence and I can see progress in his work. One-on-one interaction is perfect and a great bonus."

- Kirk Riley

"I appreciate the effort that miss Nitya puts in to help my daughter understand the best methods and to explain why she got a problem incorrect. She is extremely patient and generous with Miranda."

- Barbara Cabrera

Get the Cuemath advantage

**Book a FREE trial class**

**ANSWERS**

1)	6 inches
2)	16 units
3)	24 units
4)	20 units
5)	20 units
6)	a)54 units   b) 42 units   c) 42 units

7)	5 units
8)	38 units
9)	$d = 4$
10)	\$ 170



### FUN FACT

- The length of the closed curve is the perimeter.
- It is the boundary of a plane figure.
- It is also the distance around the 2d shape
- The perimeter of the circle is known as the circumference.

