

Get better at Math.
Get better at
everything.



Come experience the Cuemath methodology and ensure your child stays ahead at math this summer.



**Adaptive
Platform**



**Interactive Visual
Simulations**



**Personalized
Attention**

For Grades 1 - 10



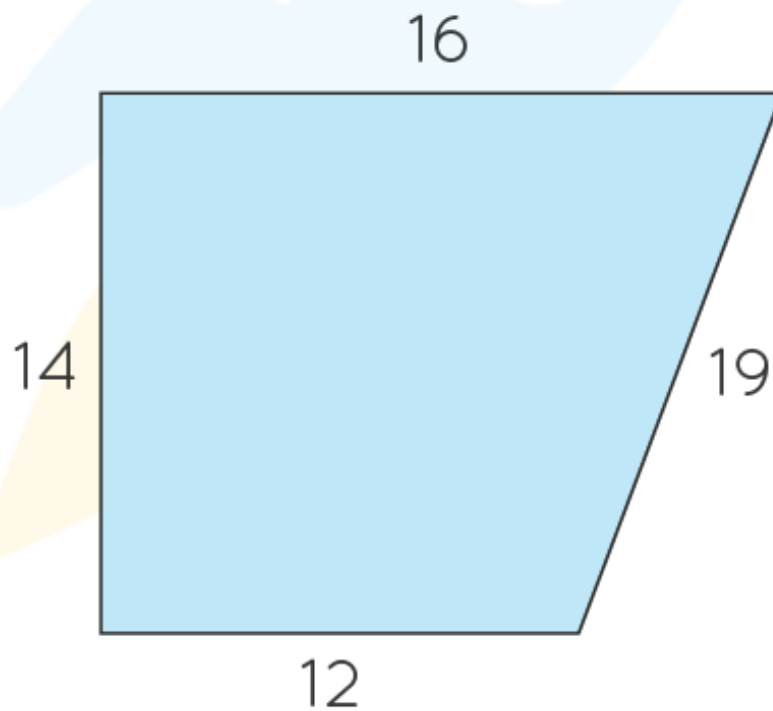
LIVE online classes
by trained and
certified experts.

Get the Cuemath advantage

Book a FREE trial class

PERIMETER OF QUADRILATERALS WORKSHEET III

- 1) A ground in a shape of a parallelogram needs to be fenced by a wire. The one side of the parallelogram is 8 inches, and the area of ground is 120 sq. inches respectively. Find the minimum length of wire needed for the work.
- 2) A rectangular piece of cloth is 44 in long and 25 in wide. Find the length of the string of beads that needs to be stitched along the boundary of the cloth for decoration.
- 3) Find the perimeter of the given shape:



- 4) Find the perimeter of the swimming pool shaped like a rectangle of width 40 ft and 30 ft.
- 5) State whether the following statement is true or false:
If two rectangles have the same perimeter, then they must have the same area.

6) Which of the following has a smaller perimeter?

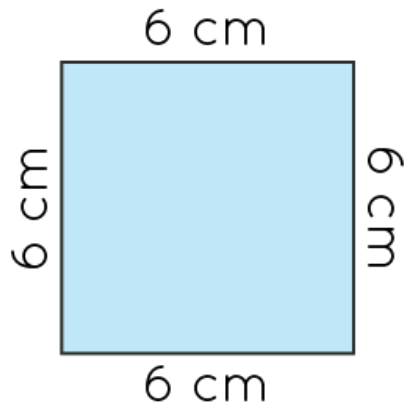


Figure 1

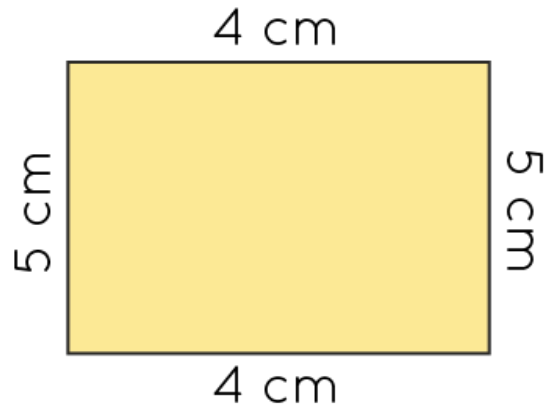


Figure 2

7) Find the perimeter of a rhombus with length of the side as 16 units.

8) Match the following:

Shapes	Perimeter
a) Square with side length 7 m	i) 50m
b) Rectangle with length 8 m and breadth 4 m	ii) 28m
c) Trapezium with side lengths 10m, 17m, 15m and 8m	iii) 24m
d) Rhombus with side 4.5m	iv) 18 m

9) Find the perimeter of a square of side length 200 in.

10) The length of a rhombus is 32 unit. The perimeter of rhombus is _____ units.

When you learn math
in an interesting way,
you never forget.



25 Million

Math classes &
counting

100K+

Students learning
Math the right way

20+ Countries

Present across USA, UK,
Singapore, India, UAE & more.

Why choose Cuemath?

"Cuemath is a valuable addition to our family. We love solving puzzle cards. My daughter is now visualizing maths and solving problems effectively!"

- Gary Schwartz

"Cuemath is great because my son has a one-on-one interaction with the teacher. The instructor has developed his confidence and I can see progress in his work. One-on-one interaction is perfect and a great bonus."


- Kirk Riley

"I appreciate the effort that miss Nitya puts in to help my daughter understand the best methods and to explain why she got a problem incorrect. She is extremely patient and generous with Miranda."

- Barbara Cabrera

Get the Cuemath advantage

Book a FREE trial class

**ANSWERS**

1)	15 in
2)	12
3)	61 units
4)	140 ft.
5)	False
6)	Figure 2
7)	64 units
8)	a: ii), b: iii), c: i), d: iv)
9)	800 in
10)	128

FUN FACT

- 1) Quadrilateral with 4 right angles is known as rectangle.
- 2) A quadrilateral that has two sets of parallel sides is known as parallelogram.
- 3) Kite is a common example of rhombus.

