

Get better at Math.  
Get better at  
everything.



Come experience the Cuemath methodology and ensure your child stays ahead at math this summer.



**Adaptive  
Platform**



**Interactive Visual  
Simulations**



**Personalized  
Attention**

For Grades 1 - 10



LIVE online classes  
by trained and  
certified experts.

Get the Cuemath advantage

**Book a FREE trial class**

## Patterns Worksheet for Grade 2

Q.1) Write the next three numbers in the pattern.

95	90	85	80	75	70	—	—	—
----	----	----	----	----	----	---	---	---

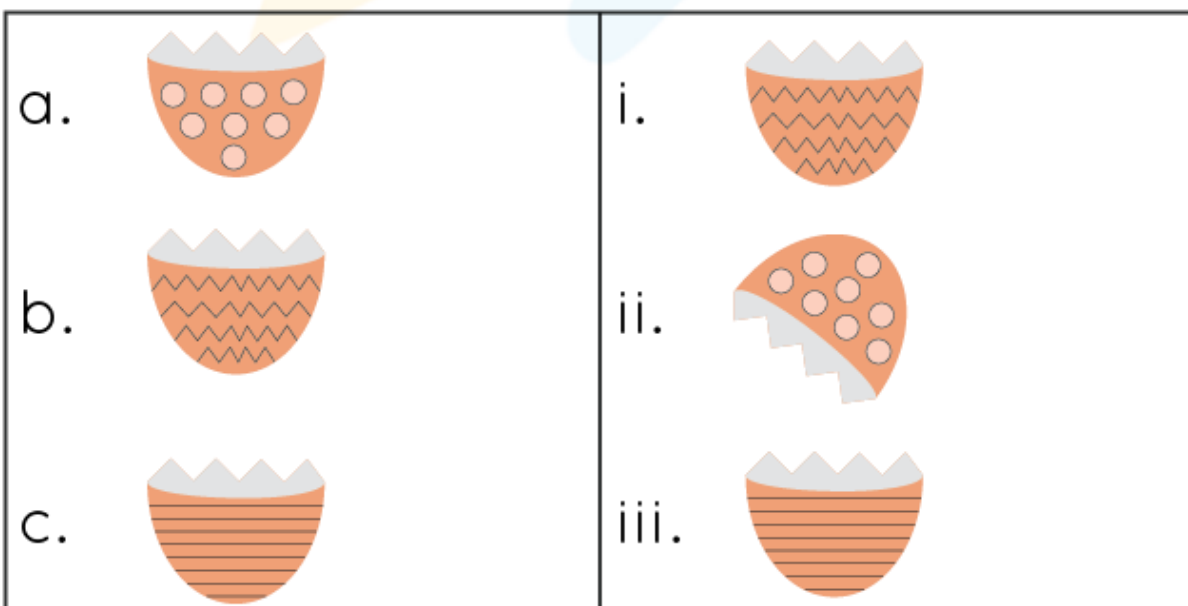
Q.2) James saves \$14 in the month of January. Every month he saves \$5 more than the previous month. How much will he save in the month of May?

Month	January	February	March	April	May
Savings (\$)	14	19	24	29	

Q.3) Fill in the missing food to make a pattern.









Q.4) Can you match the following eggshells?



Q.5) Observe the pattern and write the next three numbers in the sequence.

110, 100, 90, 80, 70, \_\_\_, \_\_\_, \_\_\_.

Q.6) Match the following:

(a)		(i)	
(b)		(ii)	
(c)		(iii)	


Q.7) Complete the sequence.

7, 14, 21, 28, 35, 42, \_\_\_, \_\_\_, \_\_\_.

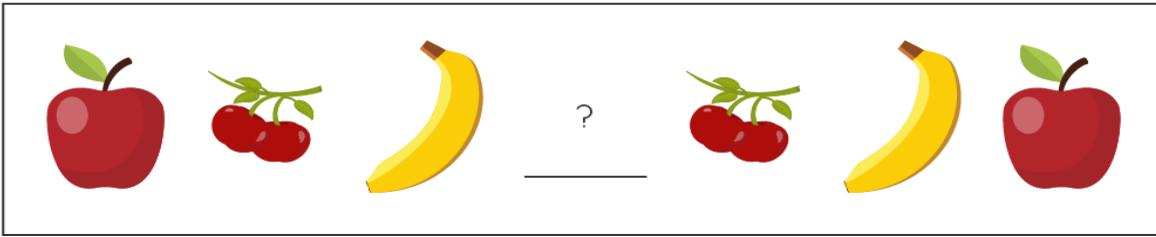
Q.8) Can you find the number pattern and fill the missing numbers?

199	189	__	169	__	__	139
-----	-----	----	-----	----	----	-----

Q.9) Shade the shape with the correct color according to the pattern.



Q.10) Fill in the missing fruit according to the pattern.



**When you learn math  
in an interesting way,  
you never forget.**



**25 Million**

Math classes &  
counting

**100K+**

Students learning  
Math the right way

**20+ Countries**

Present across USA, UK,  
Singapore, India, UAE & more.

## Why choose Cuemath?

"Cuemath is a valuable addition to our family. We love solving puzzle cards. My daughter is now visualizing maths and solving problems effectively!"

- Gary Schwartz

"Cuemath is great because my son has a one-on-one interaction with the teacher. The instructor has developed his confidence and I can see progress in his work. One-on-one interaction is perfect and a great bonus."


- Kirk Riley

"I appreciate the effort that miss Nitya puts in to help my daughter understand the best methods and to explain why she got a problem incorrect. She is extremely patient and generous with Miranda."

- Barbara Cabrera

Get the Cuemath advantage

**Book a FREE trial class**



**ANSWERS**

Q.1) Write the next three numbers in the pattern.

Solution:

95	90	85	80	75	70	<u>65</u>	<u>60</u>	<u>55</u>
----	----	----	----	----	----	-----------	-----------	-----------

Q.2) Solution:

\$34

Month	January	February	March	April	May
Savings (\$)	14	19	24	29	<b><u>34</u></b>

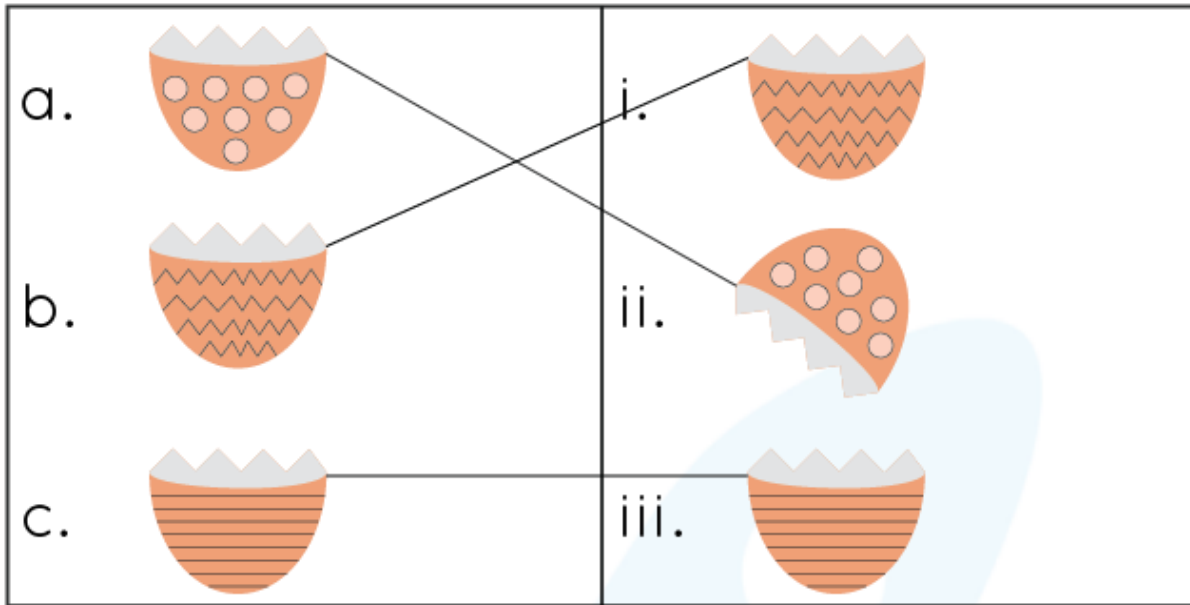
Q.3) Fill in the missing food to make a pattern.

Solution:



Q.4) Can you match the following eggshells?

Solution:



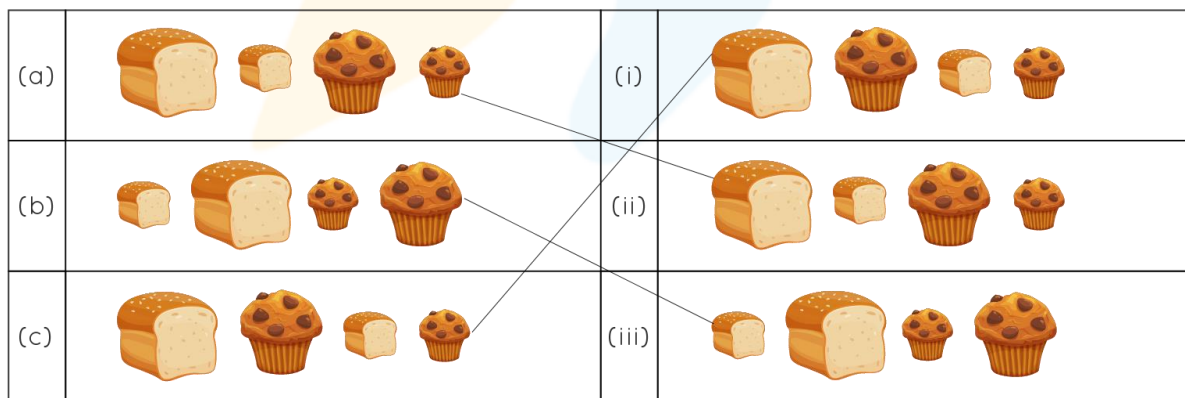
Q.5) Observe the pattern and write the next three numbers in the sequence.

Solution:

110, 100, 90, 80, 70, 60, 50, 40

Q.6) Match the following:

Solution:



Q.7) Complete the sequence.

Solution:

7, 14, 21, 28, 35, 42, 49, 56, 63


Q.8) Can you find the number pattern and fill the missing numbers?

Solution:

199	189	<u>179</u>	169	<u>159</u>	<u>149</u>	139
-----	-----	------------	-----	------------	------------	-----


Q.9) Shade the shape with the correct color according to the pattern.

Solution:



Q.10) Fill in the missing fruit according to the pattern.

Solution:





## FUN FACT

1. Patterns show us an order or an arrangement of objects.
2. Did you know that numbers are not created randomly? All numbers have a pattern that we can explore!
3. You can find patterns all around you! On the petals of flowers or even on the wings of a butterfly!

