

Get better at Math.
Get better at
everything.



Come experience the Cuemath methodology and ensure your child stays ahead at math this summer.



**Adaptive
Platform**



**Interactive Visual
Simulations**



**Personalized
Attention**

For Grades 1 - 10



LIVE online classes
by trained and
certified experts.

Get the Cuemath advantage

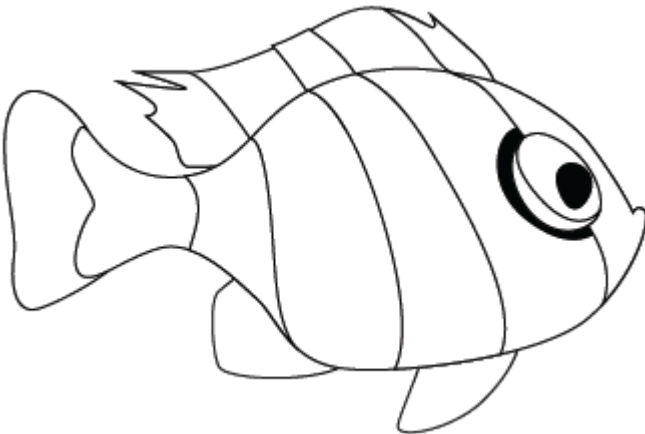
Book a FREE trial class

Numbers 1 to 5 Worksheet

Q1. Circle the animal which is two in number.



Q2. Color the fish in five different colors.



Q3. Color the shape which shows number 2.



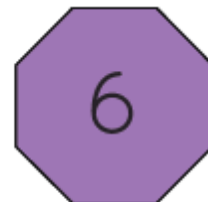
(a)



(b)



(c)



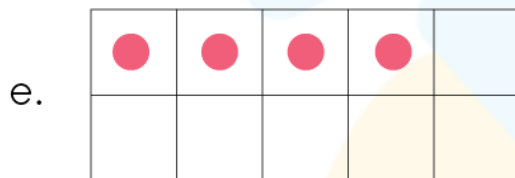
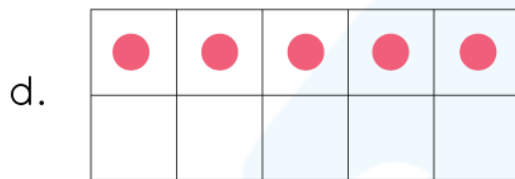
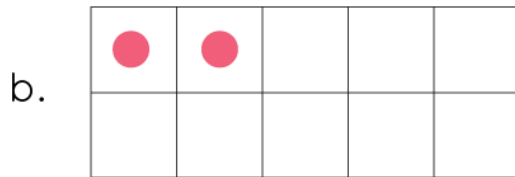
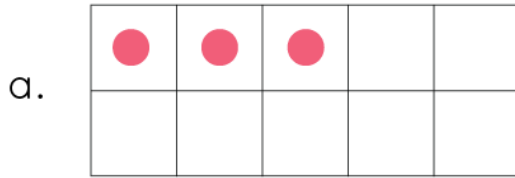
(d)



(e)

Q.4. What is the next number after 3?

Q5. Match the number with the correct dot.



5

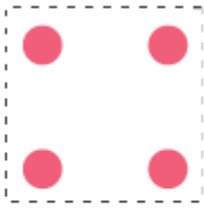
Q6. Write the number and the number name.



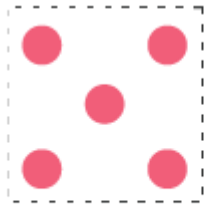
3 Three

3


Q7. Color the box that has 3 dots.




(a)



(b)




(c)



(d)

Q8. Circle the smaller number: 5, 4

Q9. Write the number and the number name:



Q10. Fill in 5 dots:

| | | | | |
|--|--|--|--|--|
| | | | | |
| | | | | |

When you learn math
in an interesting way,
you never forget.



25 Million

Math classes &
counting

100K+

Students learning
Math the right way

20+ Countries

Present across USA, UK,
Singapore, India, UAE & more.

Why choose Cuemath?

"Cuemath is a valuable addition to our family. We love solving puzzle cards. My daughter is now visualizing maths and solving problems effectively!"

- Gary Schwartz

"Cuemath is great because my son has a one-on-one interaction with the teacher. The instructor has developed his confidence and I can see progress in his work. One-on-one interaction is perfect and a great bonus."

- Kirk Riley

"I appreciate the effort that miss Nitya puts in to help my daughter understand the best methods and to explain why she got a problem incorrect. She is extremely patient and generous with Miranda."



- Barbara Cabrera

















Get the Cuemath advantage

Book a FREE trial class



ANSWERS

| | |
|----|---|
| 1) | <p>Zebra</p>  |
| 2) |  |
| 3) | (c) |
| 4) | 4 or four |
| 5) | (d) |

| | | | | | | | | | | | |
|---|---|---|---|---|---|---|--|--|--|--|--|
| 6) | <div></div> <div>3 Three</div> <div>3 Three</div> <div>3 Three</div> | | | | | | | | | | |
| 7) | (c) | | | | | | | | | | |
| 8) | 5 | | | | | | | | | | |
| 9) | 2-two | | | | | | | | | | |
| 10) | <div>Fill one dot each in any 5 boxes.</div> <table><tr><td></td><td></td><td></td><td></td><td></td></tr><tr><td></td><td></td><td></td><td></td><td></td></tr></table> |  |  |  |  |  | | | | | |
|  |  |  |  |  | | | | | | | |
| | | | | | | | | | | | |

FUN FACT

1. Every number when multiplied to 0 results in 0.
2. Five is the only prime that is the sum of two consecutive primes, namely 2 and 3.
3. A polygon with five sides is a pentagon.

