

Get better at Math.
Get better at
everything.



Come experience the Cuemath methodology and ensure your child stays ahead at math this summer.



**Adaptive
Platform**



**Interactive Visual
Simulations**



**Personalized
Attention**

For Grades 1 - 10



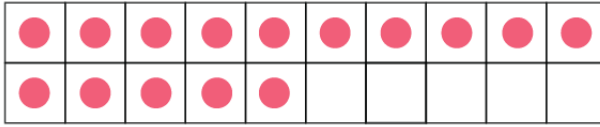
LIVE online classes
by trained and
certified experts.

Get the Cuemath advantage

Book a FREE trial class

Numbers 1 to 20 Worksheets

- 1) Count the dots. Write the number and the number name in the box.



Number

Name

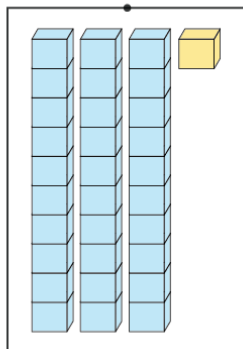
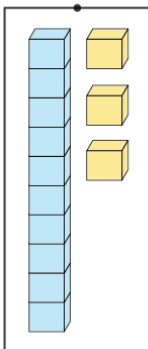


Number

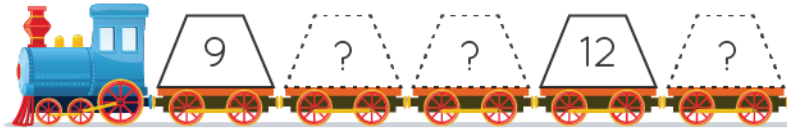
Name

- 2) The number just after 11 is?
- 3) The number between 18 and 20 is?
- 4) Count and match the number with the correct number of blocks.

13

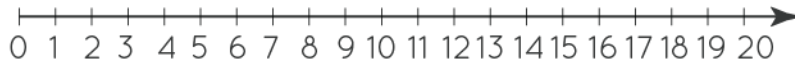


5) Write the missing numbers in the train.

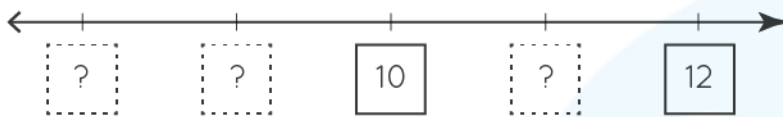


6) Fill the blanks.

The number line from 0 to 20 is shown



Write the numbers on number line



7) Order the number.

17	19		<		<		<	
13	12							

20	16		<		<		<	
15	11							

12	15		<		<		<	
13	10							

8) Arrange the numbers in decreasing order (starting from the largest).

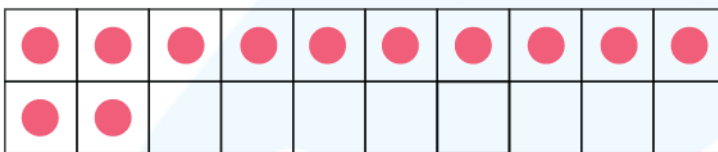
13	16					9	15
12	19					17	18

9) Write each expanded form and number name.

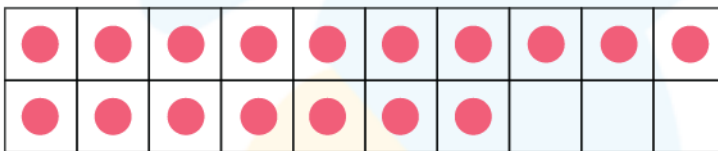


?	+	?	=	?
?				

10) Count the counters and write the numbers in the box.
Color the bigger number box.



?



?

When you learn math
in an interesting way,
you never forget.



25 Million

Math classes &
counting

100K+

Students learning
Math the right way

20+ Countries

Present across USA, UK,
Singapore, India, UAE & more.

Why choose Cuemath?

"Cuemath is a valuable addition to our family. We love solving puzzle cards. My daughter is now visualizing maths and solving problems effectively!"

- Gary Schwartz

"Cuemath is great because my son has a one-on-one interaction with the teacher. The instructor has developed his confidence and I can see progress in his work. One-on-one interaction is perfect and a great bonus."

- Kirk Riley

"I appreciate the effort that miss Nitya puts in to help my daughter understand the best methods and to explain why she got a problem incorrect. She is extremely patient and generous with Miranda."

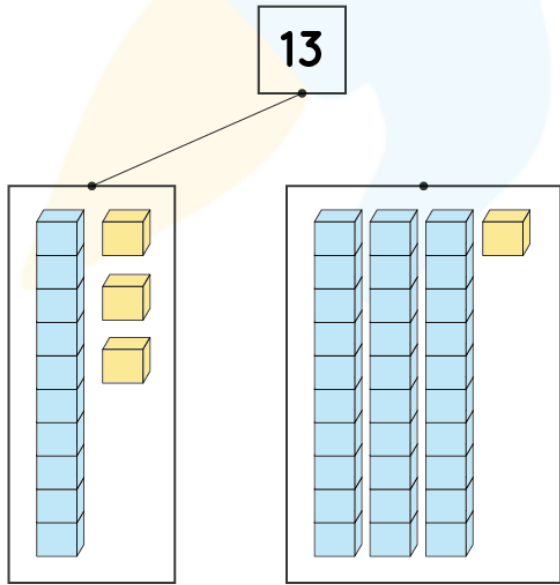
- Barbara Cabrera

Get the Cuemath advantage

Book a FREE trial class



ANSWERS

1)	<p>Number = 15 Name = Fifteen</p> <p>Number = 20 Name = Twenty</p>
2)	The number just after 11 is 12 .
3)	The number between 18 and 20 is 19 .
4)	
5)	9, <u>10</u> , <u>11</u> , 12, <u>13</u>

6)	<u>8</u> , <u>9</u> , 10, <u>11</u> , 12
7)	(a) $12 < 13 < 17 < 19$ (b) $11 < 15 < 16 < 20$ (c) $10 < 12 < 13 < 15$
8)	(a) 19, 16, 13, 12 (b) 18, 17, 15, 9
9)	$10 + 7 = 17$ (SEVENTEEN)
10)	12 and 17

FUN FACT

1. The result of adding together the integers from 1 to 15 ($1+2+3+4+5$) results in 15.
2. In relation to the word 'seven', 17 is spelled 'seventeen.'
3. A group of 12 is often termed as a 'dozen'.

