

Get better at Math.
Get better at
everything.



Come experience the Cuemath methodology and ensure your child stays ahead at math this summer.



**Adaptive
Platform**



**Interactive Visual
Simulations**



**Personalized
Attention**

For Grades 1 - 10




LIVE online classes
by trained and
certified experts.

Get the Cuemath advantage

Book a FREE trial class

Numbers 1 to 10 Worksheets for Kindergarten

1. How do you count one on your fingers?



2. Can you touch your nose with one finger?


3. Is the smaller hand of the clock pointing at 2?



4. There are ____ petals in the flower.



5. Count the number of fruits.



6. Count the cups and match them to the right number.



Five

Seven

Six

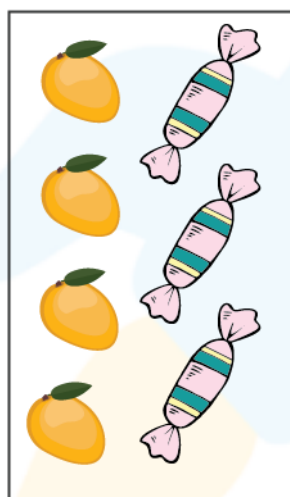
Eight

7. Write each expanded form and number name.



?	+	?	=	?
?				

8. Count the objects and answer.



How many  ?

--	--

How many  ?

--	--

How many in all?


--	--

9. Are there 10 ice cubes in the image?



--

10. Color the petals of the flower with eight different colors.



When you learn math
in an interesting way,
you never forget.



25 Million

Math classes &
counting

100K+

Students learning
Math the right way

20+ Countries

Present across USA, UK,
Singapore, India, UAE & more.

Why choose Cuemath?

"Cuemath is a valuable addition to our family. We love solving puzzle cards. My daughter is now visualizing maths and solving problems effectively!"

- Gary Schwartz

"Cuemath is great because my son has a one-on-one interaction with the teacher. The instructor has developed his confidence and I can see progress in his work. One-on-one interaction is perfect and a great bonus."

- Kirk Riley

"I appreciate the effort that miss Nitya puts in to help my daughter understand the best methods and to explain why she got a problem incorrect. She is extremely patient and generous with Miranda."

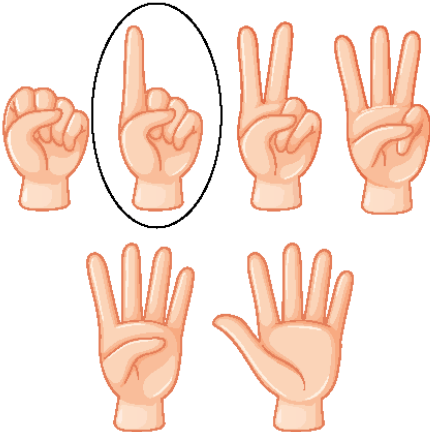
- Barbara Cabrera


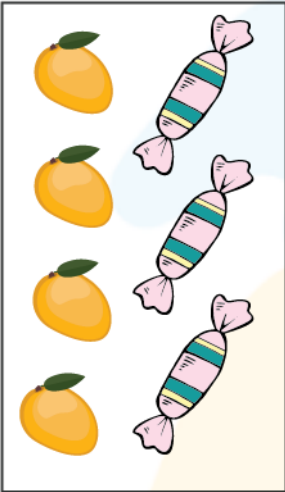


Get the Cuemath advantage

Book a FREE trial class




ANSWERS

1)	
2)	Yes
3)	No
4)	Five (5)
5)	Six fruits

6)	<div data-bbox="304 188 833 645">  </div> <div data-bbox="911 197 1176 640"> <div>Five</div> <div>Seven</div> <div>Six</div> <div>Eight</div> </div>
7)	$5 + 3 = 8$ (Eight)
8)	<div data-bbox="277 952 563 1442">  </div> <div data-bbox="576 958 983 1025"> How many  ? </div> <div data-bbox="576 1032 863 1106"> <div>4</div> <div>Four</div> </div> <div data-bbox="576 1115 983 1189"> How many  ? </div> <div data-bbox="576 1196 863 1270"> <div>3</div> <div>Three</div> </div> <div data-bbox="576 1294 1046 1352"> How many in all? </div> <div data-bbox="576 1361 863 1435"> <div>7</div> <div>Seven</div> </div>
9)	No, 10 ice cubes are not there in the image.

10)



FUN FACT

1. A number which is not divisible by 2 is an odd number.
2. A polygon with five number of sides is called a pentagon.
3. Did you know triangle (shape having 3 number of sides) is the strongest shape?

