

Get better at Math.
Get better at
everything.



Come experience the Cuemath methodology and ensure your child stays ahead at math this summer.



**Adaptive
Platform**



**Interactive Visual
Simulations**



**Personalized
Attention**

For Grades 1 - 10



LIVE online classes
by trained and
certified experts.

Get the Cuemath advantage

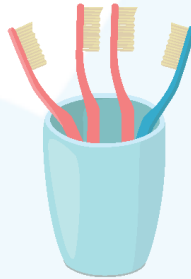
Book a FREE trial class

Numbers 1 to 10 Worksheets for Kindergarten


- 1) Count the number of caps and write in the box below.




- 2) The number of tooth brushes in cup is ____.




- 3) Emma has five legs. Circle the correct option (✓/X)



- 4) Color the number five in the below figure.



5) Find all the 6's in this image.



6) Match the following objects with the correct number.

1



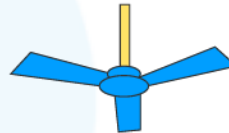
7



3



4



7) Write the number names.

5

4

9

8

1

7

2

3

8) Match the number with its correct spelling.



TGHIE

EIGHT

HEIGT

9) What is the number of balloons Amy is holding?



10) How many stars can you see? Circle the number.



5 2 8

1 4 6

3 7 9

When you learn math
in an interesting way,
you never forget.



25 Million

Math classes &
counting

100K+

Students learning
Math the right way

20+ Countries

Present across USA, UK,
Singapore, India, UAE & more.

Why choose Cuemath?

"Cuemath is a valuable addition to our family. We love solving puzzle cards. My daughter is now visualizing maths and solving problems effectively!"

- Gary Schwartz

"Cuemath is great because my son has a one-on-one interaction with the teacher. The instructor has developed his confidence and I can see progress in his work. One-on-one interaction is perfect and a great bonus."


- Kirk Riley

"I appreciate the effort that miss Nitya puts in to help my daughter understand the best methods and to explain why she got a problem incorrect. She is extremely patient and generous with Miranda."





- Barbara Cabrera

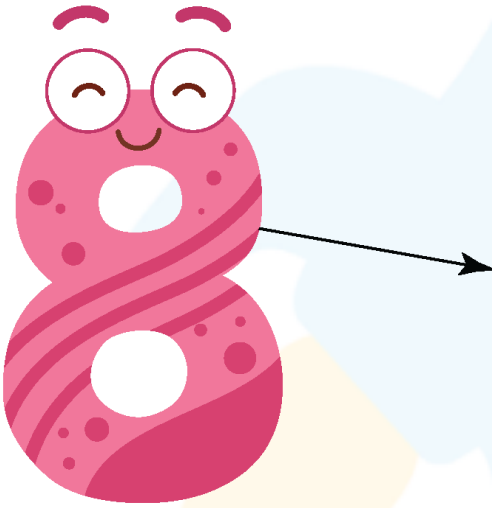
Get the Cuemath advantage

Book a FREE trial class



ANSWERS

1)	 
2)	four
3)	No, Emma has 2 legs only.
4)	
5)	

6)	<p>1 = Sun</p> <p>7 = Rainbow</p> <p>3 = fan blades</p> <p>4 = Lion's legs</p>
7)	<p>5 = Five</p> <p>4 = Four</p> <p>9 = Nine</p> <p>8 = Eight</p> <p>1 = One</p> <p>7 = Seven</p> <p>2 = Two</p> <p>3 = Three</p>
8)	 <div>TGHIE</div> <div>EIGHT</div> <div>HEIGT</div>
9)	Amy is holding 7 balloons.
10)	8

FUN FACT

1. Four is the only number name which consists of letters as per its value.
2. A four-sided plane figure is a quadrilateral.
3. 2 is the smallest even number.

