

Get better at Math.
Get better at
everything.



Come experience the Cuemath methodology and ensure your child stays ahead at math this summer.



**Adaptive
Platform**



**Interactive Visual
Simulations**



**Personalized
Attention**

For Grades 1 - 10



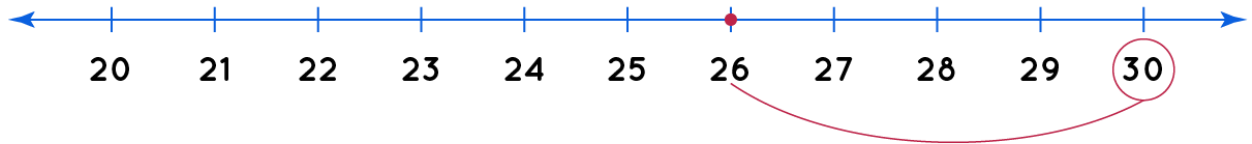
LIVE online classes
by trained and
certified experts.

Get the Cuemath advantage

Book a FREE trial class

Number Line Worksheets 3rd Grade

1) Answer the questions using number line.

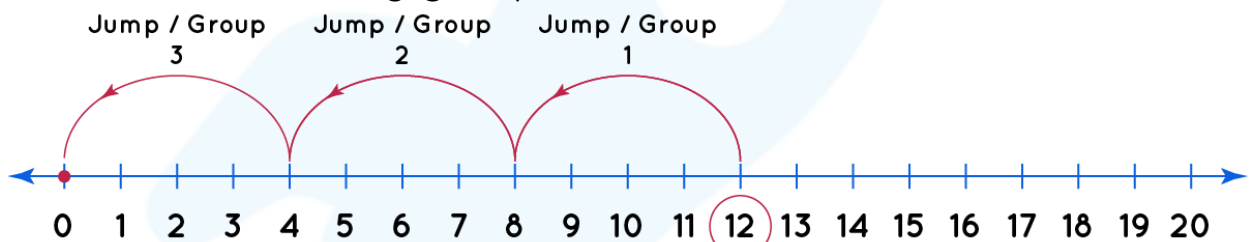


Which is the closest ten to 26?

20 ☐ 30 ☐

This means that 26 is rounded off to .

2) Following division shown on number line is correct or incorrect. How many groups are formed?



Start

Number of groups =

Division fact:

Multiplication fact:

3) Complete the addition statement using the following number line.

$$2500 + 1500 = \text{}$$



4) Fill the correct numbers in the boxes.



$$\boxed{} - \boxed{} = \boxed{}$$

Start Jumps End

5) Fill the number line.

The number line from 0 to 20 is shown



Write the numbers on each number line

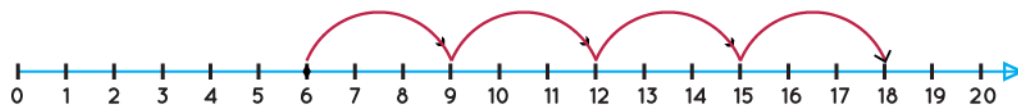


6) Show the below addition on number line.

$$13 + 4 = \boxed{}$$

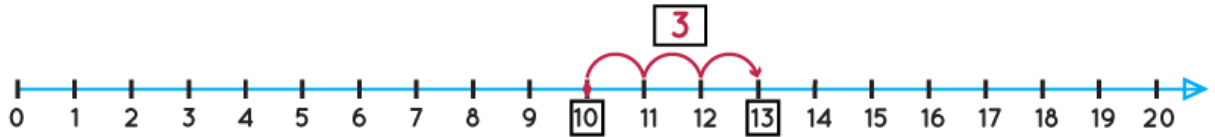


7) Fill the boxes with correct numbers.




$$\boxed{} \times \boxed{} = \boxed{}$$

8) Write the addition statement using number line.

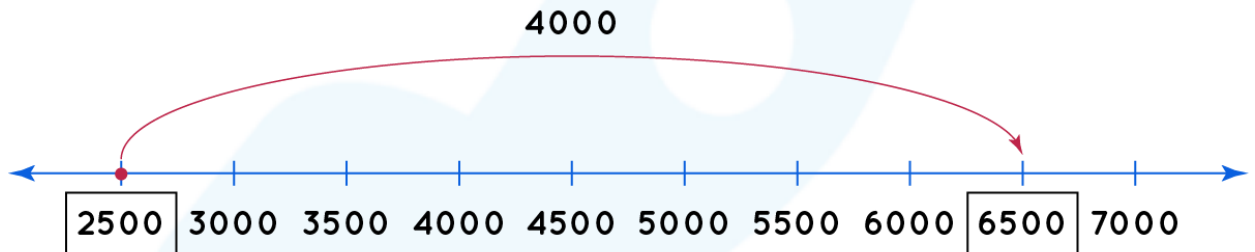


9) Divide twelve items into group of 4 on number line.



Number of groups formed =

10) Write the subtraction or addition statement using number line.



Statement:

When you learn math
in an interesting way,
you never forget.



25 Million

Math classes &
counting

100K+

Students learning
Math the right way

20+ Countries

Present across USA, UK,
Singapore, India, UAE & more.

Why choose Cuemath?

"Cuemath is a valuable addition to our family. We love solving puzzle cards. My daughter is now visualizing maths and solving problems effectively!"

- Gary Schwartz

"Cuemath is great because my son has a one-on-one interaction with the teacher. The instructor has developed his confidence and I can see progress in his work. One-on-one interaction is perfect and a great bonus."

- Kirk Riley

"I appreciate the effort that miss Nitya puts in to help my daughter understand the best methods and to explain why she got a problem incorrect. She is extremely patient and generous with Miranda."

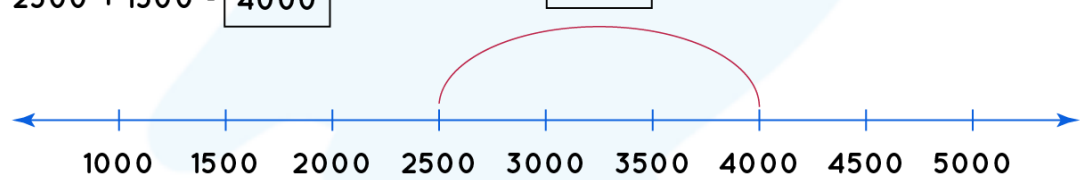
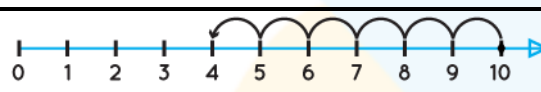



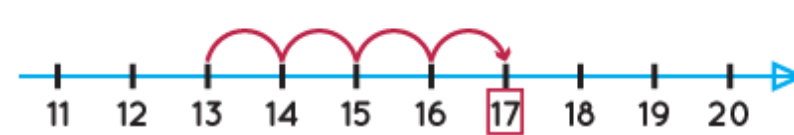
- Barbara Cabrera

Get the Cuemath advantage

Book a FREE trial class



ANSWERS

1)	30
2)	Correct Number of groups formed = 3
3)	$2500 + 1500 = 4000$ <div style="display: flex; justify-content: space-around; align-items: center;"> <div style="border: 1px solid black; padding: 2px;">1500</div>  </div>
4)	 <div style="text-align: center; margin-top: 10px;"> <div style="display: flex; justify-content: center; gap: 10px;"> <div style="border: 1px dashed black; padding: 2px;">10</div> <div style="border: 1px dashed black; padding: 2px;">-</div> <div style="border: 1px dashed black; padding: 2px;">6</div> <div style="border: 1px dashed black; padding: 2px;">=</div> <div style="border: 1px dashed black; padding: 2px;">4</div> </div> <div style="display: flex; justify-content: center; gap: 10px; font-size: small;"> Start Jumps End </div> </div>
5)	<p>The number line from 0 to 20 is shown</p>  <p>Write the numbers on each number line</p> <div style="margin-top: 10px;">   </div>
6)	$13 + 4 = 17$ 

7)	$3 \times 4 = 12.$
8)	$10 + 3 = 13.$
9)	Number of groups formed = $12 \div 4 = 3$
10)	$2500 + 4000 = 6500$

FUN FACT

1. Number line is a straight line with numbers on it.
2. On number line, numbers increases left to right.
3. On number line number decreases right to left.
4. We can perform addition and subtraction together on number line.

