

Get better at Math.  
Get better at  
everything.



Come experience the Cuemath methodology and ensure your child stays ahead at math this summer.



**Adaptive  
Platform**



**Interactive Visual  
Simulations**



**Personalized  
Attention**

For Grades 1 - 10



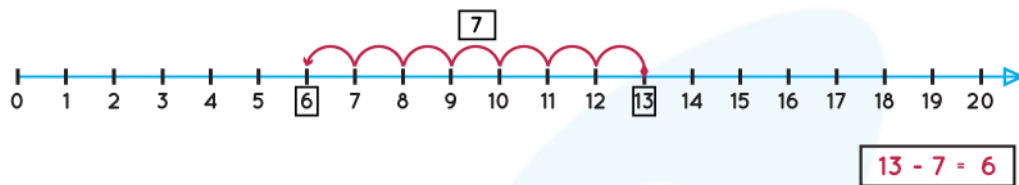
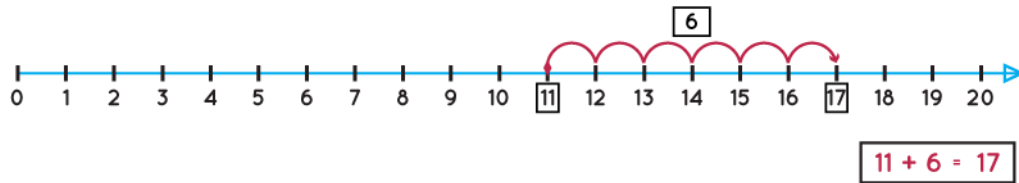
LIVE online classes  
by trained and  
certified experts.

Get the Cuemath advantage

**Book a FREE trial class**

## Number Line Worksheets 3<sup>rd</sup> Grade

- 1) Below subtraction and addition statements shown on number line are true or false.

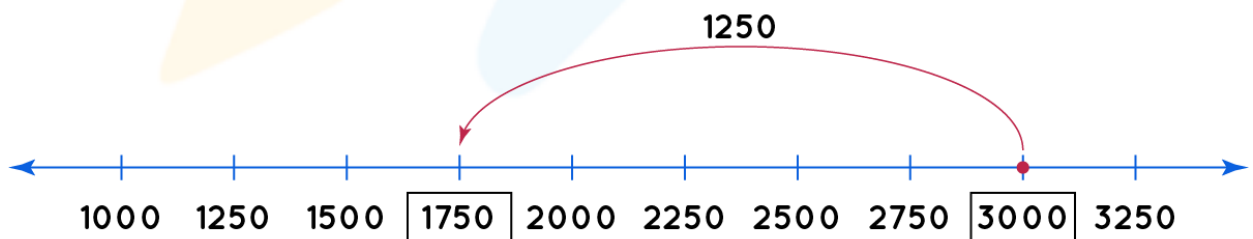


- 2) State right or wrong. Are below marked points on number line right?

A = 4730, B = 4737, C = 4732, D = 4735

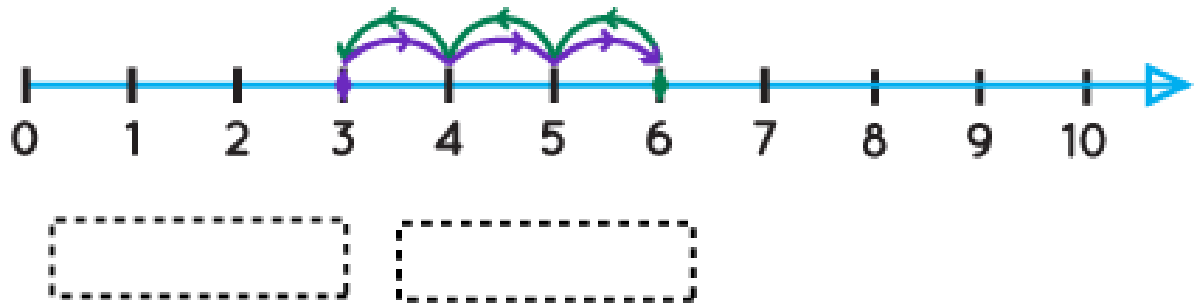


- 3) Write the addition or subtraction statement using the following number line.

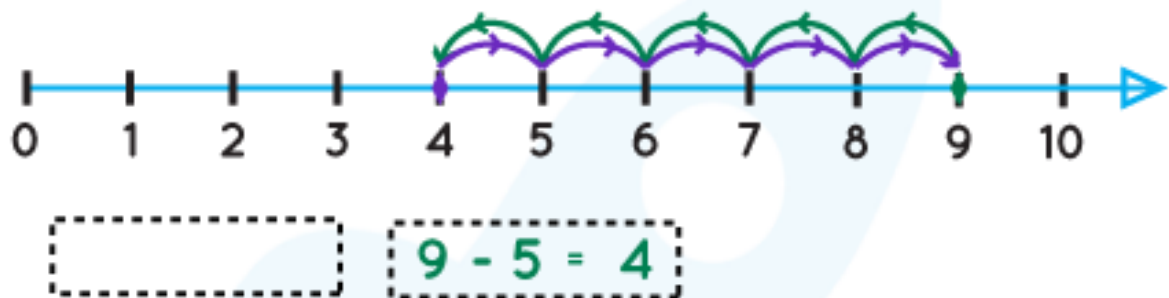


Statement:

4) Use the number line and write addition and subtraction statements in the boxes.

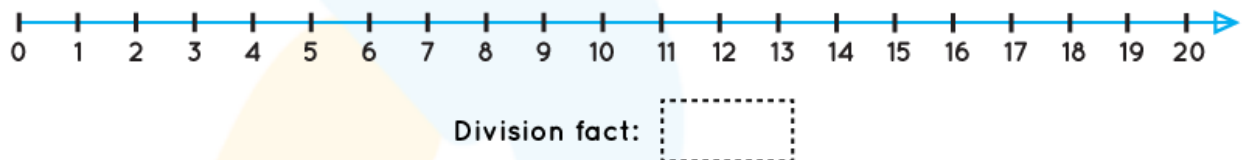


5) With the help of number line fill the blank.

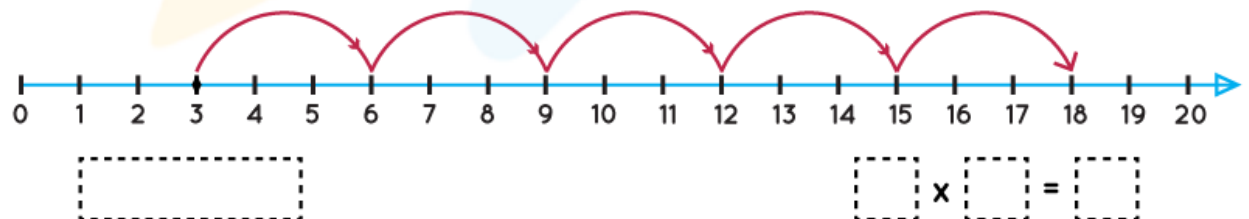


6) Write division statement using number line.

**Divide 16 into groups of 4.**



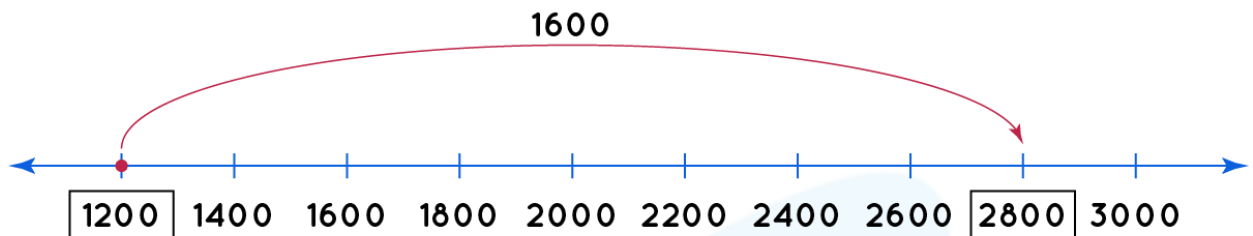
7) Fill the boxes with correct numbers.



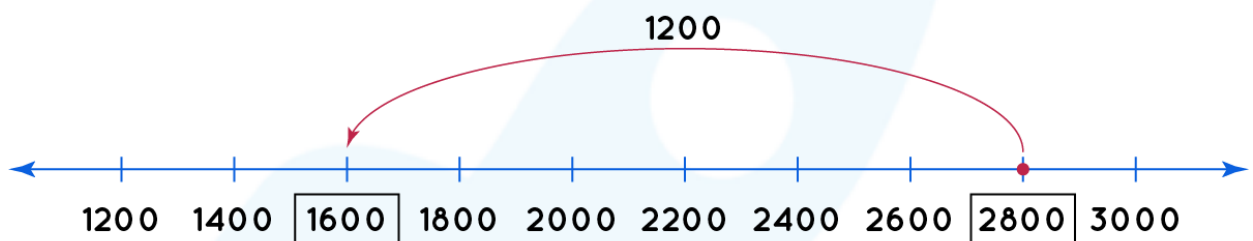
8) Write the addition and subtraction statements using number line.

1200, 2800, 1600

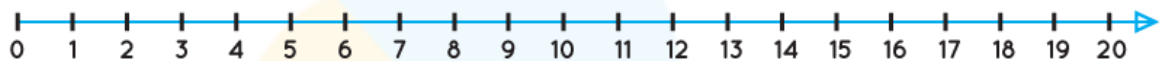
Addition statement:



Subtraction statement:



9) Divide 8 items into groups of 4 on number line.



Number of pairs formed =

10) Show the multiplication on number line.

$3 \times 4 =$



$\times$

$4 \times 3 =$



$\times$

When you learn math  
in an interesting way,  
you never forget.



**25 Million**

Math classes &  
counting

**100K+**

Students learning  
Math the right way

**20+ Countries**

Present across USA, UK,  
Singapore, India, UAE & more.

## Why choose Cuemath?

"Cuemath is a valuable addition to our family. We love solving puzzle cards. My daughter is now visualizing maths and solving problems effectively!"

- Gary Schwartz

"Cuemath is great because my son has a one-on-one interaction with the teacher. The instructor has developed his confidence and I can see progress in his work. One-on-one interaction is perfect and a great bonus."

- Kirk Riley

"I appreciate the effort that miss Nitya puts in to help my daughter understand the best methods and to explain why she got a problem incorrect. She is extremely patient and generous with Miranda."

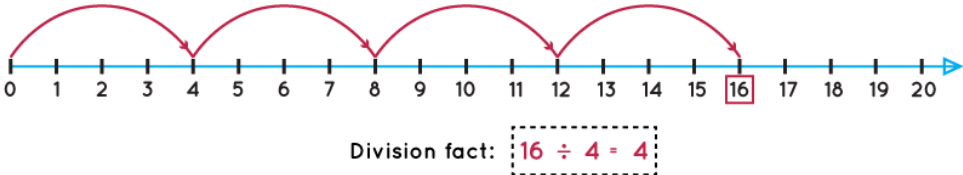
- Barbara Cabrera

Get the Cuemath advantage

**Book a FREE trial class**



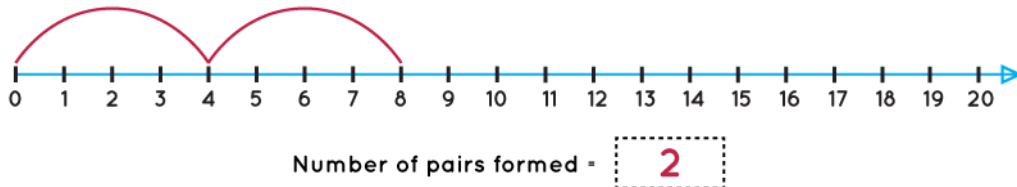
## ANSWERS

1)	True
2)	Yes, Right
3)	Subtraction Statement = $3000 - 1250 = 1750$
4)	$2 + 3 = 5$ $5 - 3 = 2$
5)	$4 + 5 = 9$
6)	 <p>Division fact: <math>16 \div 4 = 4</math></p>
7)	$5 \times 3 = 15$

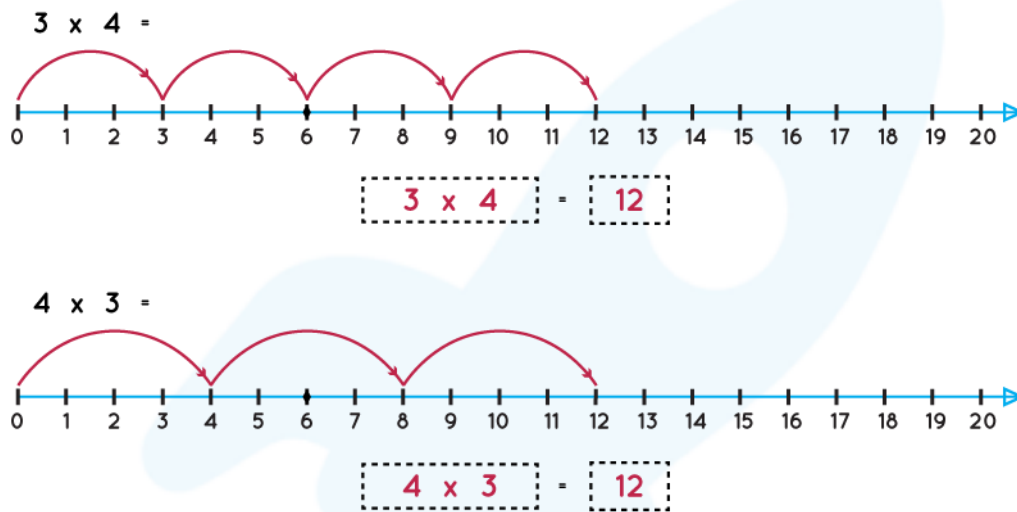


8) Addition Statement =  $1200 + 1600 = 2800$ .  
Subtraction Statement =  $2800 - 1200 = 1600$ .

9)



10)



## FUN FACT

1. Number line is a straight line with numbers on it.
2. On number line, numbers increases left to right.
3. On number line number decreases right to left.
4. We can perform addition and subtraction together on number line.

