

Get better at Math.
Get better at
everything.



Come experience the Cuemath methodology and ensure your child stays ahead at math this summer.



**Adaptive
Platform**



**Interactive Visual
Simulations**



**Personalized
Attention**

For Grades 1 - 10



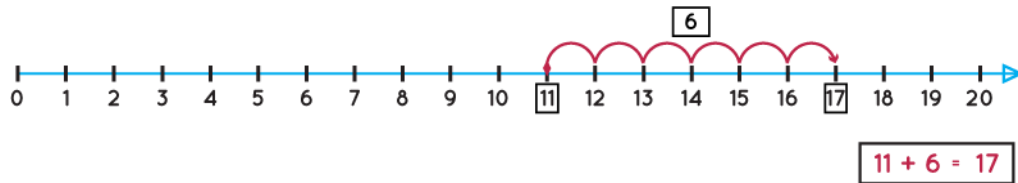
LIVE online classes
by trained and
certified experts.

Get the Cuemath advantage

Book a FREE trial class

Number Line Addition Worksheets

- 1) Below addition statement shown on number line is true or false.



- 2) Write the addition statement using the number line.

$$15 + 4 = \boxed{}$$

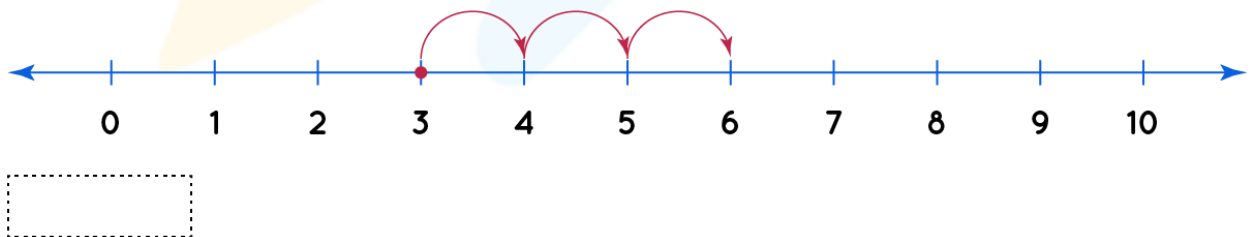


- 3) Complete the addition statement using the following number line.

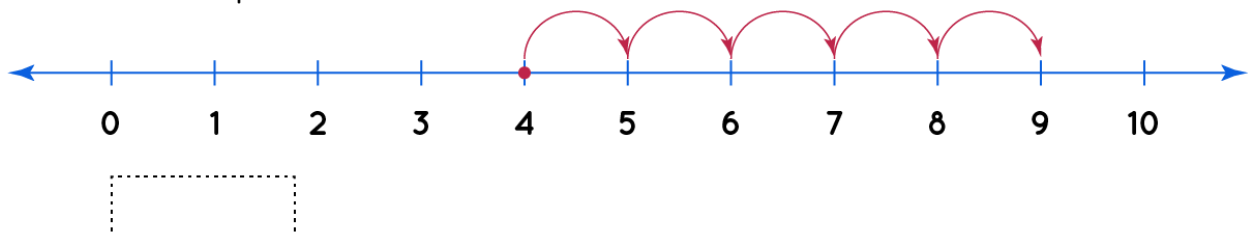
$$4 + 4 = \boxed{}$$



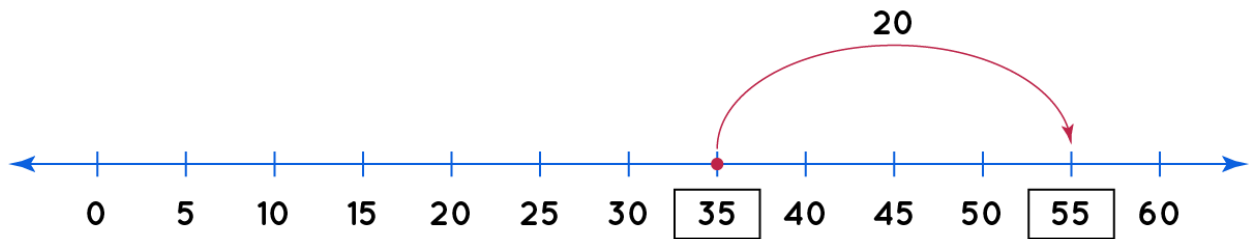
- 4) Use the number line write addition statement in the box.



- 5) With the help of number line fill the blank.

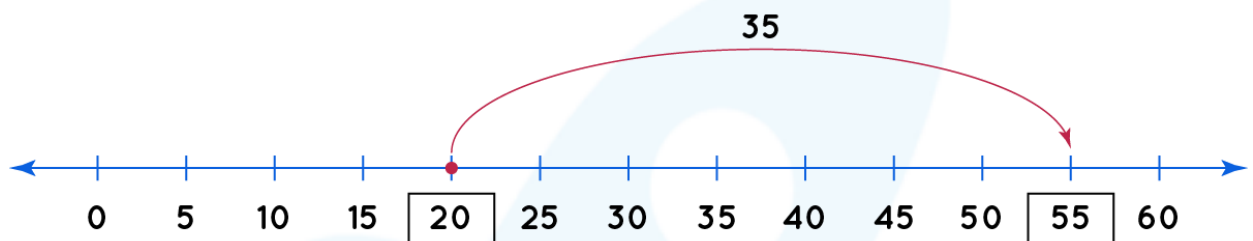


6) Write addition statement using number line.



Statement:

7) Fill the statement box.



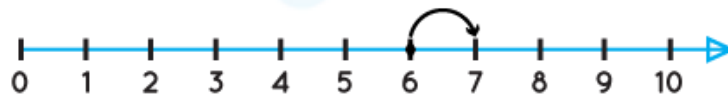
Statement:

8) Complete addition statements using number line.

$$1 + 6 = \boxed{}$$



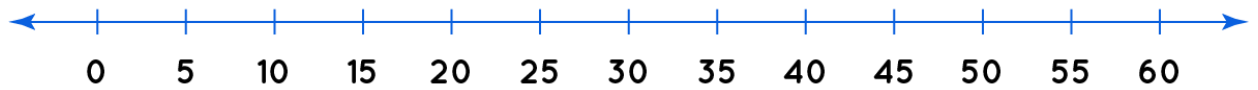
$$6 + 1 = \boxed{}$$



9) Represent addition statement on number line using below numbers.

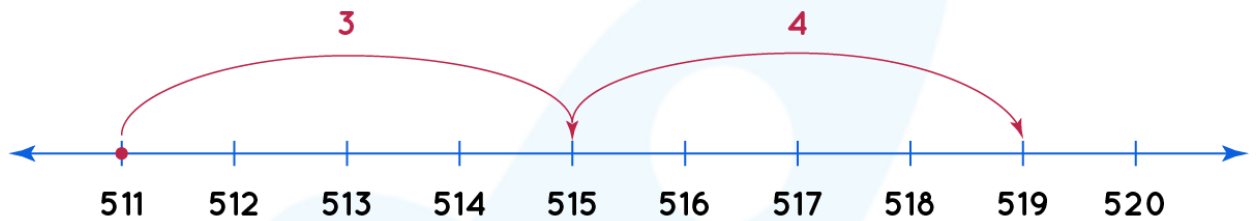
15, 25, 40

Addition statement:



10) Fill the box using number line.

$$512 + 3 + 4 = \boxed{?}$$



When you learn math
in an interesting way,
you never forget.



25 Million

Math classes &
counting

100K+

Students learning
Math the right way

20+ Countries

Present across USA, UK,
Singapore, India, UAE & more.

Why choose Cuemath?

"Cuemath is a valuable addition to our family. We love solving puzzle cards. My daughter is now visualizing maths and solving problems effectively!"

- Gary Schwartz

"Cuemath is great because my son has a one-on-one interaction with the teacher. The instructor has developed his confidence and I can see progress in his work. One-on-one interaction is perfect and a great bonus."

- Kirk Riley

"I appreciate the effort that miss Nitya puts in to help my daughter understand the best methods and to explain why she got a problem incorrect. She is extremely patient and generous with Miranda."

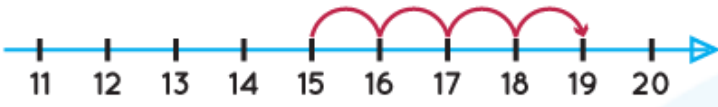
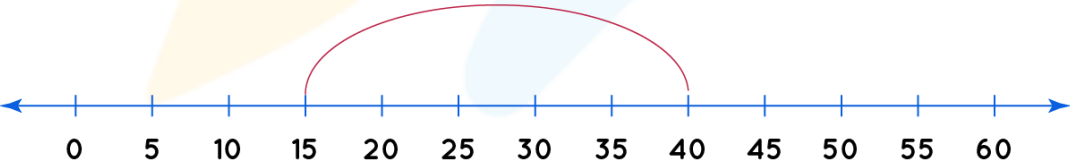
- Barbara Cabrera

Get the Cuemath advantage

Book a FREE trial class



ANSWERS

1)	True
2)	$15 + 4 = 19$ 
3)	$4 + 4 = 8$
4)	$3 + 3 = 6$
5)	$4 + 5 = 9$
6)	$35 + 20 = 55$
7)	$20 + 35 = 55$
8)	$1 + 6 = 7.$ $6 + 1 = 7.$
9)	<div style="display: flex; justify-content: space-between; align-items: flex-start;"> <div> $15, 25, 40$ </div> <div> Addition statement $15 + 25 = 40$ </div> </div> <div style="text-align: center; margin: 10px 0;"> 25 </div> 
10)	519

FUN FACT

1. Number line is a straight line with numbers on it.
2. On number line, numbers increase left to right.
3. On number line, numbers decrease right to left.
4. We can perform addition and subtraction together on number line.

