

Get better at Math.
Get better at
everything.



Come experience the Cuemath methodology and ensure your child stays ahead at math this summer.



**Adaptive
Platform**



**Interactive Visual
Simulations**



**Personalized
Attention**

For Grades 1 - 10



LIVE online classes
by trained and
certified experts.

Get the Cuemath advantage


Book a FREE trial class

Number 3 Worksheets

Q.1. Count the number of caps and write in the box below



Q.2. Tick the flower pot with three flowers.



Q.3. Circle the animal which is three in number.




Q.4. What is the number of balloons Amy is holding?



Q.5. Which candle shows number 3?



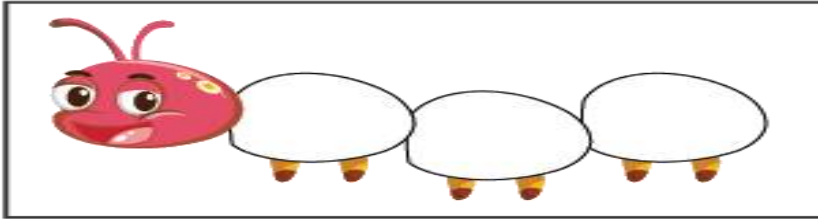
Q.6. Which of the following flowers are three in number?



Q.7. How many monkeys are there in the picture?




Q.8. Color the caterpillar using three colors.



Q.9. How many hands are there in an alarm clock?



Q.10. How many bees are visible to you in the below picture?



Number of bees = _____

Q.11. Which shape shows number 3?



Q.12. How many slices of pizza are visible in the picture below.



Q.13. Are there three stars in the image?



Q.14. Tick (✓) which mug has three brushes.



Q.15. Tick (✓) the bunch of three bananas.



**When you learn math
in an interesting way,
you never forget.**



25 Million

Math classes &
counting

100K+

Students learning
Math the right way

20+ Countries

Present across USA, UK,
Singapore, India, UAE & more.

Why choose Cuemath?

"Cuemath is a valuable addition to our family. We love solving puzzle cards. My daughter is now visualizing maths and solving problems effectively!"

- Gary Schwartz

"Cuemath is great because my son has a one-on-one interaction with the teacher. The instructor has developed his confidence and I can see progress in his work. One-on-one interaction is perfect and a great bonus."

- Kirk Riley

"I appreciate the effort that miss Nitya puts in to help my daughter understand the best methods and to explain why she got a problem incorrect. She is extremely patient and generous with Miranda."


- Barbara Cabrera

Get the Cuemath advantage

Book a FREE trial class

SOLUTIONS

Complete solution/explanation



Q.1. Count the number of caps and write in the box below

Solution: There are 3 caps.



3

Q.2. Tick the flower pot with three flowers.

Solution: The pot with 3 flowers is.



Q.3. Circle the animal which is three in number.

Solution: There are 3 giraffes.



Q.4. What is the number of balloons Amy is holding?

Solution: Amy is holding 3 balloons.



3


Q.5. Which candle shows number 3?

Solution: Only the pink color candle is showing number 3.



Q.6. Which of the following flowers are three in number?

Solution: Yellow color flowers are 3 in number.



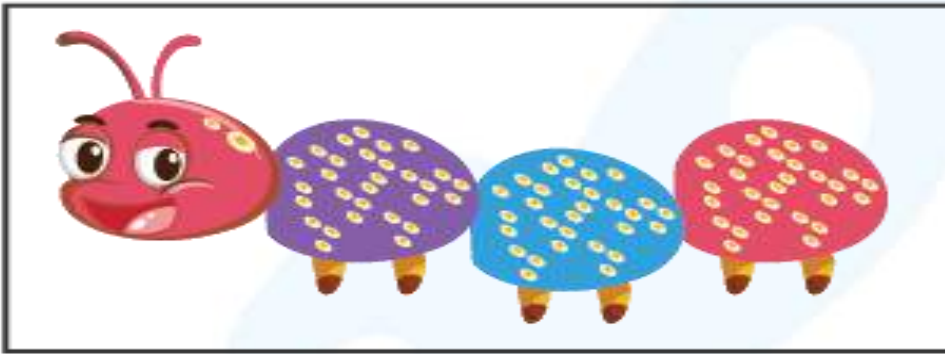
Q.7. How many monkeys are there in the picture?

Solution: There are 3 monkeys.



Q.8. Color the caterpillar using three colors.

Solution:



Q.9. How many hands are there in an alarm clock?

Solution: There are 3 hands in an alarm clock.

Q.10. How many bees are visible to you in the below picture?

Solution: Number of bees = 3

Q.11. Which shape shows number 3?

Solution: The heart shape is showing number 3.



Q.12. How many slices of pizza are visible in the picture below.

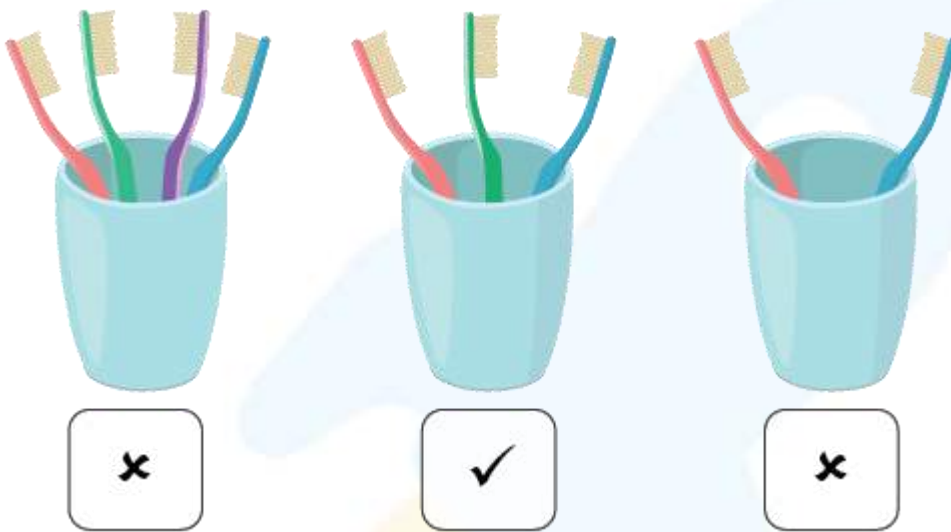
Solution: There are 3 slices of pizza.

Q.13. Are there three stars in the image?

Solution: No. There are 2 stars.

Q.14. Tick (✓) which mug has three brushes.

Solution:



Q.15. Tick (✓) the bunch of three bananas.

Solution:

