

Get better at Math.
Get better at
everything.



Come experience the Cuemath methodology and ensure your child stays ahead at math this summer.



**Adaptive
Platform**



**Interactive Visual
Simulations**



**Personalized
Attention**

For Grades 1 - 10



LIVE online classes
by trained and
certified experts.

Get the Cuemath advantage

Book a FREE trial class

Number 3 Worksheets

Q.1. Can you spell the number shown in the image?

3

Q.2. Match the number with its correct spelling.

3

T H R E E

H R T E E

E E T H R

Q.3. Look at the picture and fill the blank space.



There are ____ pencils.

Q.4. Count the number of leaves of a plant.



Q.5. Trace and color the Easter number.



Q.6. How many cups are there in the box?



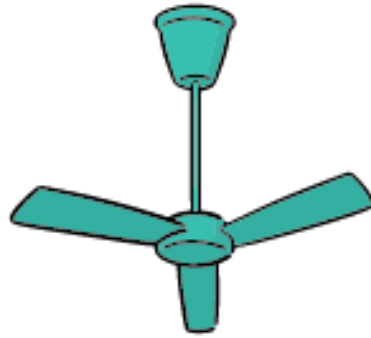
Q.7. Match the number with its dice.




Q.8. Count the fingers and match with the correct number.



Q.9. How many blades are there in the fan.






Q.10. How many fishes do you see? Write the number in the Apple.



Q.11. Color the word THREE using three different colors.

T H R E E

Q.12. Count the objects and circle the number.

	3 2
	1 3
	1 3

Q.13. Count the boxes.



Q.14. How many lines are there in the given shape.



Q.15. Count the candies in the figure.



**When you learn math
in an interesting way,
you never forget.**



25 Million

Math classes &
counting

100K+

Students learning
Math the right way

20+ Countries

Present across USA, UK,
Singapore, India, UAE & more.

Why choose Cuemath?

"Cuemath is a valuable addition to our family. We love solving puzzle cards. My daughter is now visualizing maths and solving problems effectively!"

- Gary Schwartz

"Cuemath is great because my son has a one-on-one interaction with the teacher. The instructor has developed his confidence and I can see progress in his work. One-on-one interaction is perfect and a great bonus."


- Kirk Riley

"I appreciate the effort that miss Nitya puts in to help my daughter understand the best methods and to explain why she got a problem incorrect. She is extremely patient and generous with Miranda."

- Barbara Cabrera

Get the Cuemath advantage

Book a FREE trial class



SOLUTIONS

Complete solution/explanation

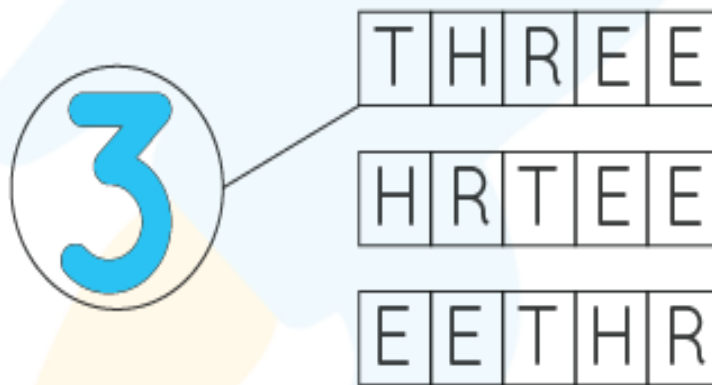
Q.1. Can you spell the number shown in the image?

3

Solution: Three

Q.2. Match the number with its correct spelling.

Solution:



T	H	R	E	E
H	R	T	E	E
E	E	T	H	R

Q.3. Look at the picture and fill the blank space.



Solution: There are t h r e e pencils.

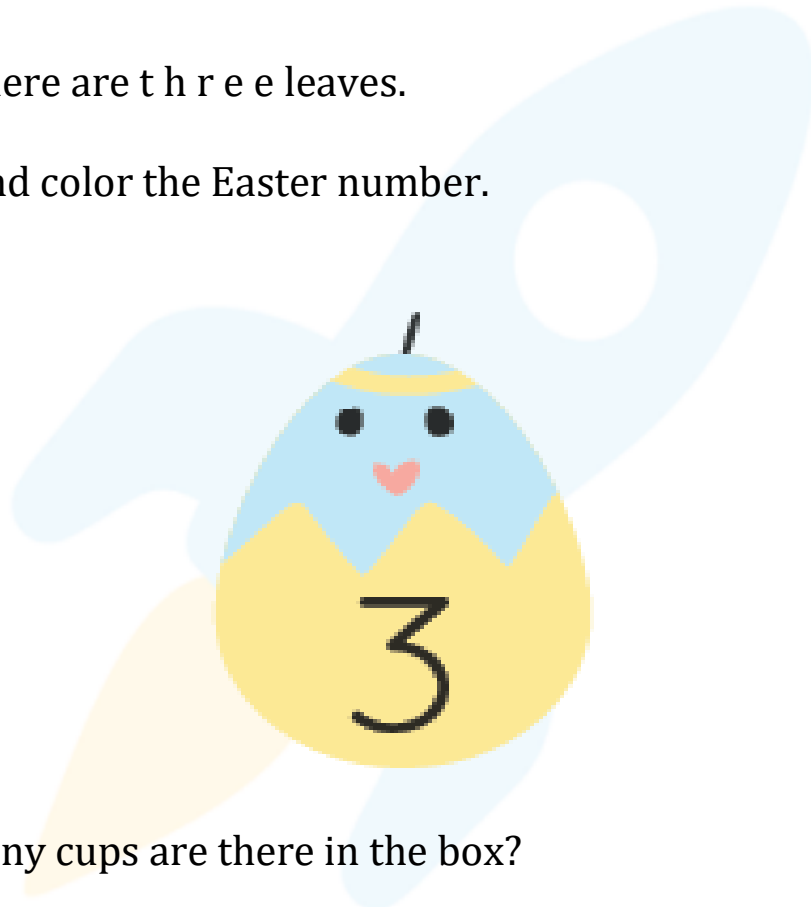
Q.4. Count the number of leaves of a plant.



Solution: There are t h r e e leaves.

Q.5. Trace and color the Easter number.

Solution:



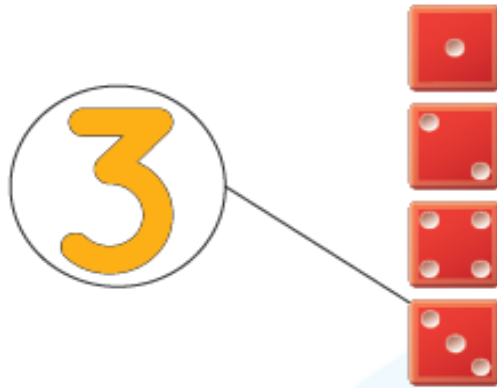
Q.6. How many cups are there in the box?



Solution: There are t h r e e cups.


Q.7. Match the number with its dice

Solution:

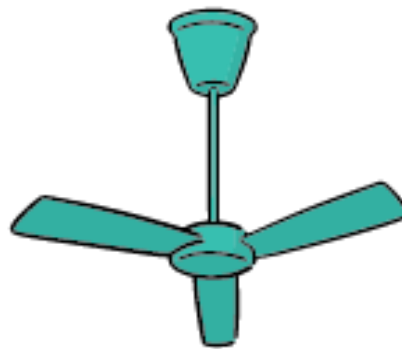


Q.8. Count the fingers and match with the correct number.

Solution: Three fingers.

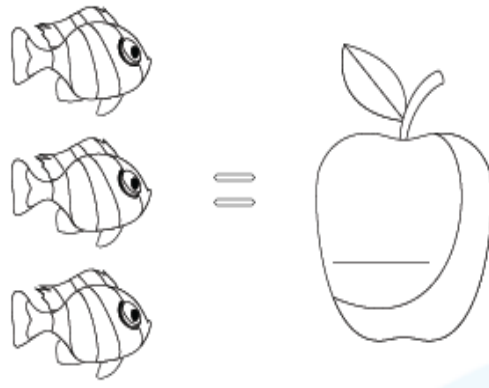


Q.9. How many blades are there in the fan.



Solution: There are t h r e e blades.

Q.10. How many fishes do you see? Write the number in the Apple.






Solution: There are 3 fish.

Q.11. Color the word THREE using three different colors.

Solution:

THREE

Q.12. Count the objects and circle the number.

	3 2
	1 3
	1 3

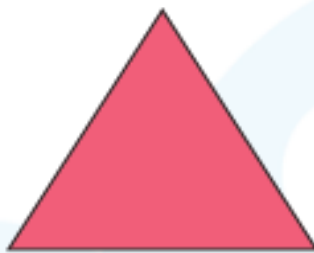
Solution: There are 3 strawberries.
There are 3 apples.
There are 3 oranges.

Q.13. Count the boxes.




Solution: There are 3 boxes.

Q.14. How many lines are there in the given shape.



Solution: There are 3 lines.

Q.15. Count the candies in the figure.



Solution: There are 3 candies.