

Get better at Math.
Get better at
everything.



Come experience the Cuemath methodology and ensure your child stays ahead at math this summer.



**Adaptive
Platform**



**Interactive Visual
Simulations**



**Personalized
Attention**

For Grades 1 - 10




LIVE online classes
by trained and
certified experts.

Get the Cuemath advantage

Book a FREE trial class

Multiplication by 5 Worksheets

1) Find the number of items.



___ Number of groups x ___ Items per group = ___
Number of items.

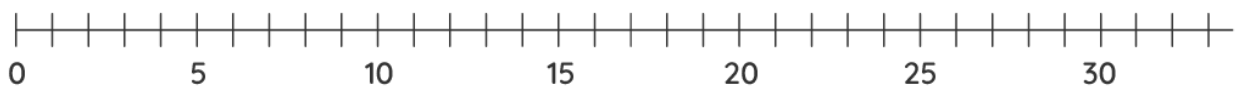
2) Fill in the boxes.

4 groups of 5 is same as _____ groups of _____


3) Match.

	Column A		Column B
1)	$5 + 5$	a)	4×5
2)	$5 + 5 + 5 + 5$	b)	5×5
3)	$5 + 5 + 5$	c)	2×5
4)	$5 + 5 + 5 + 5 + 5$	d)	3×5

4) Find the product of 6×5 using the number line.



5) Find the number of dots in the array.



_____ Number of rows x Number of columns = _____
Number of dots in the array.

6) Fill in the missing numbers.

a) $5 \times \underline{\quad} = 20$

b) $5 \times 7 = \underline{\quad}$

7) Multiply the following numbers.

a) 25

$\times 5$

b) 231

$\times 5$

8) Multiply the following numbers.

a) 4322

$\times 5$

b) 18764

$\times 5$

9) A farmer packs 5 apples in each box. He packed 1200 boxes in all. How many apples did he pack?



10) Write two multiplication facts for the following numbers.
10, 5, 50.

**When you learn math
in an interesting way,
you never forget.**



25 Million

Math classes &
counting

100K+

Students learning
Math the right way

20+ Countries

Present across USA, UK,
Singapore, India, UAE & more.

Why choose Cuemath?

"Cuemath is a valuable addition to our family. We love solving puzzle cards. My daughter is now visualizing maths and solving problems effectively!"

- Gary Schwartz

"Cuemath is great because my son has a one-on-one interaction with the teacher. The instructor has developed his confidence and I can see progress in his work. One-on-one interaction is perfect and a great bonus."

- Kirk Riley

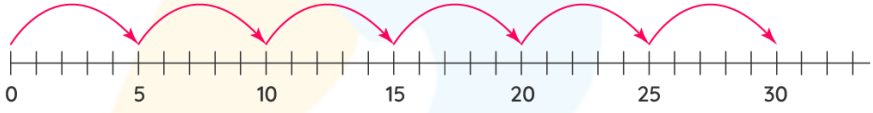
"I appreciate the effort that miss Nitya puts in to help my daughter understand the best methods and to explain why she got a problem incorrect. She is extremely patient and generous with Miranda."

- Barbara Cabrera

Get the Cuemath advantage

Book a FREE trial class

**ANSWERS**

1)	3, 5, 15
2)	5 groups of 4
3)	1. -> c) 2. -> a) 3. -> d) 4. -> b)
4)	$6 \times 5 = 30$ 
5)	3, 5, 15
6)	a) 4 b) 35

7)	a) 125 b) 1155
8)	a) 21610 b) 93810
9)	6000 apples
10)	$5 \times 10 = 50$ $10 \times 5 = 50$

FUN FACT

1. Multiplication is a process of repeatedly adding a number a specified number of times.
2. Multiplication is also referred to as 'Product'.
3. Product is given by the total number of groups and the number of items in the group.

