

Get better at Math.
Get better at
everything.



Come experience the Cuemath methodology and ensure your child stays ahead at math this summer.



**Adaptive
Platform**



**Interactive Visual
Simulations**



**Personalized
Attention**

For Grades 1 - 10




LIVE online classes
by trained and
certified experts.

Get the Cuemath advantage

Book a FREE trial class

Mixed Addition and Subtraction Worksheets

1) Add by counting from the picture shown below.



2) How do you make 12? Tick the correct option.

7 + 5	6 + 4	5 + 9
<input type="checkbox"/>	<input type="checkbox"/>	<input type="checkbox"/>


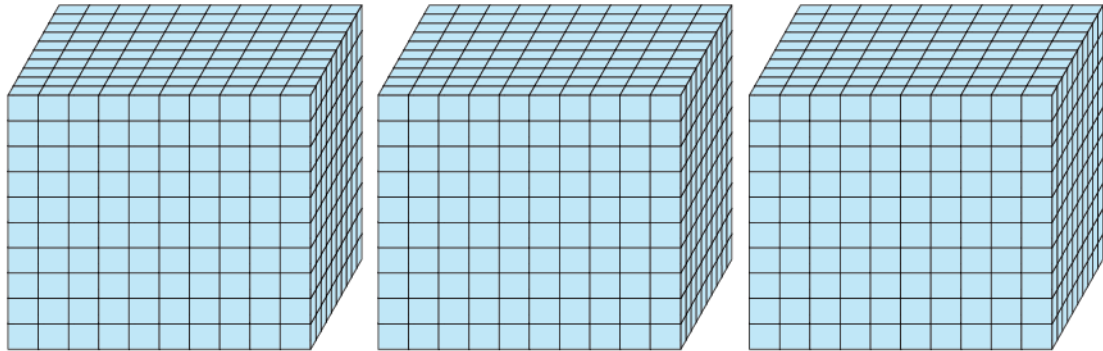
3) Write an addition and subtraction statement for the following numbers.

70, 50, 20


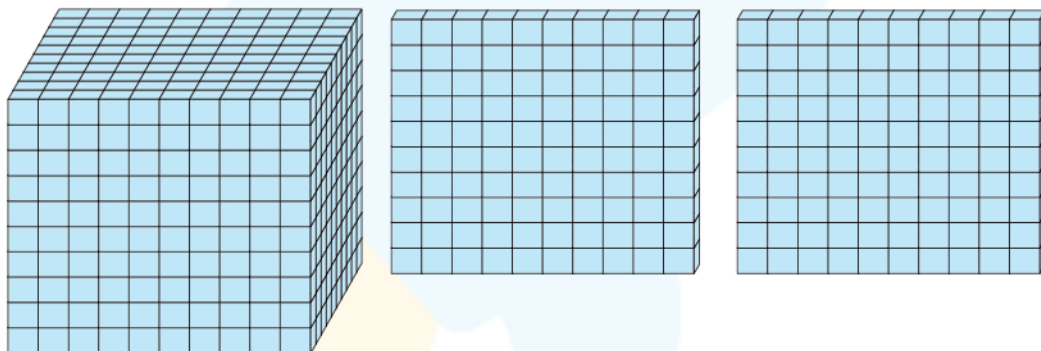
Addition statement:

Subtraction statement:

4) Add the numbers that are represented using the base 10 blocks.



+



a) 4580

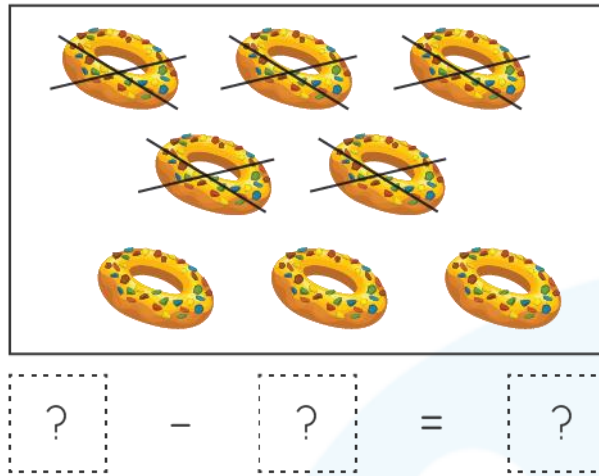
b) 4583

c) 4586

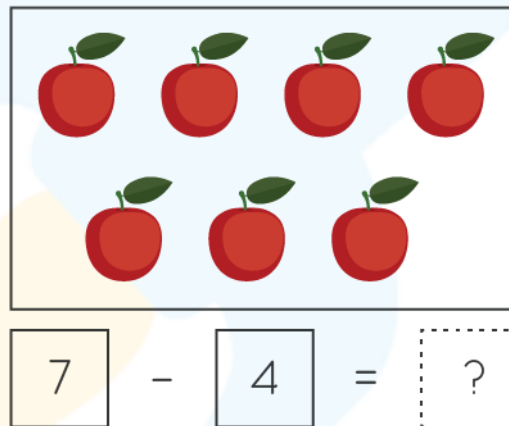
d) 4573

5) Tim bought 1998 blue floor tiles and 8342 white tiles for his house. How many tiles did he buy in all?

6) Write the subtraction from the picture shown.



7) Cross out the objects and write the difference.



8) Fill in the boxes.

a. $9813 - \square = 2537$

b. $\square - 3214 = 2888$

9) Find the missing digit.

$$\begin{array}{r} 4542 \\ - 30\boxed{}4 \\ \hline 1528 \\ \hline \end{array}$$

10) Stephen had 3457 marbles in a box. He gave away 456 marbles to his friend. How many marbles were left with him?

**When you learn math
in an interesting way,
you never forget.**



25 Million

Math classes &
counting

100K+

Students learning
Math the right way

20+ Countries

Present across USA, UK,
Singapore, India, UAE & more.

Why choose Cuemath?

"Cuemath is a valuable addition to our family. We love solving puzzle cards. My daughter is now visualizing maths and solving problems effectively!"

- Gary Schwartz

"Cuemath is great because my son has a one-on-one interaction with the teacher. The instructor has developed his confidence and I can see progress in his work. One-on-one interaction is perfect and a great bonus."

- Kirk Riley

"I appreciate the effort that miss Nitya puts in to help my daughter understand the best methods and to explain why she got a problem incorrect. She is extremely patient and generous with Miranda."


- Barbara Cabrera

Get the Cuemath advantage

Book a FREE trial class

ANSWERS

1)	$3 + 4 = 7$
2)	$7 + 5$
3)	Addition statement : $20 + 50 = 70$ Subtraction statement: $70 - 20 = 50$
4)	4583
5)	10340 tiles
6)	$8 - 5 = 3$

7)	 $\boxed{7} - \boxed{4} = \boxed{3}$
8)	a. 7276 b. 6102
9)	Missing digit is 1
10)	3001

FUN FACT

- 1) Adding 0 to a number gives the same number as a result.
- 2) Subtracting 0 with a number gives the same number as the result
- 3) Adding one to the number gives the 'successor' of the number and subtracting 1 with a number gives the 'predecessor' of the number.

