

**Get better at Math.
Get better at
everything.**



Come experience the Cuemath methodology and ensure your child stays ahead at math this summer.



**Adaptive
Platform**



**Interactive Visual
Simulations**



**Personalized
Attention**

For Grades 1 - 10




LIVE online classes
by trained and
certified experts.

Get the Cuemath advantage


Book a FREE trial class

Mixed Addition and Subtraction Worksheets

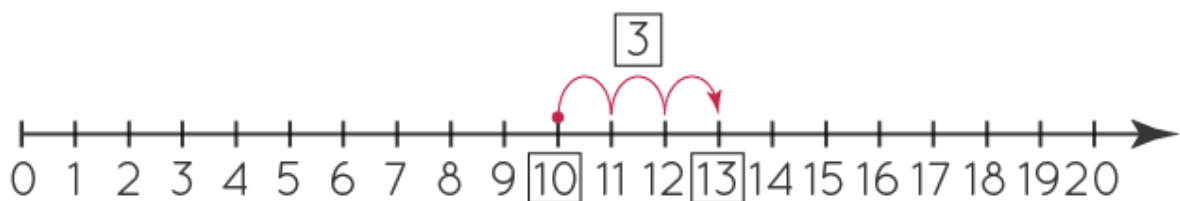
1) Add by counting from the picture shown below.



2) Write the addition statement by looking at the groups marked in the picture.

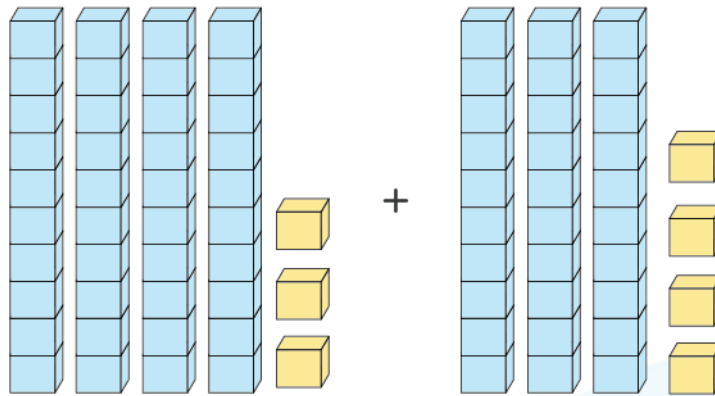


3) Write an addition statement using the number line shown below.



Addition statement:

4) Add the numbers that are represented using the base 10 blocks.



a) 57

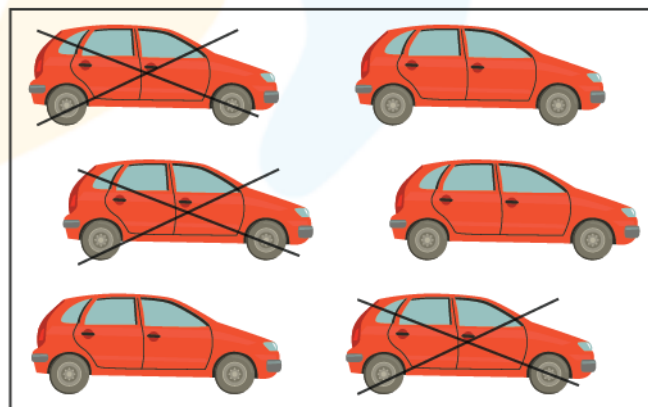
b) 67

c) 77

d) 87

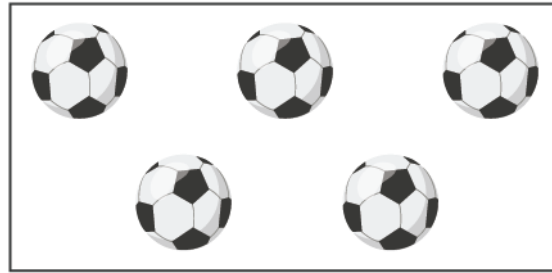
5) In a warehouse there are 2250 bags of rice and 7850 bags of sugar. How many bags are there altogether in the warehouse?

6) Write the subtraction from the picture shown.



$$\boxed{?} - \boxed{?} = \boxed{?}$$

7) Cross out the objects and write the difference.



$$\boxed{5} - \boxed{4} = \boxed{}$$

8) Tick the correct option.

a) $350 - 50 + 200$

300 400 500

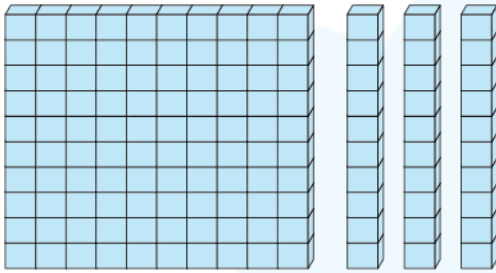
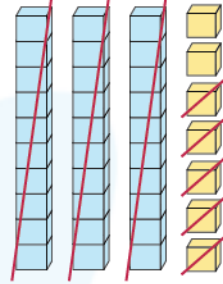
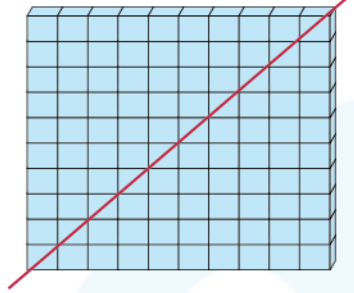
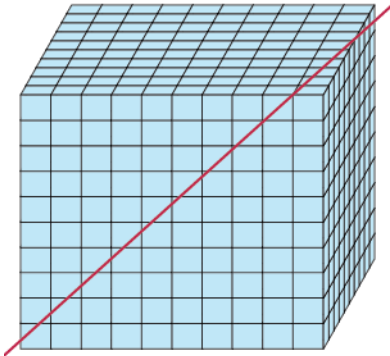
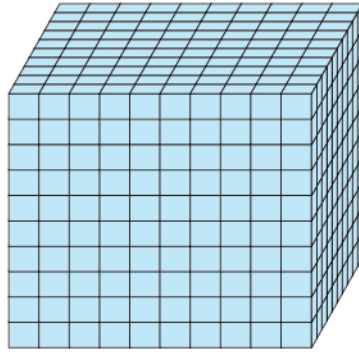
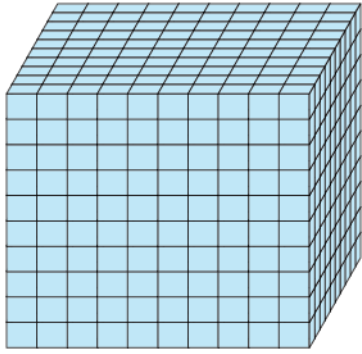
b) $900 - 400 - 100$

400 500 800

9) Subtract the following.

$$\begin{array}{r} 4567 \\ -1625 \\ \hline \\ \hline \end{array}$$

10) Write the subtraction statement shown by the base 10 blocks.



3 2 6 7

-

**When you learn math
in an interesting way,
you never forget.**



25 Million

Math classes &
counting

100K+

Students learning
Math the right way

20+ Countries

Present across USA, UK,
Singapore, India, UAE & more.

Why choose Cuemath?

"Cuemath is a valuable addition to our family. We love solving puzzle cards. My daughter is now visualizing maths and solving problems effectively!"

- Gary Schwartz

"Cuemath is great because my son has a one-on-one interaction with the teacher. The instructor has developed his confidence and I can see progress in his work. One-on-one interaction is perfect and a great bonus."

- Kirk Riley

"I appreciate the effort that miss Nitya puts in to help my daughter understand the best methods and to explain why she got a problem incorrect. She is extremely patient and generous with Miranda."

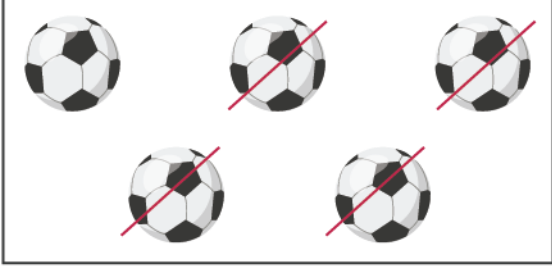
- Barbara Cabrera

Get the Cuemath advantage

Book a FREE trial class

**ANSWERS**

1)	$4 + 2 = 6$
2)	$2 + 3 = 5$
3)	$10 + 3 = 13$
4)	77
5)	10100
6)	$6 - 3 = 3$

7)	 $\boxed{5} - \boxed{4} = \boxed{1}$
8)	a) 500 b) 400
9)	2942
10)	$3267 - 1135 = 2132$

FUN FACT

- 1) Combining two or more numbers is called addition.
- 2) The numbers that are involved in addition is called 'addend'.
- 3) Subtraction means taking away or removing some objects from a group.

