

Get better at Math.
Get better at
everything.



Come experience the Cuemath methodology and ensure your child stays ahead at math this summer.



**Adaptive
Platform**



**Interactive Visual
Simulations**



**Personalized
Attention**

For Grades 1 - 10



LIVE online classes
by trained and
certified experts.

Get the Cuemath advantage

Book a FREE trial class

Missing Number Worksheets 1st Grade

Q.1) Find the missing numbers.

a.) 45

+3_

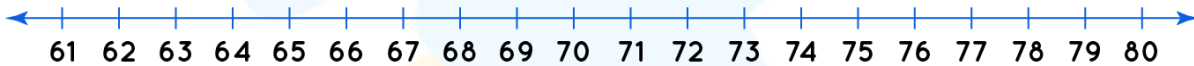
78

b.) 24

+1_

39

Q.2) Fill in the missing numbers using the number line.



a.) $61 + \underline{\quad} = 70$

b.) $60 + \underline{\quad} = 65$

Q.3) Observe the sequence and fill in the next three numbers.

30, 35, 40, 45, , , .

Q.4) Can you find the number pattern and fill the missing numbers?

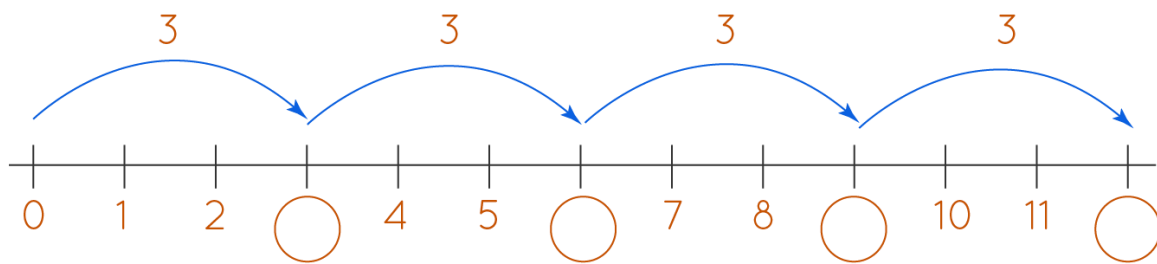
120	150	<u> </u> <u> </u>	210	<u> </u> <u> </u>	<u> </u> <u> </u>	300
-----	-----	---------------------	-----	---------------------	---------------------	-----

Q.5) Skip count by 5 and fill in the blank coaches of the train.



Q.6) Can you observe the pattern and fill in the blanks

the number line?



Q.7) Can you write the missing numbers in the track?

4	8	__	16	__	24	28
---	---	----	----	----	----	----

Q.8) Fill in the missing number: $30 + 7 = 7 + \underline{\quad}$

Q.9) Select the correct option for: $25 \underline{\quad} = 30$

- a.) -5
- b.) +5

Q.10) Find the missing number.

$$50 - \underline{\quad} = 25$$

**When you learn math
in an interesting way,
you never forget.**



25 Million

Math classes &
counting

100K+

Students learning
Math the right way

20+ Countries

Present across USA, UK,
Singapore, India, UAE & more.

Why choose Cuemath?

"Cuemath is a valuable addition to our family. We love solving puzzle cards. My daughter is now visualizing maths and solving problems effectively!"

- Gary Schwartz

"Cuemath is great because my son has a one-on-one interaction with the teacher. The instructor has developed his confidence and I can see progress in his work. One-on-one interaction is perfect and a great bonus."


- Kirk Riley

"I appreciate the effort that miss Nitya puts in to help my daughter understand the best methods and to explain why she got a problem incorrect. She is extremely patient and generous with Miranda."


- Barbara Cabrera

Get the Cuemath advantage

Book a FREE trial class



ANSWERS

Q.1)	a.) $3\bar{3}$ b.) $1\bar{5}$
Q.2)	a.) 9 b.) 5
Q.3)	50, 55, 60
Q.4)	180, 240, 270
Q.5)	
Q.6)	3, 6, 9, 12

Q.7)	12, 20
Q.8)	30
Q.9)	b.) $25 + \underline{5} = 30$
Q.10)	25

FUN FACT

1. Terms such as "Minus", "Less", "Difference", "Decrease", "Take Away" and "Deduct" mean that you usually need to subtract one number from the other.
2. Do you know that when we subtract 0 from any number, the difference is the number itself?
3. When we subtract 1 from a number, the difference is the predecessor of the given number.

