

Get better at Math.  
Get better at  
everything.



Come experience the Cuemath methodology and ensure your child stays ahead at math this summer.



**Adaptive  
Platform**



**Interactive Visual  
Simulations**



**Personalized  
Attention**

For Grades 1 - 10



LIVE online classes  
by trained and  
certified experts.

Get the Cuemath advantage

**Book a FREE trial class**

## Mental Maths for Grade 1 Worksheet

Q.1. Complete the series.

2, 4, 6, 8, \_

- a. 10
- b. 12

Q.2. Write the number name for 102.

Q.3. Draw the hands of the clock to show 9 o'clock.



Q.4. There are \_\_\_\_\_ candles on Ron's cake.



- a. eight
- b. seven

Q.5. Which is heavier?

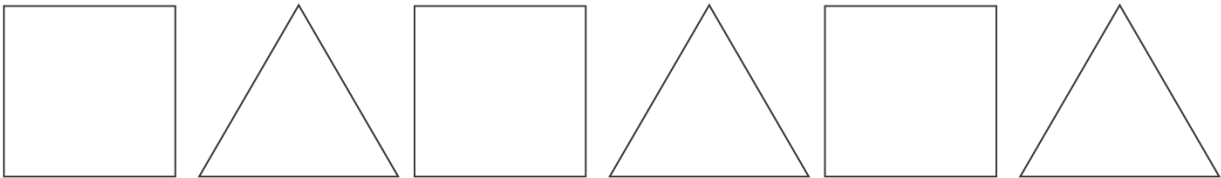
- a. An empty bucket
- b. A full bucket

Q.6. Write the following numbers in ascending order.  
25, 19, 27, 4, 32

Q.7. If I have 8 oranges. My mother gave me 2 more. How many oranges are there with me?

Q.8. Which month comes after October?

Q.9. Draw the next shape in sequence.



Q.10. From 9 subtract 2.

**When you learn math  
in an interesting way,  
you never forget.**



**25 Million**

Math classes &  
counting

**100K+**

Students learning  
Math the right way

**20+ Countries**

Present across USA, UK,  
Singapore, India, UAE & more.

## Why choose Cuemath?

"Cuemath is a valuable addition to our family. We love solving puzzle cards. My daughter is now visualizing maths and solving problems effectively!"

- Gary Schwartz

"Cuemath is great because my son has a one-on-one interaction with the teacher. The instructor has developed his confidence and I can see progress in his work. One-on-one interaction is perfect and a great bonus."

- Kirk Riley

"I appreciate the effort that miss Nitya puts in to help my daughter understand the best methods and to explain why she got a problem incorrect. She is extremely patient and generous with Miranda."


- Barbara Cabrera

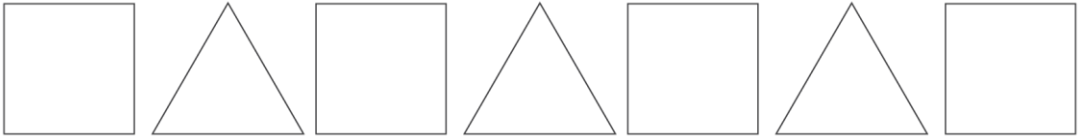
Get the Cuemath advantage

**Book a FREE trial class**



ANSWERS

1)	b.
2)	One hundred and two
3)	
4)	a.
5)	b.
6)	4, 19, 25, 27, 32

7)	10
8)	November
9)	
10)	$9 - 2 = 7$

## FUN FACT

1. The best way to understand pattern in any question showing different objects is to assign a letter A, B, C or D to every different looking object and same letter for the same object.
2. More than indicates  $>$ . For example, 10 is more than 4 as  $10 > 4$
3. Less than indicates  $<$ . For example, 6 is less than 12 as  $6 < 12$ .

