

Get better at Math.
Get better at
everything.



Come experience the Cuemath methodology and ensure your child stays ahead at math this summer.



**Adaptive
Platform**



**Interactive Visual
Simulations**



**Personalized
Attention**

For Grades 1 - 10



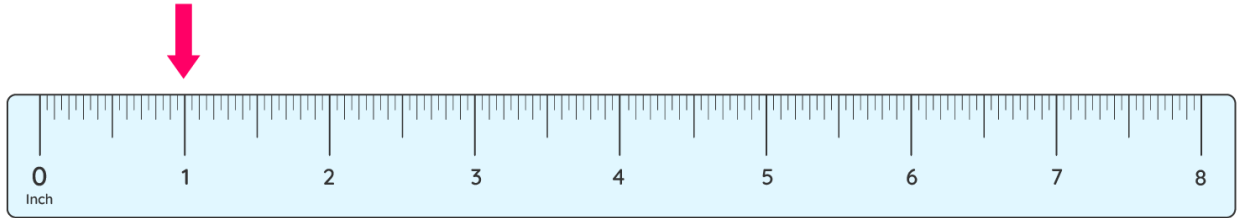
LIVE online classes
by trained and
certified experts.

Get the Cuemath advantage

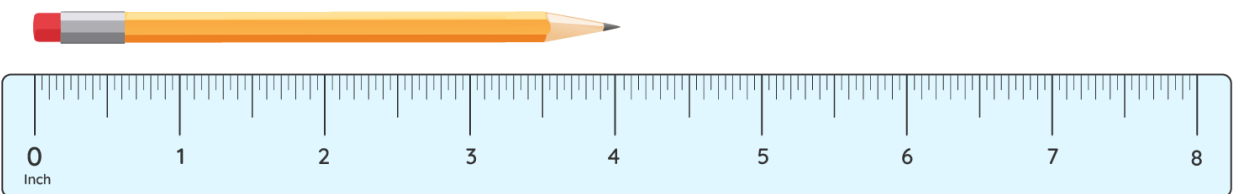
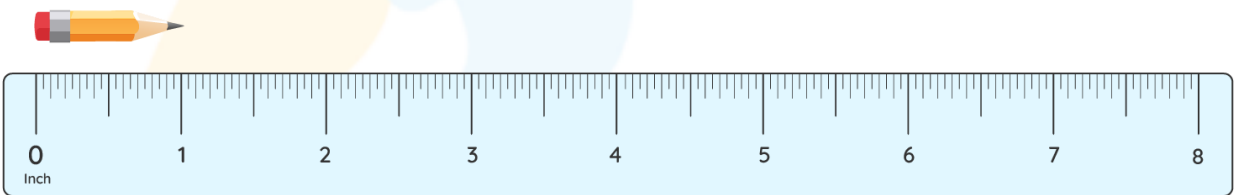
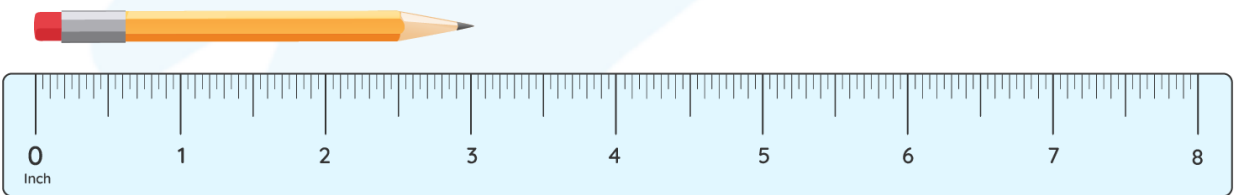
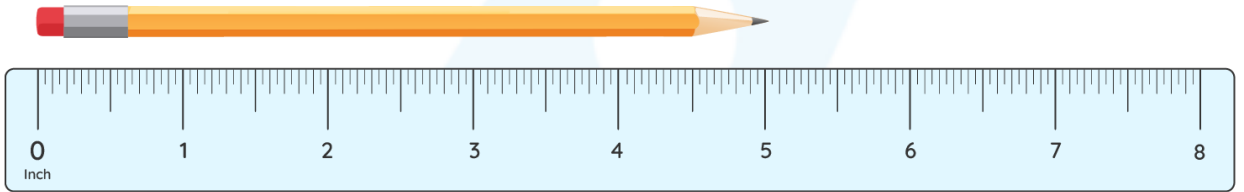
Book a FREE trial class

Measuring In Inches Worksheets

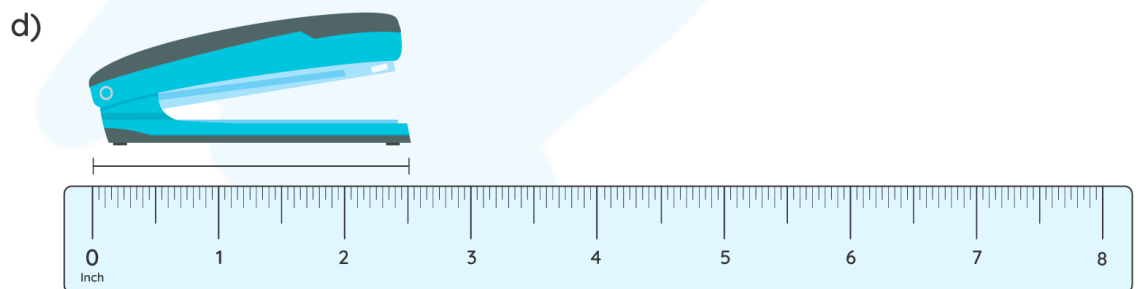
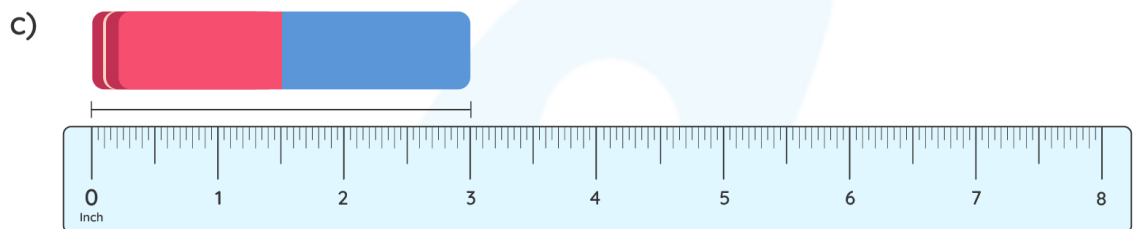
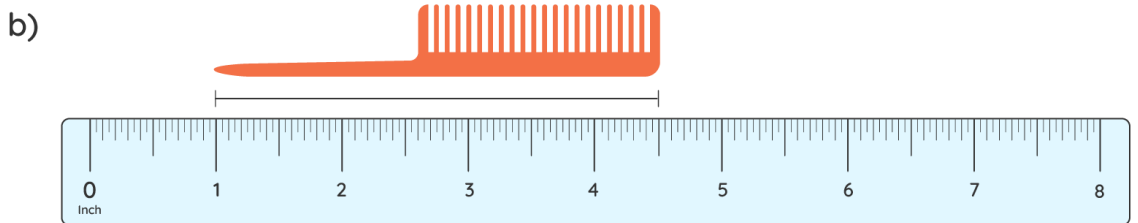
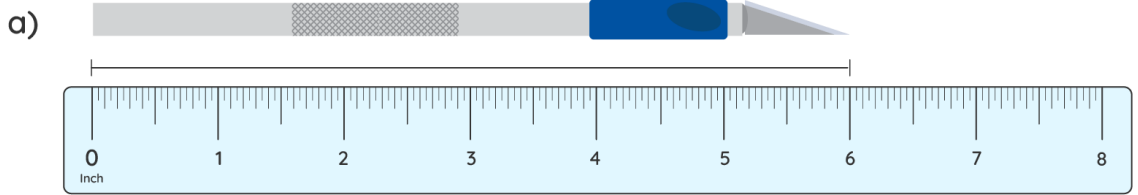
1) Where does the indicator point on the inch scale?



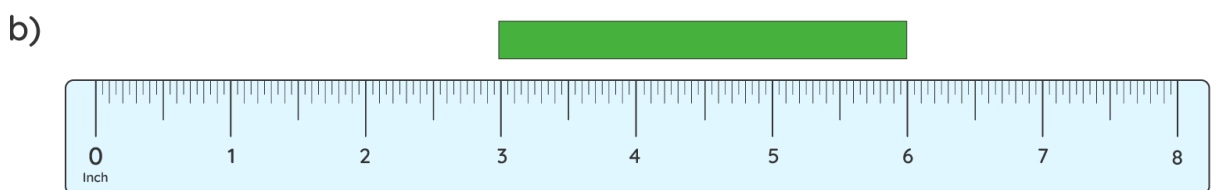
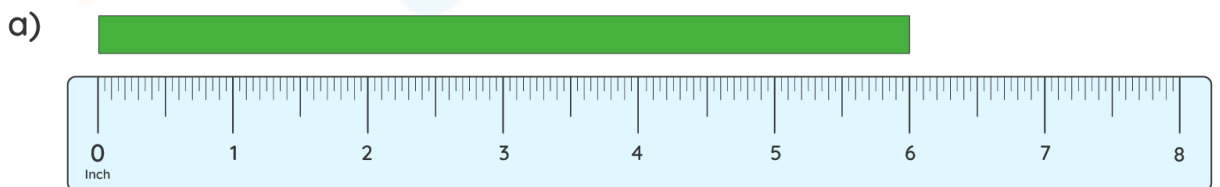
2) Find the length of each of these pencils.



3) Find the length of the objects given below.

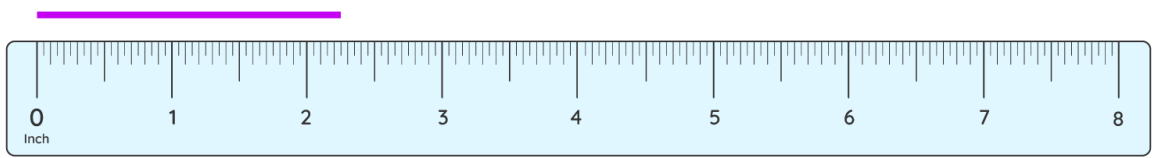


4) What is the length of the strips?

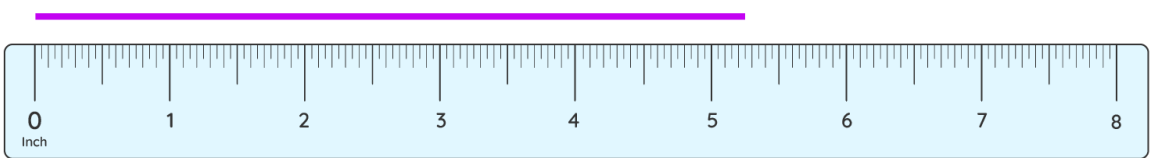


5) Find the length of the line to the quarter on the inch scale.

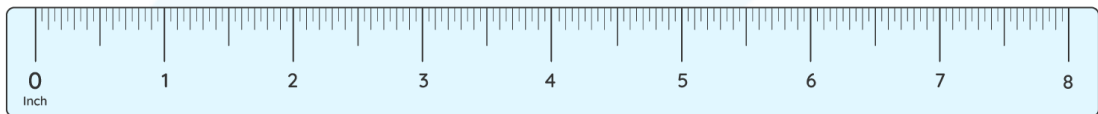
a)



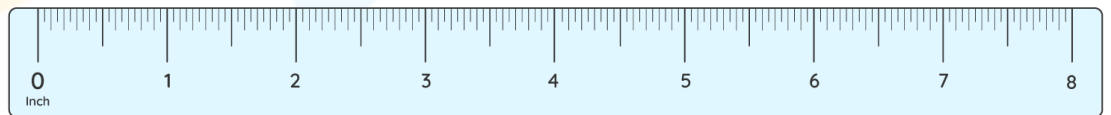

b)




6) Compare straw A and Straw B.



7) Compare pencils A, B and C.



8) Draw a line that measures 4.5 inches long.



9) Draw a square of side that measures 2 inches.

10) If the length of the pencil is 2.4 inches and that of a crayon is 1.75 inches, how long will they be if placed together in a line?

**When you learn math
in an interesting way,
you never forget.**



25 Million

Math classes &
counting

100K+

Students learning
Math the right way

20+ Countries

Present across USA, UK,
Singapore, India, UAE & more.

Why choose Cuemath?

"Cuemath is a valuable addition to our family. We love solving puzzle cards. My daughter is now visualizing maths and solving problems effectively!"

- Gary Schwartz

"Cuemath is great because my son has a one-on-one interaction with the teacher. The instructor has developed his confidence and I can see progress in his work. One-on-one interaction is perfect and a great bonus."


- Kirk Riley

"I appreciate the effort that miss Nitya puts in to help my daughter understand the best methods and to explain why she got a problem incorrect. She is extremely patient and generous with Miranda."

- Barbara Cabrera

Get the Cuemath advantage

Book a FREE trial class

**ANSWERS**

1)	1 inch
2)	a) 5 inches b) 3 inches c) 1 inch d) 4 inches
3)	a) 6 inches b) $3\frac{1}{2}$ or 3.5 inches c) 3 inches d) $2\frac{1}{2}$ or 2.5 inches
4)	a) 6 inches b) 3 inches
5)	a) 2.4 inches b) 5.3 inches
6)	Straw A > Straw B 5.5 inches > 4 inches

7)	Pencil C < Pencil A < Pencil B 3 inches < 4 inches < 4.5 inches
8)	Draw using a ruler
9)	Draw the square using a ruler
10)	4.15 inches

FUN FACT

1. There are 12 inches in a foot.
2. Inch means one twelfth part.
3. One inch = 2.54 centimeters.

