

Get better at Math.  
Get better at  
everything.



Come experience the Cuemath methodology and ensure your child stays ahead at math this summer.



**Adaptive  
Platform**



**Interactive Visual  
Simulations**



**Personalized  
Attention**

For Grades 1 - 10



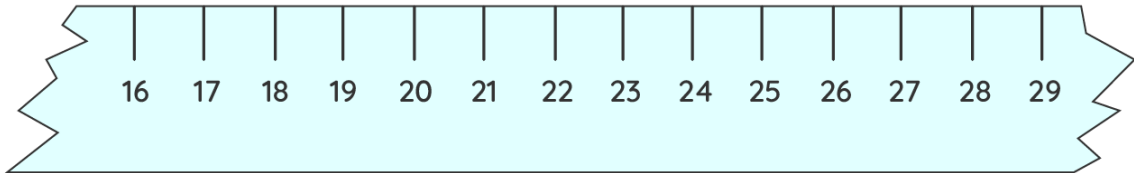
LIVE online classes  
by trained and  
certified experts.

Get the Cuemath advantage

**Book a FREE trial class**

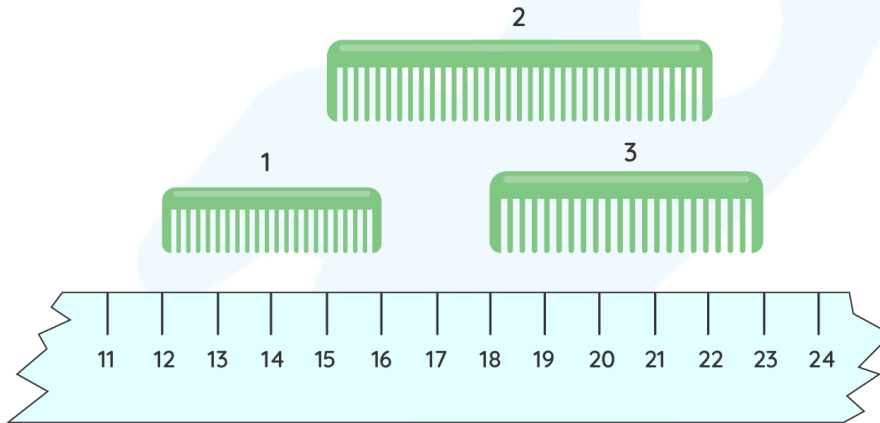
## 3<sup>rd</sup> Grade Measurement Worksheets

1) Write the length of the fork.



\_\_\_\_\_ units.

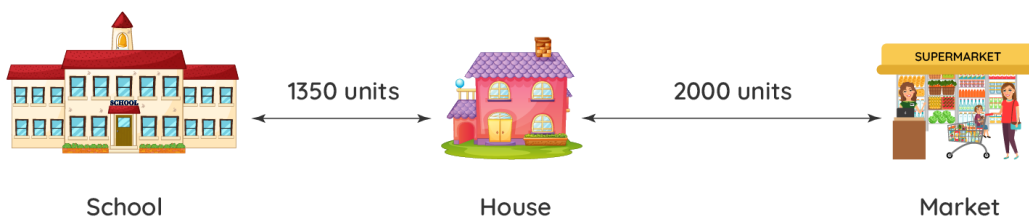
2) Look at the picture and answer the following questions.



a) Which comb is the longest?

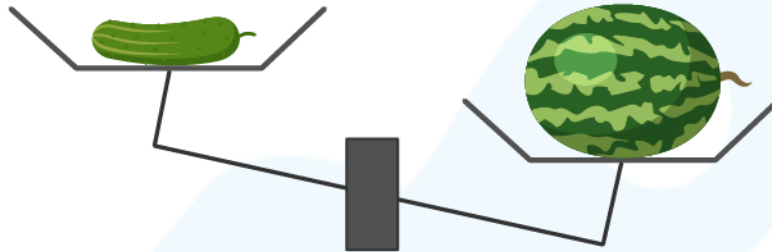
b) How much shorter is the comb 1 than comb 2? \_\_\_\_\_

3) Gavin's school is 1350 units away from his house. His house is 2000 units away from the market. What is the distance between Gavin's school and the market?



4) Stella bought 1500 units of cloth. Out of this, she used 250 units to stitch a shirt, 380 units to stitch a pant and 240 units to stitch a jacket. How much cloth was left unused?

5) Look at the weighing scale and answer the following question.



Weight of the cucumber \_\_\_\_\_ Weight of watermelon.

6) Compare and put the appropriate sign.



1000 units



750 units

7) Tick the correct estimate.

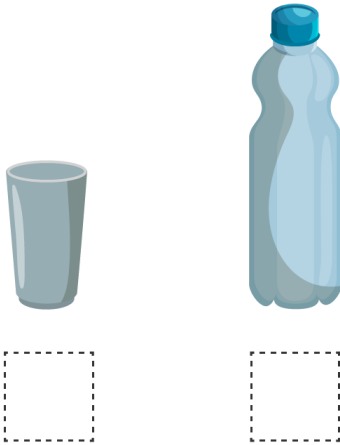
a) The weight of a table is about,

1) 5000 units      2) 50 units

b) The weight of an iron rod is about,

1) 4000 units      2) 4 units

8) Tick the container that can hold more liquid.



9) A restaurant made 2900 units of cold coffee. During the day 1000 units of coffee was sold and 350 units got spilled. How much coffee was left in the tank?

10) Mike filled 4700 units of hot water and 8760 units of cold water in a bucket. Find the total quantity of water in the bucket.

When you learn math  
in an interesting way,  
you never forget.



**25 Million**

Math classes &  
counting

**100K+**

Students learning  
Math the right way

**20+ Countries**

Present across USA, UK,  
Singapore, India, UAE & more.

## Why choose Cuemath?

"Cuemath is a valuable addition to our family. We love solving puzzle cards. My daughter is now visualizing maths and solving problems effectively!"

- Gary Schwartz

"Cuemath is great because my son has a one-on-one interaction with the teacher. The instructor has developed his confidence and I can see progress in his work. One-on-one interaction is perfect and a great bonus."

- Kirk Riley

"I appreciate the effort that miss Nitya puts in to help my daughter understand the best methods and to explain why she got a problem incorrect. She is extremely patient and generous with Miranda."



- Barbara Cabrera

Get the Cuemath advantage

**Book a FREE trial class**

**ANSWERS**

1)	7 units
2)	a) comb 2 b) 3 units
3)	3350 units
4)	630 units.
5)	< (Less than)
6)	> (Greater than)

7)	5000 units 4000 units
8)	<div style="display: flex; justify-content: space-around; align-items: center;"> <div style="text-align: center;">   <input data-bbox="408 801 504 898" type="checkbox"/> </div> <div style="text-align: center;">   <input checked="" data-bbox="660 801 758 898" type="checkbox"/> </div> </div>
9)	1550 units
10)	5460 units



## FUN FACT

1. Measuring helps us to determine which quantity is more or less.
2. A unit of measurement is a standard amount or a number.
3. To know the how far is one place from another we measure the distance between the two places.

