

Get better at Math.  
Get better at  
everything.



Come experience the Cuemath methodology and ensure your child stays ahead at math this summer.



**Adaptive  
Platform**



**Interactive Visual  
Simulations**



**Personalized  
Attention**

For Grades 1 - 10



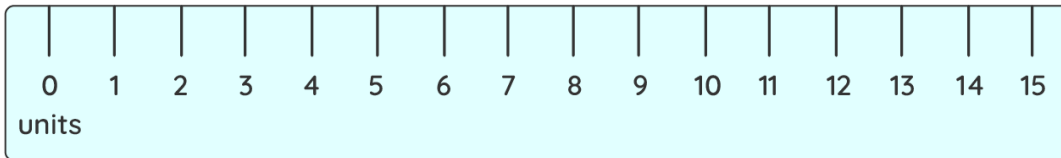
LIVE online classes  
by trained and  
certified experts.

Get the Cuemath advantage

**Book a FREE trial class**

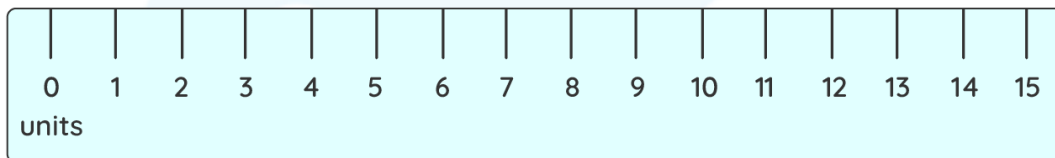
## 3<sup>rd</sup> Grade Measurement Worksheets

1) Write the length of the pencil.



\_\_\_\_\_ units.

2) Write the length of the eraser.



Length of eraser 1 : \_\_\_\_\_

Length of eraser 2 : \_\_\_\_\_

Which is longer? \_\_\_\_\_

3) Kevin is 125 units tall. His father is 156 units tall. How much taller is his father than Kevin?

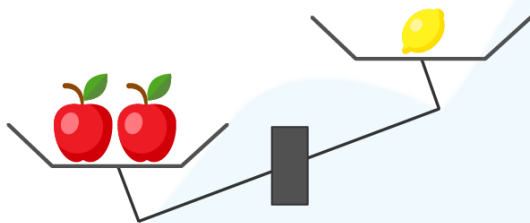


4) Perri bought three ribbons to decorate her house. The green ribbon is 450 units long and the blue ribbon is 250 units long and yellow ribbon is 120 units long.

a) Which ribbon is the longest?

b) What is the shortest ribbon's length?

5) Look at the weighing scale and answer the following questions.



Weight of the apples \_\_\_\_\_ Weight of lemon

6) Compare and put the appropriate sign.



7) Tick the correct estimate.

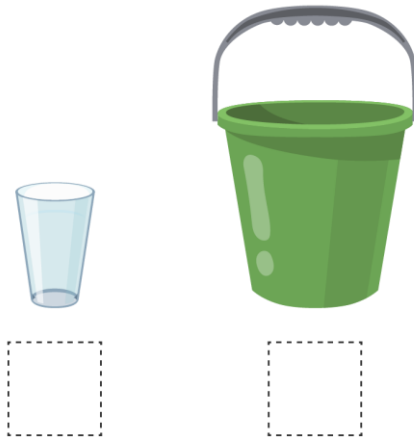
a) The weight of a pine apple is about

1) 500 units      2) 5 units

b) The weight of a school bag is

1) 1000 units      2) 10 units

8) Tick the container that can hold more liquid.



9) If the tea in the tea pot fills 4 cups exactly as shown in the picture, then



the capacity of the tea pot \_\_\_\_\_ the capacity of the cups.

10) A container has 4400 units of water. Nick pours 2750 units more. How much water is there in the container now?

When you learn math  
in an interesting way,  
you never forget.



**25 Million**

Math classes &  
counting

**100K+**

Students learning  
Math the right way

**20+ Countries**

Present across USA, UK,  
Singapore, India, UAE & more.

## Why choose Cuemath?

"Cuemath is a valuable addition to our family. We love solving puzzle cards. My daughter is now visualizing maths and solving problems effectively!"

- Gary Schwartz

"Cuemath is great because my son has a one-on-one interaction with the teacher. The instructor has developed his confidence and I can see progress in his work. One-on-one interaction is perfect and a great bonus."

- Kirk Riley

"I appreciate the effort that miss Nitya puts in to help my daughter understand the best methods and to explain why she got a problem incorrect. She is extremely patient and generous with Miranda."



- Barbara Cabrera

Get the Cuemath advantage

**Book a FREE trial class**

**ANSWERS**

|    |   |
|----|---|
| 1) | 7 units   |
| 2) | 4 units<br>4 units<br>Both erasers are of equal length. |
| 3) | 31 units  |
| 4) | a) Green ribbon<br>b) 120 units                         |
| 5) | > (Greater than)  |
| 6) | < (Less than)   |

|     |  |
|-----|--|
| 7)  | 500 units<br>1000 units  |
| 8)  | <div style="display: flex; justify-content: space-around; align-items: center;"> <div style="text-align: center;"> <br/> <input type="checkbox"/> </div> <div style="text-align: center;"> <br/> <input checked="" type="checkbox"/> </div> </div> |
| 9)  | = (Equal to)   |
| 10) | 7150 units   |

## FUN FACT

1. Measurement denotes calculating quantity, length, capacity.
2. A ruler is used to measure length of small objects.
3. Mass is measured in 'Kilogram'.

