

Get better at Math.
Get better at
everything.



Come experience the Cuemath methodology and ensure your child stays ahead at math this summer.



**Adaptive
Platform**



**Interactive Visual
Simulations**



**Personalized
Attention**

For Grades 1 - 10



LIVE online classes
by trained and
certified experts.


Get the Cuemath advantage

Book a FREE trial class


2nd Grade Measurement Worksheets

1) Look at the picture. Tick the heavier object.

a.



b.



2) Which is heavier?



Pineapple ☐



Strawberry ☐

3) Tick the glass that has more water.


a.



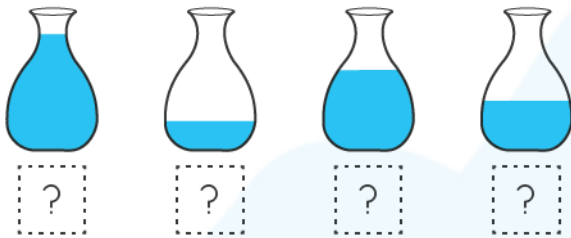
b.



4) Circle the bottle that has the most juice in it.



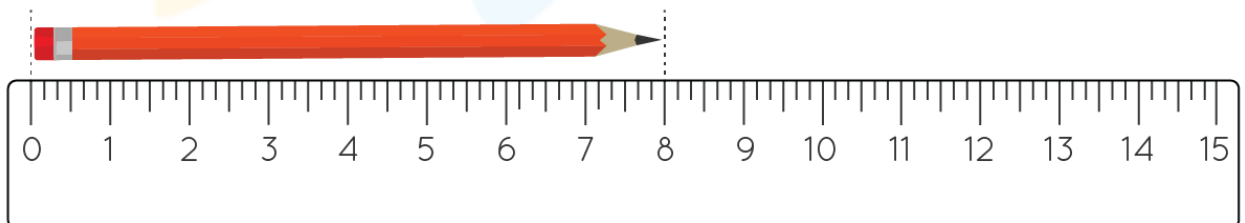
5) Number the vessels in order of increasing amount of water.



6) The length of the pencil is about _____ toffees.

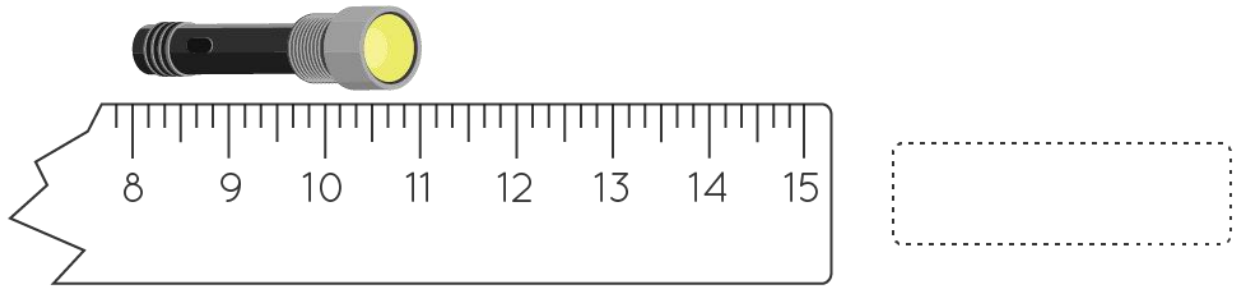


7) Write the length of pencil.

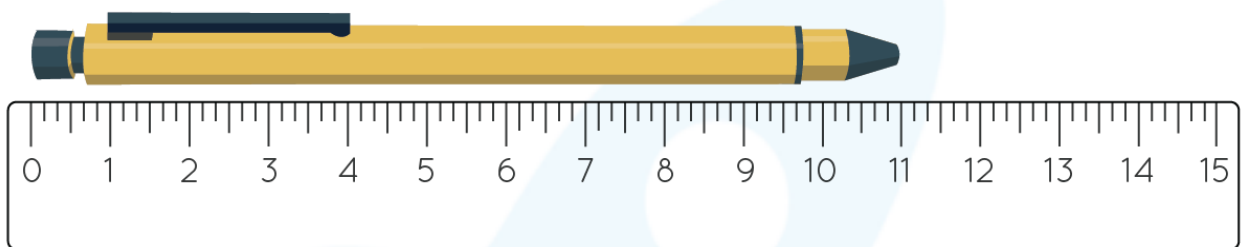


_____ Units

8) Write the length of torch.




9) The length of the unshaded part is _____ units.

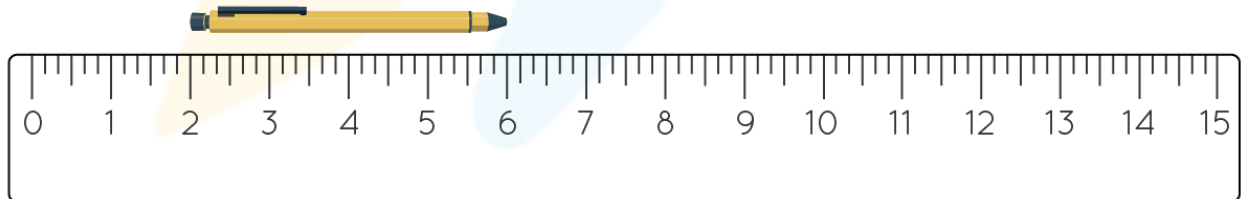


10) Compare the lengths using $>$, $<$, or $=$.

Pen A



Pen B



The length of Pen A



The length of Pen B

When you learn math
in an interesting way,
you never forget.



25 Million

Math classes &
counting

100K+

Students learning
Math the right way

20+ Countries

Present across USA, UK,
Singapore, India, UAE & more.

Why choose Cuemath?

"Cuemath is a valuable addition to our family. We love solving puzzle cards. My daughter is now visualizing maths and solving problems effectively!"

- Gary Schwartz

"Cuemath is great because my son has a one-on-one interaction with the teacher. The instructor has developed his confidence and I can see progress in his work. One-on-one interaction is perfect and a great bonus."

- Kirk Riley

"I appreciate the effort that miss Nitya puts in to help my daughter understand the best methods and to explain why she got a problem incorrect. She is extremely patient and generous with Miranda."


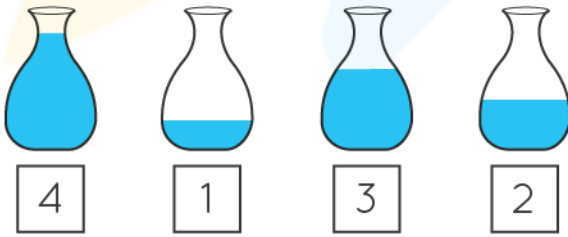
- Barbara Cabrera

Get the Cuemath advantage

Book a FREE trial class



ANSWERS

1)	a) Elephant b) Elephant
2)	Pineapple
3)	Glass a
4)	
5)	
6)	7 Toffees

7)	8 Units
8)	4 Units
9)	4 Units
10)	Pen A > Pen B

1. The word “measurement” is derived from the Greek word “metron,” which means a limited proportion.
2. Measurement refers to the comparison of an unknown quantity with a known quantity.
3. We can measure the length, weight, and capacity (volume) of any given object.

