

Get better at Math.
Get better at
everything.



Come experience the Cuemath methodology and ensure your child stays ahead at math this summer.



**Adaptive
Platform**



**Interactive Visual
Simulations**



**Personalized
Attention**

For Grades 1 - 10



LIVE online classes
by trained and
certified experts.

Get the Cuemath advantage

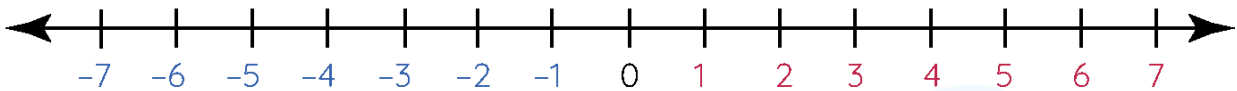
Book a FREE trial class

Integers On A Number Line Worksheets

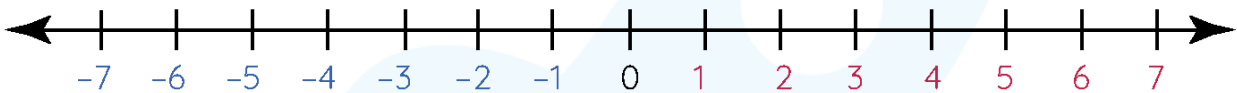
Questions

1. Use the number line to answer the following:

a) -5 more than 3



b) -6 more than -1



2. What is the sum of 325 and -750?


3. $-45 + (-13) + 25 =$ _____

4. $(-17) + (-15) + (-11) =$ _____

5. A football team plays the game for 4 days. It wins 6 yards on the first day, loses 3 yards on the second day, wins 4 yards on the third day, and loses 2 yards on the fourth day. What is their total score after 4 days?



6. When I am added to -25 , the result is -41 . Who am I?
7. Find the missing number in the following addition of integers.
 $-14 + \underline{\quad\quad\quad} + 19 = -3$.
8. It is -10°C at a place. The weather forecasting organization has announced that it will be 19°C warmer by tomorrow noon. Then what is the temperature at tomorrow's noon?



9. Fill in the following table by adding the integers.

+	16	-21
-13		
12		

10. What is the additive inverse of 17?

**When you learn math
in an interesting way,
you never forget.**



25 Million

Math classes &
counting

100K+

Students learning
Math the right way

20+ Countries

Present across USA, UK,
Singapore, India, UAE & more.

Why choose Cuemath?

"Cuemath is a valuable addition to our family. We love solving puzzle cards. My daughter is now visualizing maths and solving problems effectively!"

- Gary Schwartz

"Cuemath is great because my son has a one-on-one interaction with the teacher. The instructor has developed his confidence and I can see progress in his work. One-on-one interaction is perfect and a great bonus."

- Kirk Riley

"I appreciate the effort that miss Nitya puts in to help my daughter understand the best methods and to explain why she got a problem incorrect. She is extremely patient and generous with Miranda."

- Barbara Cabrera

Get the Cuemath advantage

Book a FREE trial class

ANSWERS

1	a)-2 b)-8									
2	-425									
3	-33									
4	-43									
5	5 yards									
6	-16									
7	-8									
8	9 centigrade									
9	<table border="1"><tbody><tr><td>+</td><td>16</td><td>-21</td></tr><tr><td>-13</td><td>3</td><td>-34</td></tr><tr><td>12</td><td>28</td><td>-9</td></tr></tbody></table>	+	16	-21	-13	3	-34	12	28	-9
+	16	-21								
-13	3	-34								
12	28	-9								
10	-17									