

Get better at Math.
Get better at
everything.



Come experience the Cuemath methodology and ensure your child stays ahead at math this summer.



**Adaptive
Platform**



**Interactive Visual
Simulations**



**Personalized
Attention**

For Grades 1 - 10



LIVE online classes
by trained and
certified experts.

Get the Cuemath advantage

Book a FREE trial class

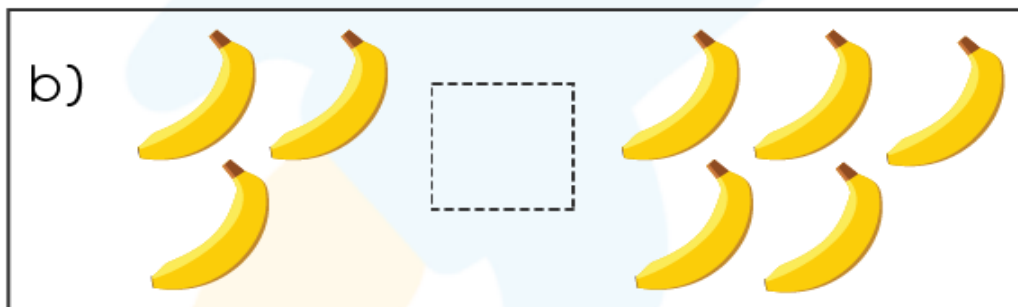
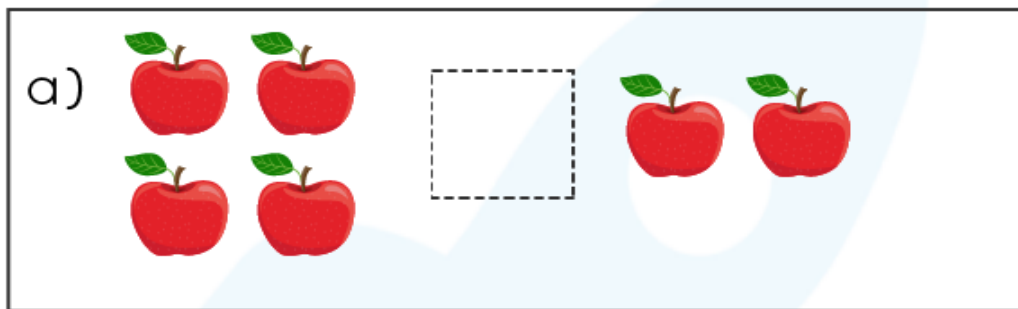
Greater Than Less Than Worksheets First Grade

Q1.) Compare the numbers and place the 'greater than' ($>$) and 'less than' ($<$) symbols correctly.

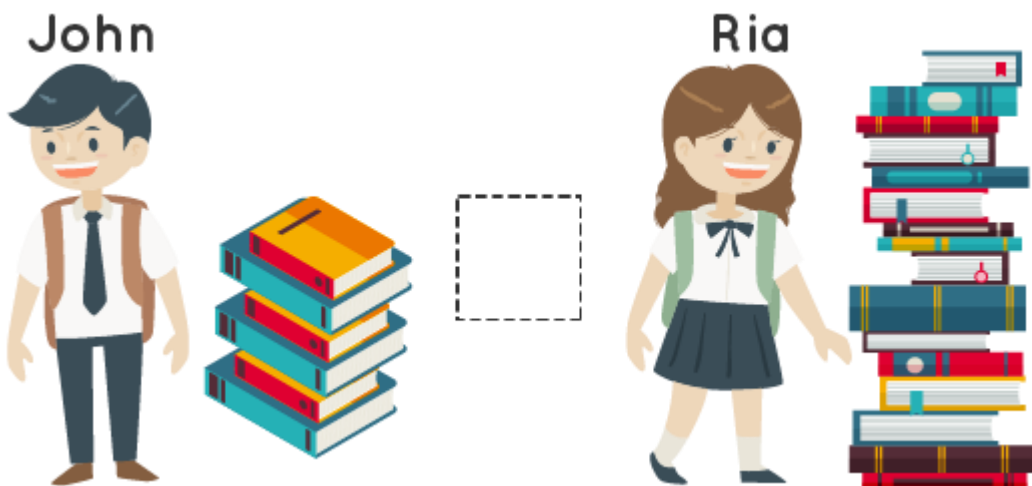
a.) $56 \underline{\hspace{1cm}} 86$

b.) $78 \underline{\hspace{1cm}} 87$

Q2.) Can you count the fruits and place the correct symbol ($<$ or $>$)?




Q3.) John has 6 books and Ria has 16 books. Place $<$, $>$, or $=$ to show who has more books.



Q4.) Circle the greater number in each pair.

a.) 67 or 48? b.) 34 or 96?

Q5.) Compare the quantities and place the correct symbol.



Q6.) Compare the given numbers with the help of the number line.



(a) 34 43

(b) 38 48

Q7.) Which team has more points?

Team A = 343 points

Team B = 434 points

Q8.) State whether the following statements are true or false.

a.) 45 is greater than 85 ____

b.) 353 is equal to 344 ____

c.) 627 is less than 639 ____

Q9.) Circle the correct option to fill the blank.

82 is not ____ 88.

a.) Greater than

b.) Less than

Q.10) Jia has a collection of 54 stamps. Jane has a collection of 64 stamps. Who has more stamps?

When you learn math
in an interesting way,
you never forget.



25 Million

Math classes &
counting

100K+

Students learning
Math the right way

20+ Countries

Present across USA, UK,
Singapore, India, UAE & more.

Why choose Cuemath?

"Cuemath is a valuable addition to our family. We love solving puzzle cards. My daughter is now visualizing maths and solving problems effectively!"

- Gary Schwartz

"Cuemath is great because my son has a one-on-one interaction with the teacher. The instructor has developed his confidence and I can see progress in his work. One-on-one interaction is perfect and a great bonus."

- Kirk Riley

"I appreciate the effort that miss Nitya puts in to help my daughter understand the best methods and to explain why she got a problem incorrect. She is extremely patient and generous with Miranda."

- Barbara Cabrera

Get the Cuemath advantage

Book a FREE trial class

ANSWERS

1. a.) $56 < 86$ b.) $78 < 87$	2. a.) 4 apples $>$ 2 apples b.) 3 bananas $<$ 5 bananas	3. John $<$ Ria
4. a.) 67 b.) 96	5. a.) 54 pens $<$ 96 pens b.) 74 books $>$ 47 books	6. a.) $34 < 43$ b.) $38 < 48$
7. Team B	8. a.) False b.) False c.) True	9. a.) Greater than
10. Jane		

FUN FACT

1. The symbol $>$ is used for comparing numbers and values. The rule is that the wide-open side of the sign always faces the bigger number, whereas the closed end points towards the smaller number.
2. Have you heard about the alligator method? Imagine the symbols ($<$ and $>$) to be the mouth of an alligator, and the numbers on each side as the little fish. Now, the alligator will always want to have a greater number of fish. For example, $6 > 3$.

