

Get better at Math.
Get better at
everything.



Come experience the Cuemath methodology and ensure your child stays ahead at math this summer.



**Adaptive
Platform**



**Interactive Visual
Simulations**



**Personalized
Attention**

For Grades 1 - 10



LIVE online classes
by trained and
certified experts.

Get the Cuemath advantage

Book a FREE trial class

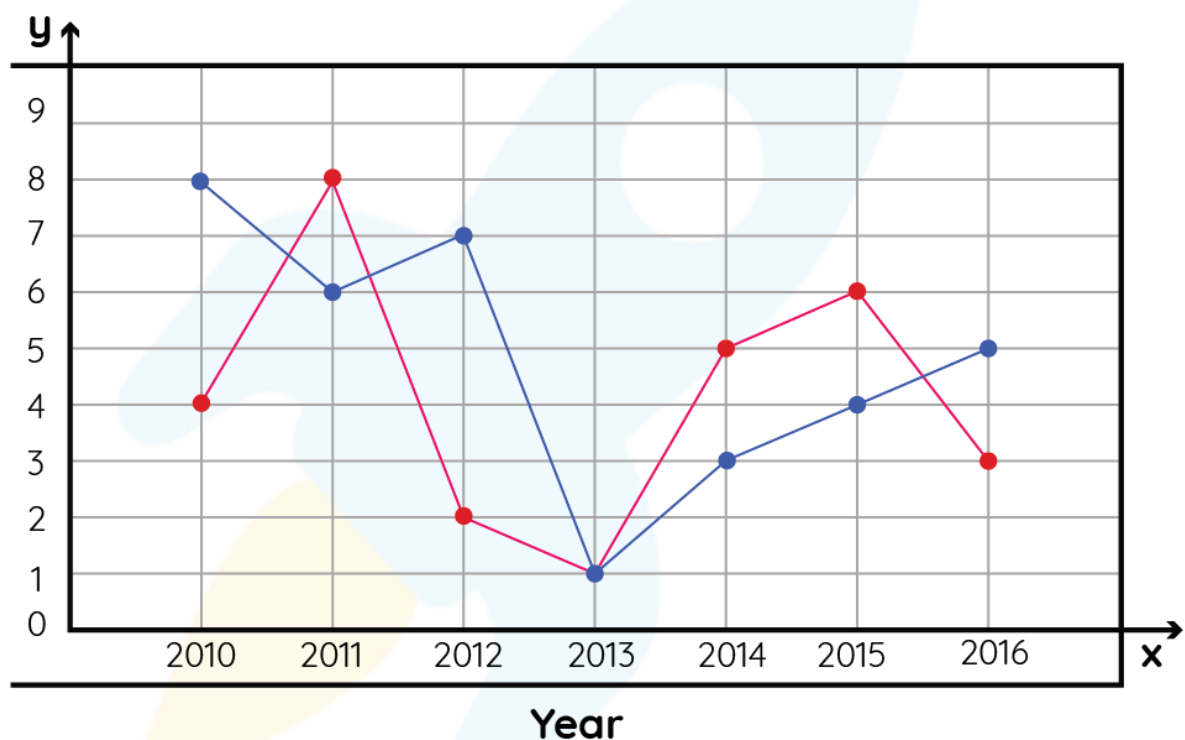
5th Grade Graphing Worksheets

Below is a line graph of number of times triplets born in two cities over the years.

Answer the following questions based on the information given below:

City 1- Red.

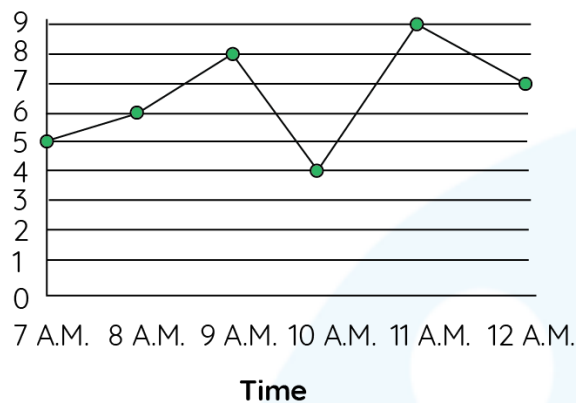
City 2- Blue.



- 1) Which city has maximum number of triplets born from 2010 to 2016?
- 2) Find the difference in the number of triplets born in the year 2013.
- 3) In which year, the difference between the number of triplets born is maximum?
- 4) Which city reached total number of 20 triplets first?

5) What is the difference in total number of triplets in year 2014 and 2015 combined?

Nilsa works in a coffee shop. She was recording the number of customers that come during the morning shift from 7 A.M. to 12 P.M.



6) Find the total number of customers that came that morning.

7) What time did the most people come for coffee?

8) How many customers came at 8 A.M.?

9) Match the following:

Days	Number of cars sold
a) 7 A.M.	i. 9
b) 8 A.M.	ii. 6
c) 9 A.M.	iii. 5
d) 10 A.M.	iv. 4
e) 11 A.M.	v. 7
f) 12 A.M.	vi. 8

10) If twice the number of customers came the next day, find the number of customers who came the next day?

When you learn math
in an interesting way,
you never forget.



25 Million

Math classes &
counting

100K+

Students learning
Math the right way

20+ Countries

Present across USA, UK,
Singapore, India, UAE & more.

Why choose Cuemath?

"Cuemath is a valuable addition to our family. We love solving puzzle cards. My daughter is now visualizing maths and solving problems effectively!"

- Gary Schwartz

"Cuemath is great because my son has a one-on-one interaction with the teacher. The instructor has developed his confidence and I can see progress in his work. One-on-one interaction is perfect and a great bonus."


- Kirk Riley

"I appreciate the effort that miss Nitya puts in to help my daughter understand the best methods and to explain why she got a problem incorrect. She is extremely patient and generous with Miranda."

- Barbara Cabrera

Get the Cuemath advantage

Book a FREE trial class

**ANSWERS**

1)	City 2
2)	0
3)	2012
4)	City 2
5)	4
6)	41
7)	11 A.M.
8)	6 A.M.
9)	a) iii. b) ii. c) vi. d) iv. e) i. f) v.
10)	82

FUN FACT

1. The name **Cartesian** comes from the French mathematician and philosopher René Descartes , who worked to merge [algebra](#) and Euclidean geometry.
2. **Cartesian coordinate system** is a coordinate system used to place points on a [cartesian plane](#) using two numbers, usually called the *x-coordinate* and the *y-coordinate*.
3. The idea of this system was developed in 1637 in two works by Descartes.

