

Get better at Math.
Get better at
everything.



Come experience the Cuemath methodology and ensure your child stays ahead at math this summer.



**Adaptive
Platform**



**Interactive Visual
Simulations**



**Personalized
Attention**

For Grades 1 - 10



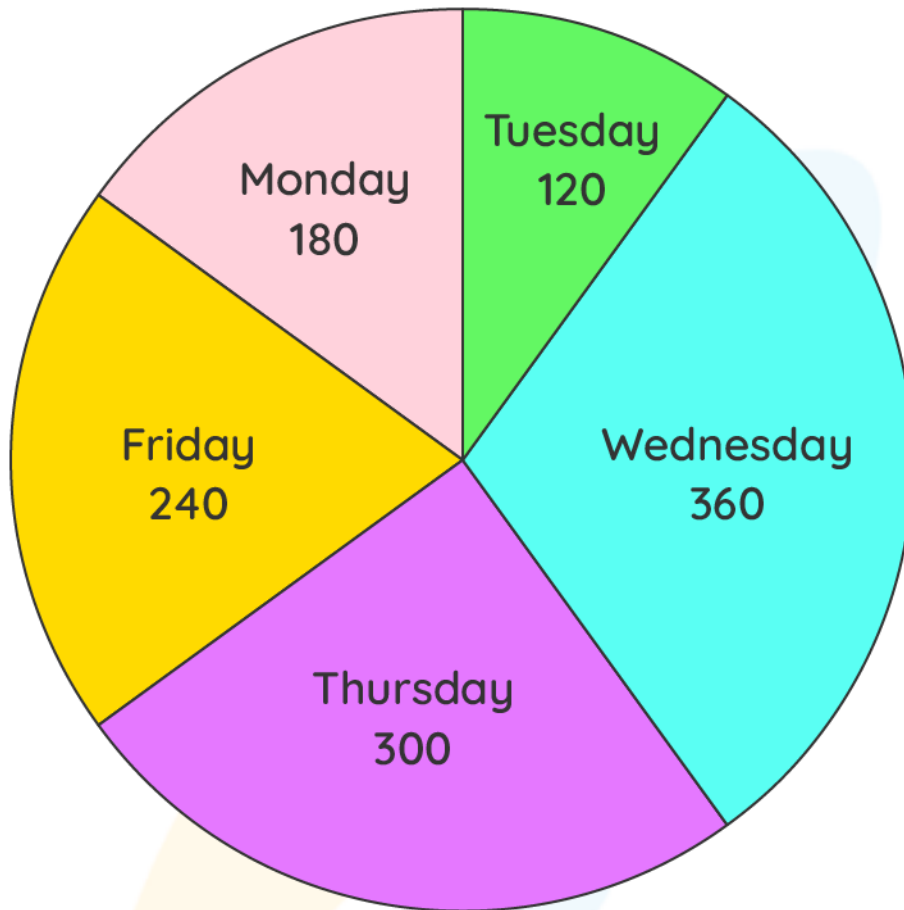
LIVE online classes
by trained and
certified experts.

Get the Cuemath advantage

Book a FREE trial class

GRAPHING WORKSHEET III

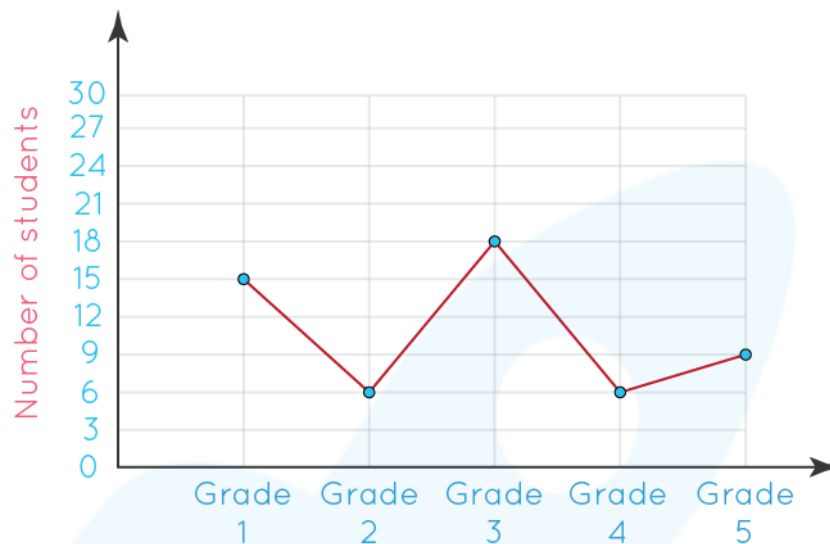
The pie graph shows the information about number of masks sold by a vendor in a week.



Answer the following questions based on the information given below:

- 1) What is the percentage of the masks sold on Tuesday?
- 2) What percentage of masks sold on Friday?
- 3) On which day, masks were sold the most?
- 4) On which day 240 masks were sold?
- 5) What fraction masks were sold on Monday?

Christopher is teaching in the elementary school. He plotted the students on a leave in a particular grade from grade 1 to grade 5. Answer the following questions based on the information given above.



6) Match the following:

Grade	Number of students on leave
i. Grade 1	a) 18
ii. Grade 2	b) 6
iii. Grade 3	c) 9
iv. Grade 4	d) 15
v. Grade 5	e) 6

7) How many were absent in grade 5 and grade 2 combined?

8) In which grade, the number of students absent is 9?

9) Find out number of students absent all together.

10) In which of the class the number of students absent is more than 15?

When you learn math
in an interesting way,
you never forget.



25 Million

Math classes &
counting

100K+

Students learning
Math the right way

20+ Countries

Present across USA, UK,
Singapore, India, UAE & more.

Why choose Cuemath?

"Cuemath is a valuable addition to our family. We love solving puzzle cards. My daughter is now visualizing maths and solving problems effectively!"

- Gary Schwartz

"Cuemath is great because my son has a one-on-one interaction with the teacher. The instructor has developed his confidence and I can see progress in his work. One-on-one interaction is perfect and a great bonus."


- Kirk Riley

"I appreciate the effort that miss Nitya puts in to help my daughter understand the best methods and to explain why she got a problem incorrect. She is extremely patient and generous with Miranda."

- Barbara Cabrera

Get the Cuemath advantage

Book a FREE trial class

**ANSWERS**

1)	10 %
2)	20 %
3)	Wednesday
4)	Friday
5)	3/20
6)	i. d ii. b iii. a iv. b v. c
7)	15
8)	Grade 5
9)	54
10)	Grade 3

FUN FACT

- 1) The name **Cartesian** comes from the French mathematician and philosopher René Descartes , who worked to merge [algebra](#) and Euclidean geometry.
- 2) **Cartesian coordinate system** is a coordinate system used to place points on a [cartesian plane](#) using two numbers, usually called the *x-coordinate* and the *y-coordinate*.
- 3) The idea of this system was developed in 1637 in two works by Descartes.

