

Get better at Math.
Get better at
everything.



Come experience the Cuemath methodology and ensure your child stays ahead at math this summer.



**Adaptive
Platform**



**Interactive Visual
Simulations**



**Personalized
Attention**

For Grades 1 - 10



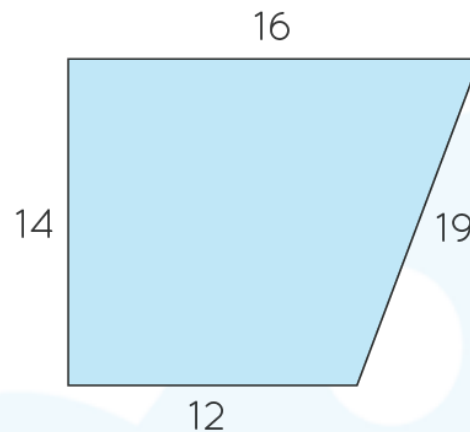
LIVE online classes
by trained and
certified experts.

Get the Cuemath advantage

Book a FREE trial class

5th Grade Geometry Worksheets

1. Find the area of the trapezium given below:

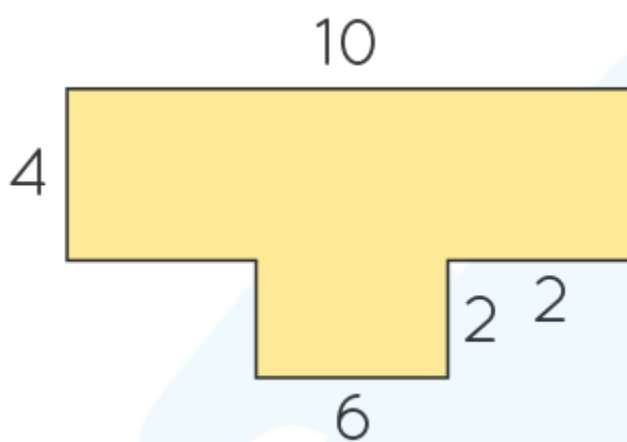


2. Find the volume of a cuboid if the length, width, and height of the cuboid is 13 units, 12 units, and 15 units respectively.
3. Find out the area of a square shown below:

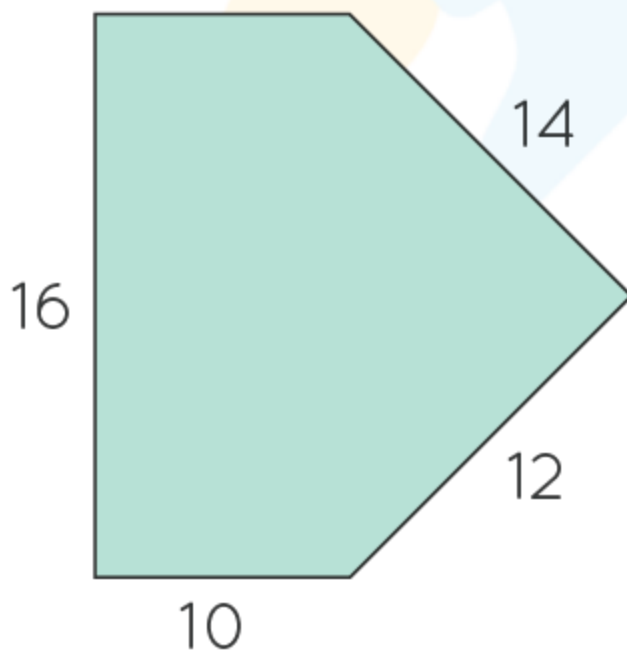


4. Find the area of the square if the length of the square is 66 ft.

5. Find the area of a rectangle of length 11ft and width 4 ft.
6. Find the length of the rectangle if the area and width of the rectangle are 125 sq. in and 25 in respectively.
7. Find the area of the figure given below:

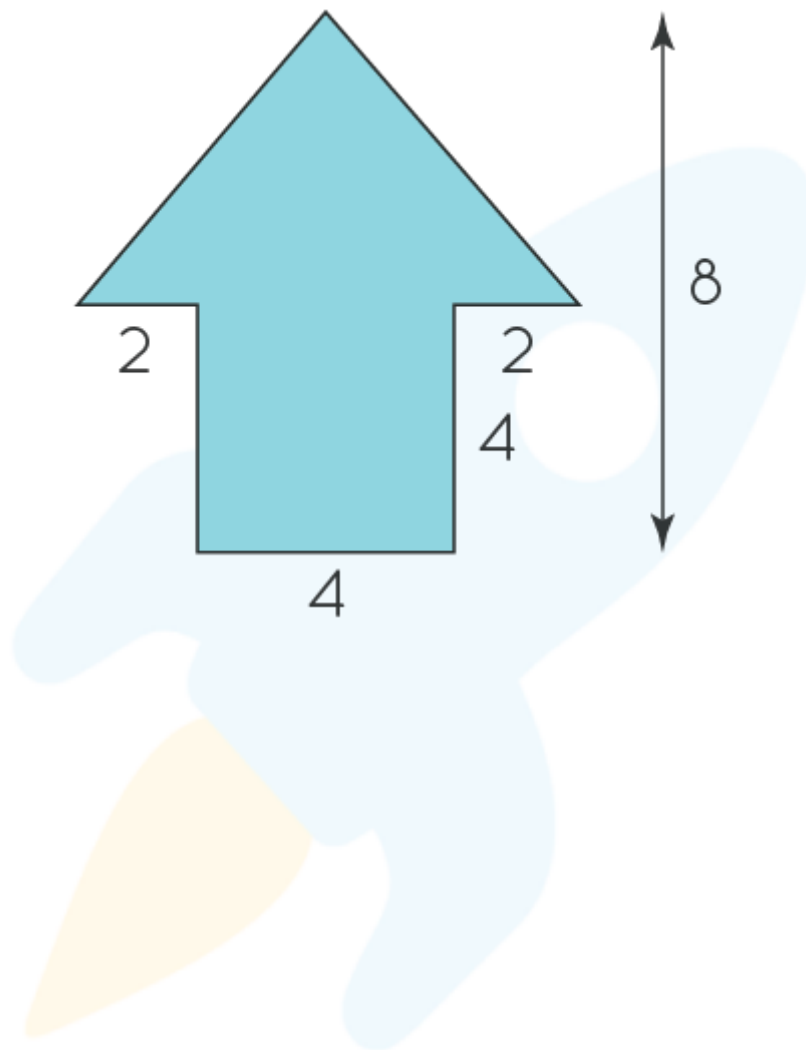


8. Find the perimeter of the given shape:



9. If the volume of a cube is 64 cubic units, find the length of the cube.

10. Find the area of the given figure:



When you learn math
in an interesting way,
you never forget.



25 Million

Math classes &
counting

100K+

Students learning
Math the right way

20+ Countries

Present across USA, UK,
Singapore, India, UAE & more.

Why choose Cuemath?

"Cuemath is a valuable addition to our family. We love solving puzzle cards. My daughter is now visualizing maths and solving problems effectively!"

- Gary Schwartz

"Cuemath is great because my son has a one-on-one interaction with the teacher. The instructor has developed his confidence and I can see progress in his work. One-on-one interaction is perfect and a great bonus."


- Kirk Riley

"I appreciate the effort that miss Nitya puts in to help my daughter understand the best methods and to explain why she got a problem incorrect. She is extremely patient and generous with Miranda."

- Barbara Cabrera

Get the Cuemath advantage

Book a FREE trial class

ANSWERS

1. 196 sq. units	2. 2340 cubic units
3. 5776 sq. inches	4. 4356 sq. ft.
5. 44 sq. ft.	6. 5 units
7. 52 units	8. 62 units
9. 4 units	10. 24 sq. units

FUN FACT

1. All squares are rectangles but all rectangles are not square.
2. Out of all the regular shapes, only 5 types of 3-D regular solids can be formed and they are called as platonic solids.
3. Actual shape of the Earth is not spherical, the correct name for the shape of the Earth is oblate spheroid.

