

Get better at Math.
Get better at
everything.



Come experience the Cuemath methodology and ensure your child stays ahead at math this summer.



**Adaptive
Platform**



**Interactive Visual
Simulations**



**Personalized
Attention**

For Grades 1 - 10



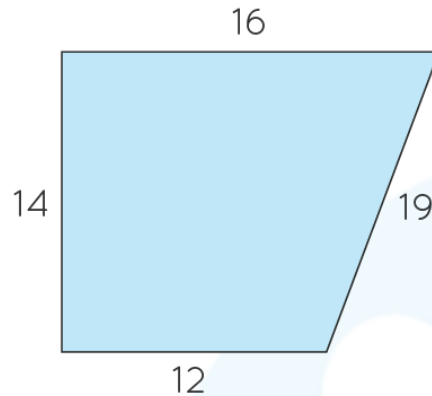
LIVE online classes
by trained and
certified experts.

Get the Cuemath advantage

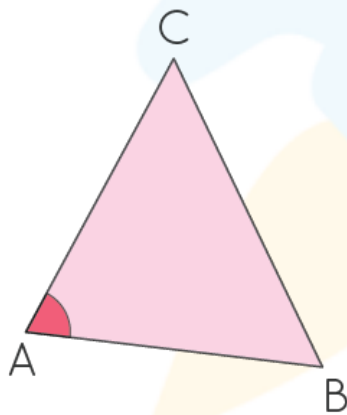
Book a FREE trial class

5th Grade Geometry Worksheets

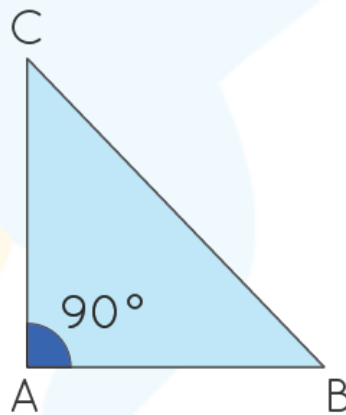
1. Find the perimeter of the polygon given below:



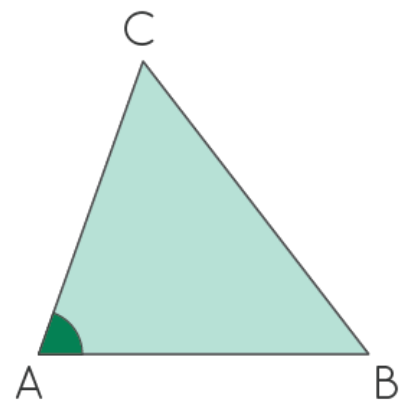
2. Identify the types of triangles shown below (acute, right, or obtuse):



(i)



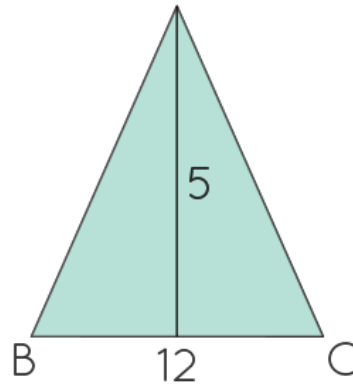
(ii)



(iii)

3. Find the length of a square if the area of the square is 144 sq. ft.
4. Find the length of the rectangle if the area and width of the rectangle are 196 sq. in and 28 in respectively.

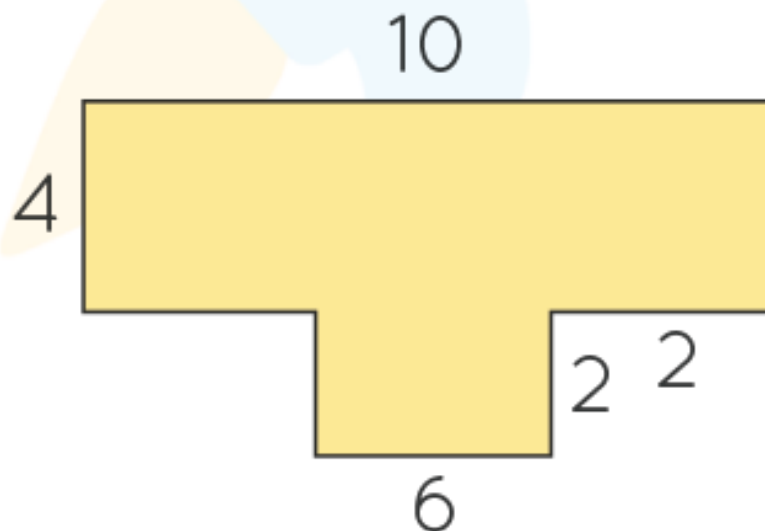
5. Find the area of the triangle given below:



6. Find the perimeter of the rhombus whose length of the side is 44 ft.

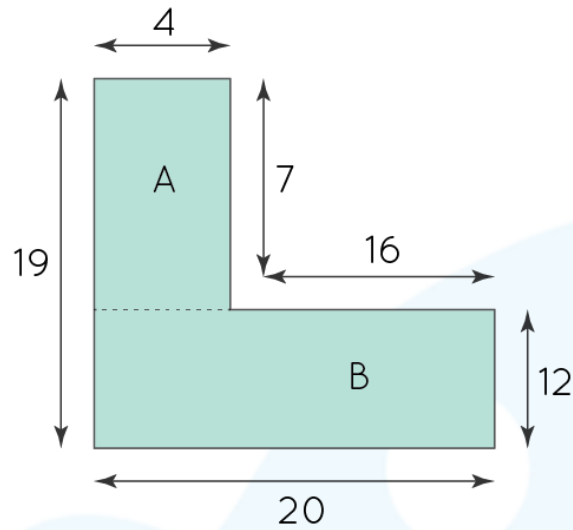
7. Find the perimeter of a circle if the radius of the circle is 35ft.

8. Find the perimeter of the figure given below:



9. Find the volume of a cube if the length of the cube is 4 units.

10. Find the perimeter of the given figure:



When you learn math
in an interesting way,
you never forget.



25 Million

Math classes &
counting

100K+

Students learning
Math the right way

20+ Countries

Present across USA, UK,
Singapore, India, UAE & more.

Why choose Cuemath?

"Cuemath is a valuable addition to our family. We love solving puzzle cards. My daughter is now visualizing maths and solving problems effectively!"

- Gary Schwartz

"Cuemath is great because my son has a one-on-one interaction with the teacher. The instructor has developed his confidence and I can see progress in his work. One-on-one interaction is perfect and a great bonus."


- Kirk Riley

"I appreciate the effort that miss Nitya puts in to help my daughter understand the best methods and to explain why she got a problem incorrect. She is extremely patient and generous with Miranda."

- Barbara Cabrera

Get the Cuemath advantage

Book a FREE trial class

ANSWERS

1. 61 units	2. I) Obtuse ii) Right iii) Acute
3. 12 ft.	4. 7 units.
5. 30 sq. units	6. 176 units
7. 220 units.	8. 36 units.
9. 64 cubic units	10. 94 units

FUN FACT

1. A square is a special type of rectangle.
2. There is an edible plant okra which has a shape exactly like a pentagon.
3. Beehives have a hexagonal shape.

