

Get better at Math.
Get better at
everything.



Come experience the Cuemath methodology and ensure your child stays ahead at math this summer.



Adaptive Platform



Interactive Visual Simulations



Personalized Attention

For Grades 1 - 10



LIVE online classes
by trained and
certified experts.

Get the Cuemath advantage

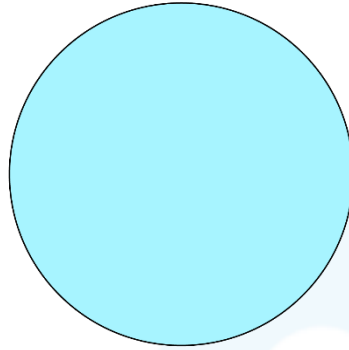
Book a FREE trial class

2nd Grade Geometry Worksheets

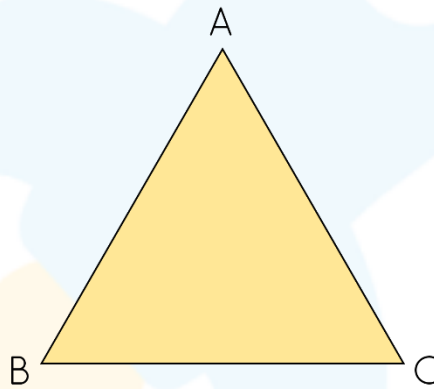
1. Select the correct option.

Below figure is _____.


a) Closed Shape b) Open Shape



2. Number of corners in the given figure are _____.



3. Look at the figure and answer the questions.

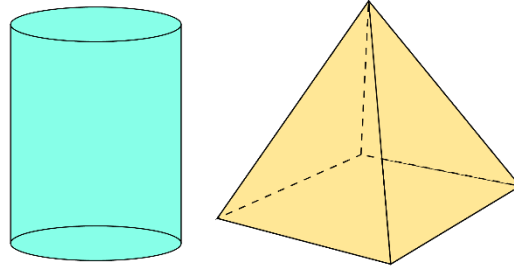


a) Number of faces = _____

b) Number of edges = _____

c) Number of vertices = _____

4. Which shape has a circular face?




5. A flute resembles a _____.

- a) Cylinder b) Cone

6. Which shape is like a sphere?



7. Identify the number of sides and vertices in the given shapes.



Number of Sides = _____
Number of Vertices = _____




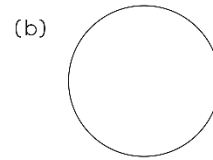
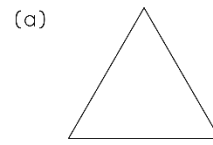
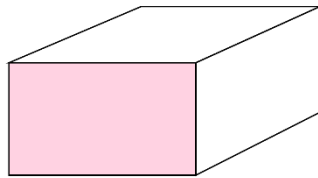
Number of Sides = ____
Number of Vertices = ____

8. Tick the correct option:

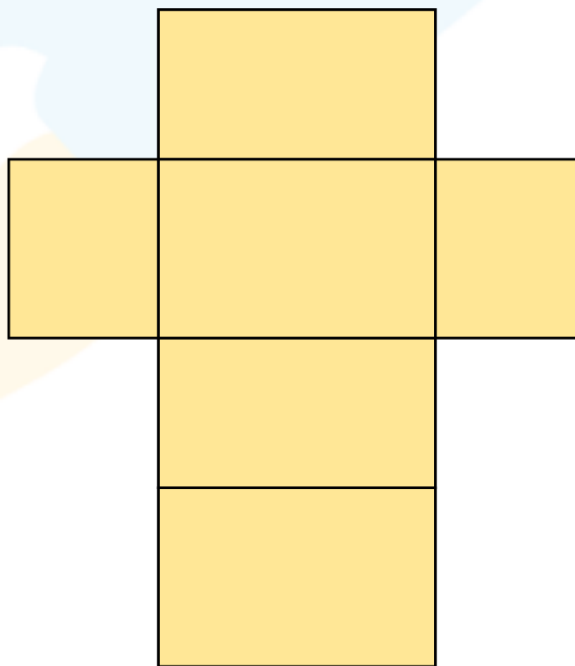
I have one vertex. I am a _____?

- a) Cone
b) Cylinder
c) Sphere

9. Match the basic plane shape with the colored face of the solid shape.



10. Identify the net of the solid shape.



a) Cone b) Cuboid c) Cube

**When you learn math
in an interesting way,
you never forget.**



25 Million

Math classes &
counting

100K+

Students learning
Math the right way

20+ Countries

Present across USA, UK,
Singapore, India, UAE & more.

Why choose Cuemath?

"Cuemath is a valuable addition to our family. We love solving puzzle cards. My daughter is now visualizing maths and solving problems effectively!"

- Gary Schwartz

"Cuemath is great because my son has a one-on-one interaction with the teacher. The instructor has developed his confidence and I can see progress in his work. One-on-one interaction is perfect and a great bonus."

- Kirk Riley

"I appreciate the effort that miss Nitya puts in to help my daughter understand the best methods and to explain why she got a problem incorrect. She is extremely patient and generous with Miranda."

- Barbara Cabrera

Get the Cuemath advantage

Book a FREE trial class

**ANSWERS**

1.	b)
2.	3 Corners
3.	a) 3 b) 2 c) 0
4.	a)
5.	a)
6.	b)
7.	a) No Sides No Vertices. b) 4 Sides and 4 Vertices.
8.	a)
9.	d)
10.	b)

FUN FACT

1. The handkerchief you carry is square in shape.
2. A circle is a closed two-dimensional figure which is round in shape.
3. Geometry is a branch in mathematics that deals with all forms of shapes and other construction.
4. Geometry (from the Ancient Greek: γεωμετρία; geo- "earth", -metron "measurement") is a branch of mathematics.

