

Get better at Math.
Get better at
everything.



Come experience the Cuemath methodology and ensure your child stays ahead at math this summer.



**Adaptive
Platform**



**Interactive Visual
Simulations**



**Personalized
Attention**

For Grades 1 - 10



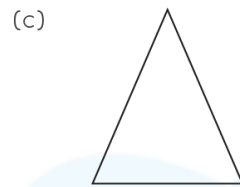

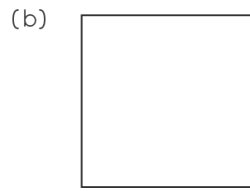
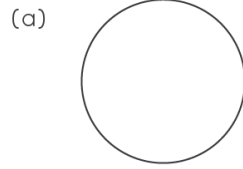
LIVE online classes
by trained and
certified experts.

Get the Cuemath advantage


Book a FREE trial class

1st Grade Geometry Worksheets

1. Match the real life objects to similar shapes.




2. Which shape is formed if a rectangle is cut in half as.

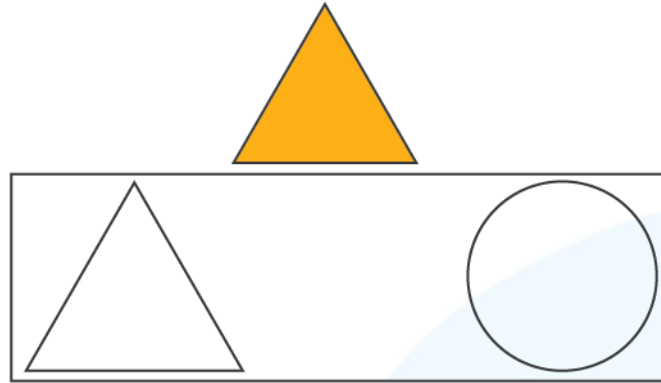


- a) Triangle
- b) Rectangle

3. Choose the odd one out.



4. How many sides are there in a Triangle?
5. How many points are needed to form a rectangle?
6. Shade the shape which matches the following



7. Choose the odd one out from the following.

(a)



(b)



(c)



(d)







8. Which shape has four sides?

- a) Triangle
- b) Rectangle

9. Can a circle be formed by joining 1 point?

- a) Yes b) No

10. Match the shapes to their names.

(a) 	i) Triangle
(b) 	ii) Square
(b) 	iii) Rectangle
(d) 	iv) Circle

**When you learn math
in an interesting way,
you never forget.**



25 Million

Math classes &
counting

100K+

Students learning
Math the right way

20+ Countries

Present across USA, UK,
Singapore, India, UAE & more.

Why choose Cuemath?

"Cuemath is a valuable addition to our family. We love solving puzzle cards. My daughter is now visualizing maths and solving problems effectively!"

- Gary Schwartz

"Cuemath is great because my son has a one-on-one interaction with the teacher. The instructor has developed his confidence and I can see progress in his work. One-on-one interaction is perfect and a great bonus."

- Kirk Riley

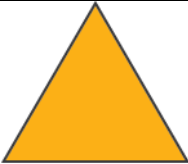
"I appreciate the effort that miss Nitya puts in to help my daughter understand the best methods and to explain why she got a problem incorrect. She is extremely patient and generous with Miranda."

- Barbara Cabrera

Get the Cuemath advantage

Book a FREE trial class

**ANSWERS**

1.	a) - 2 b) - 3 c) - 1
2.	b.
3.	b.
4.	3 Sides
5.	4 points
6.	
7.	d.
8.	b.
9.	b.
10.	a. - iv. b. - ii. c. - i. d. - iii.

1. Geometry is a branch in mathematics that deals with all forms of shapes and other construction.
2. Geometry (from the Ancient Greek: γεωμετρία; geo- "earth", -metron "measurement") is a branch of mathematics.
3. In geometry a circle is a shape that does not have any sides or corners.

