

Get better at Math.
Get better at
everything.



Come experience the Cuemath methodology and ensure your child stays ahead at math this summer.



**Adaptive
Platform**



**Interactive Visual
Simulations**



**Personalized
Attention**

For Grades 1 - 10




LIVE online classes
by trained and
certified experts.

Get the Cuemath advantage

Book a FREE trial class

1st Grade Geometry Worksheets

1. Are three points needed to form a triangle?



- a. No
- b. Yes

2. How many sides are there in this shape?



- a. 2
- b. 3
- c. 4
- d. 5

3. Match the shapes to their names.



1. Triangle

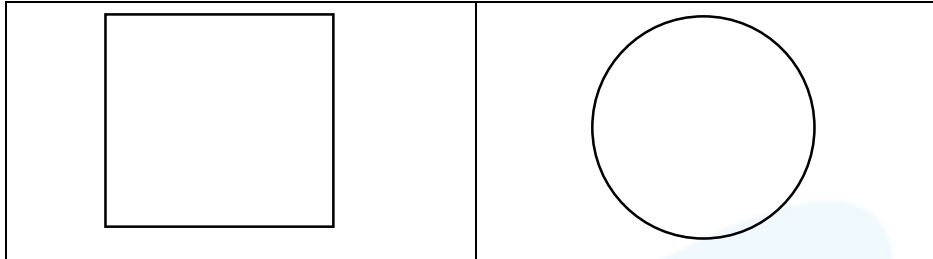


2. Square

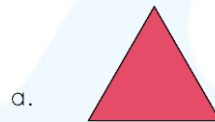


3. Circle


4. Shade the shape which matches the following.



5. Choose the odd one out from the following.









6. Which shape is formed if a rectangle is cut in half as.



- a. Triangle
- b. Rectangle





7. Match the real life objects to similar shapes.

a.		1.	
b.		2.	
c.		3.	

8. Which shape has four sides?

- a) Circle
- b) Square

9. Choose the odd one out.

a.	
b.	
c.	
d.	

10. Can a square be formed by joining 2 points?

- a) Yes
- b) No

**When you learn math
in an interesting way,
you never forget.**



25 Million

Math classes &
counting

100K+

Students learning
Math the right way

20+ Countries

Present across USA, UK,
Singapore, India, UAE & more.

Why choose Cuemath?

"Cuemath is a valuable addition to our family. We love solving puzzle cards. My daughter is now visualizing maths and solving problems effectively!"

- Gary Schwartz

"Cuemath is great because my son has a one-on-one interaction with the teacher. The instructor has developed his confidence and I can see progress in his work. One-on-one interaction is perfect and a great bonus."

- Kirk Riley


"I appreciate the effort that miss Nitya puts in to help my daughter understand the best methods and to explain why she got a problem incorrect. She is extremely patient and generous with Miranda."

- Barbara Cabrera

Get the Cuemath advantage

Book a FREE trial class

**ANSWERS**

1.	b.
2.	c.
3.	a. - 2. b. - 3. c. - 1.
4.	
5.	b.
6.	b.
7.	a. - 2. b. - 3. c. - 1.
8.	b.
9.	b.
10.	b.

1. Geometry is a branch in mathematics that deals with all forms of shapes and other construction.
2. Geometry (from the Ancient Greek: γεωμετρία; geo- "earth", -metron "measurement") is a branch of mathematics.
3. In geometry a circle is a shape that does not have any sides or corners.

