

Get better at Math.
Get better at
everything.



Come experience the Cuemath methodology and ensure your child stays ahead at math this summer.



**Adaptive
Platform**



**Interactive Visual
Simulations**



**Personalized
Attention**

For Grades 1 - 10



LIVE online classes
by trained and
certified experts.


Get the Cuemath advantage

Book a FREE trial class


1st Grade Geometry Worksheets

1. How many points are needed to form a line?

- a. 2 Points
- b. 1 Point



2. Match the shapes to their names?



1. Square

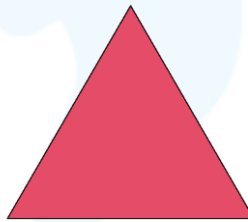


2. Circle



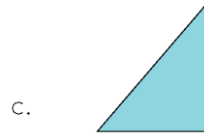
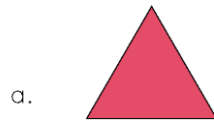
3. Triangle

3. How many sides are there in this shape?

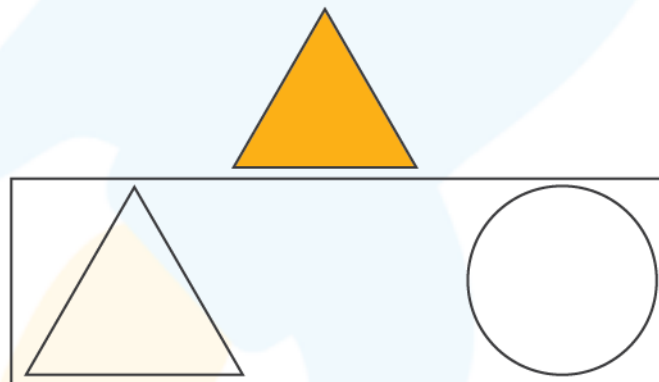


- a. 2
- b. 3
- c. 4
- d. 5


4. Choose the odd one out from the following.



5. Shade the shape which matches the following.





6. Which shape is formed if a rectangle is cut in half as.





- a. Triangle
- b. Rectangle


7. Match the real life objects to similar shapes.


a. 

b. 

c. 

1. 


2. 


3. 


8. Which shape has no sides?

- a) Circle
- b) Square

9. Choose the odd one out.

a. 

b. 

c. 

10. Can a triangle be formed by joining 2 points?

- a) Yes
- b) No

**When you learn math
in an interesting way,
you never forget.**



25 Million

Math classes &
counting

100K+

Students learning
Math the right way

20+ Countries

Present across USA, UK,
Singapore, India, UAE & more.

Why choose Cuemath?

"Cuemath is a valuable addition to our family. We love solving puzzle cards. My daughter is now visualizing maths and solving problems effectively!"

- Gary Schwartz

"Cuemath is great because my son has a one-on-one interaction with the teacher. The instructor has developed his confidence and I can see progress in his work. One-on-one interaction is perfect and a great bonus."

- Kirk Riley

"I appreciate the effort that miss Nitya puts in to help my daughter understand the best methods and to explain why she got a problem incorrect. She is extremely patient and generous with Miranda."


- Barbara Cabrera

Get the Cuemath advantage

Book a FREE trial class



ANSWERS

1.	a.
2.	a. - 2. b. - 3. c. - 1.
3.	b.
4.	d.
5.	
6.	a.
7.	a. - 3. b. - 1. c. - 2.
8.	a.
9.	c.
10.	b.

1. Geometry is a branch in mathematics that deals with all forms of shapes and other construction.
2. Geometry (from the Ancient Greek: γεωμετρία; geo- "earth", -metron "measurement") is a branch of mathematics.
3. In geometry a circle is a shape that does not have any sides or corners.

