

Get better at Math.
Get better at
everything.



Come experience the Cuemath methodology and ensure your child stays ahead at math this summer.



**Adaptive
Platform**



**Interactive Visual
Simulations**



**Personalized
Attention**

For Grades 1 - 10



LIVE online classes
by trained and
certified experts.

Get the Cuemath advantage


Book a FREE trial class

Geometry Worksheets

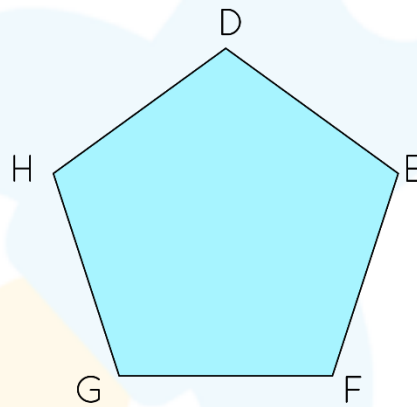
1. Select the correct option.

Below figure is _____.

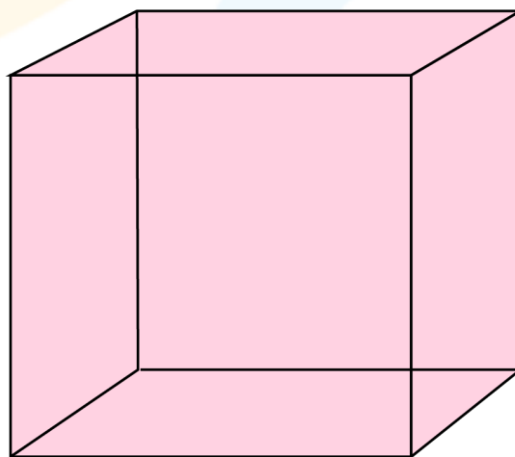
a) Closed Shape b) Open Shape



2. Number of corners in the given figure are _____.



3. Look at the figure and answer the questions.



a) Number of faces = _____

b) Number of edges = _____

c) Number of vertices = _____

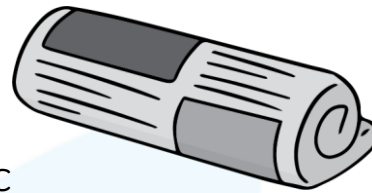
4. How many curved surfaces does a cone have _____?
5. A cone has _____ faces and _____ edges.
6. Which shape is like a cylinder?



b

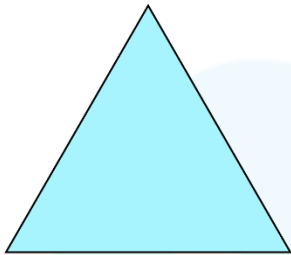


c



7. Identify if the following shapes are 2D or 3D.

(a)



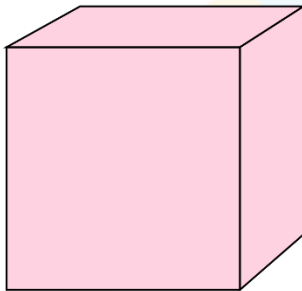
2D Shape

☐

3D Shape

☐

(b)



2D Shape


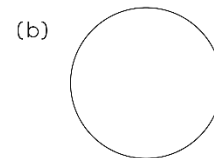
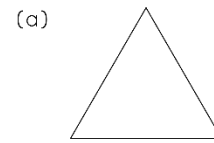
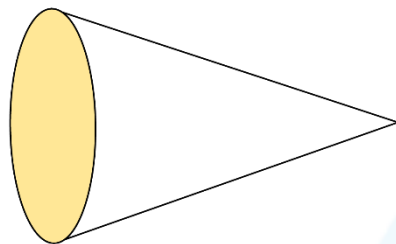
☐

3D Shape

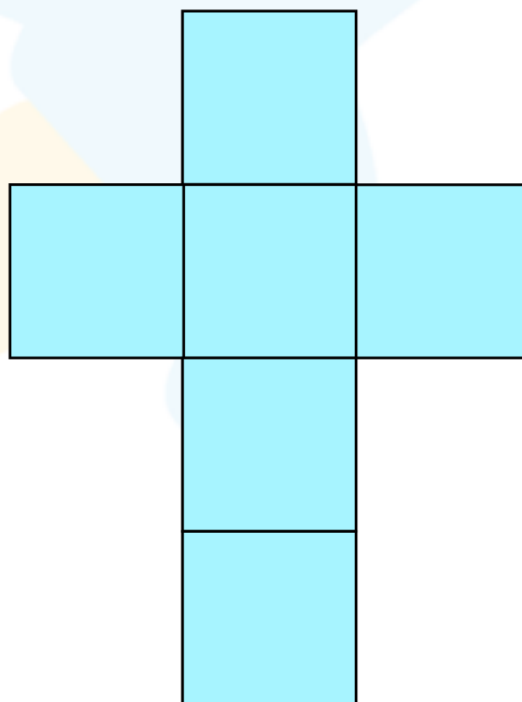
☐

8. A square has _____ equal sides.

9. Match the basic plane shape with the colored face of the solid shape.



10. Identify the net of the solid shape.



a) Cone b) Cuboid c) Cube

When you learn math
in an interesting way,
you never forget.



25 Million

Math classes &
counting

100K+

Students learning
Math the right way

20+ Countries

Present across USA, UK,
Singapore, India, UAE & more.

Why choose Cuemath?

"Cuemath is a valuable addition to our family. We love solving puzzle cards. My daughter is now visualizing maths and solving problems effectively!"

- Gary Schwartz

"Cuemath is great because my son has a one-on-one interaction with the teacher. The instructor has developed his confidence and I can see progress in his work. One-on-one interaction is perfect and a great bonus."

- Kirk Riley

"I appreciate the effort that miss Nitya puts in to help my daughter understand the best methods and to explain why she got a problem incorrect. She is extremely patient and generous with Miranda."

- Barbara Cabrera

Get the Cuemath advantage

Book a FREE trial class

**ANSWERS**

1.	b)
2.	5 Corners
3.	a) 6 b) 12 c) 8
4.	1
5.	2, 1
6.	a)
7.	a) 2D b) 3D
8.	4
9.	b)
10.	c)

FUN FACT

1. Geometry is a branch in mathematics that deals with all forms of shapes and other construction.
2. Geometry (from the Ancient Greek: γεωμετρία; geo- "earth", -metron "measurement") is a branch of mathematics.
3. In geometry a circle is a shape that does not have any sides or corners.

